

Mechanics of Materials



دانشگاه کردستان
University of Kurdistan
زانکۆی کوردستان

Ferdinand P.Beer, E.Russel Johnston, Jr., John T.Dewolf

Other Reference:

J.Wat Oler “Lectures notes on Mechanics od Materials”

Ibrahim A.Assakkaf “Lectures notes on Mechanics od Materials”

Transformations of Stress and Strain

By: Kaveh Karami

Associate Prof. of Structural Engineering

<https://prof.uok.ac.ir/Ka.Karami>

Transformations of Stress and Strain

□ Introductions

– Formulas for determining normal and shearing stresses on a specific planes are:

- Axially loaded bars
- Circular shafts
- Beams

Transformations of Stress and Strain

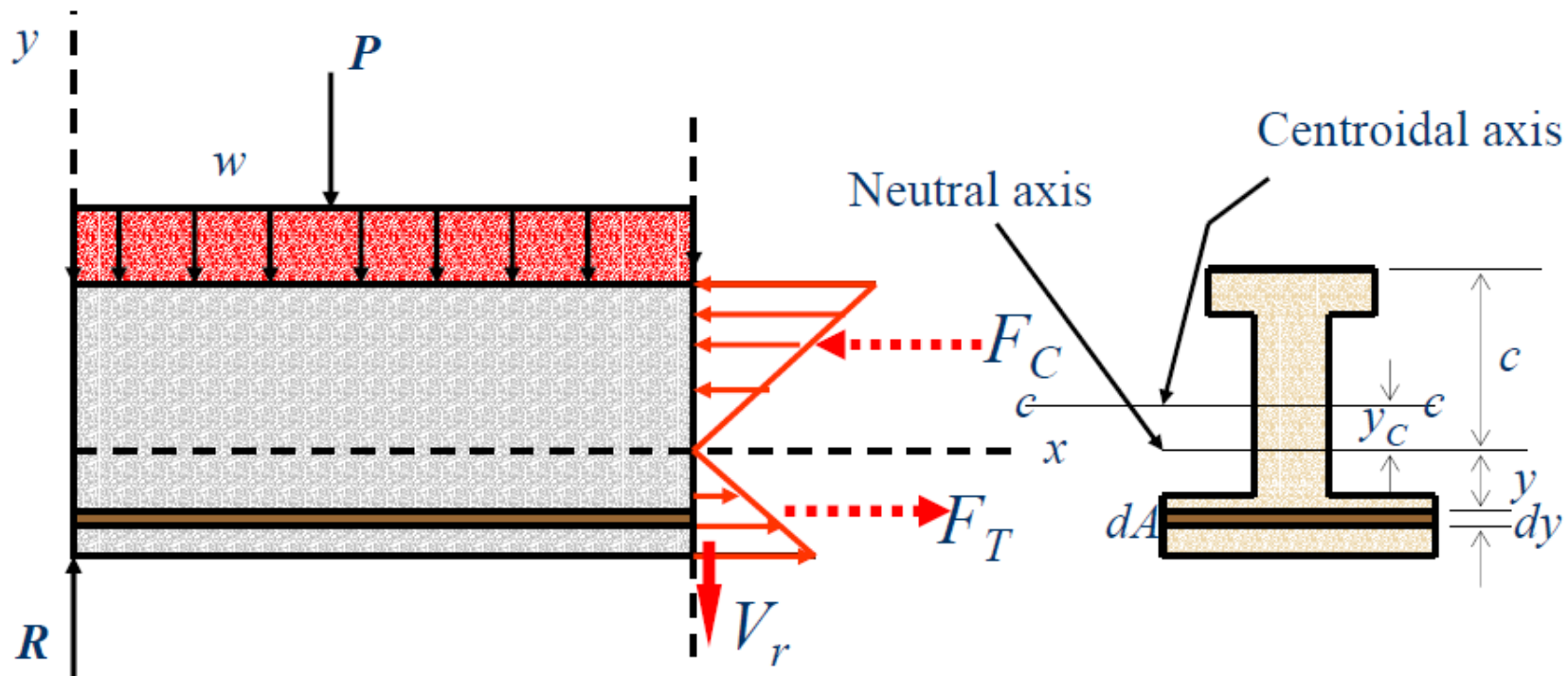
□ Introductions

The elastic flexural formula for normal stress is given by:

$$\sigma_x = \frac{M \cdot y}{I}$$

$$\sigma_{\max} = \frac{M \cdot c}{I}$$

Distribution of Normal Stress in a Beam Cross Section

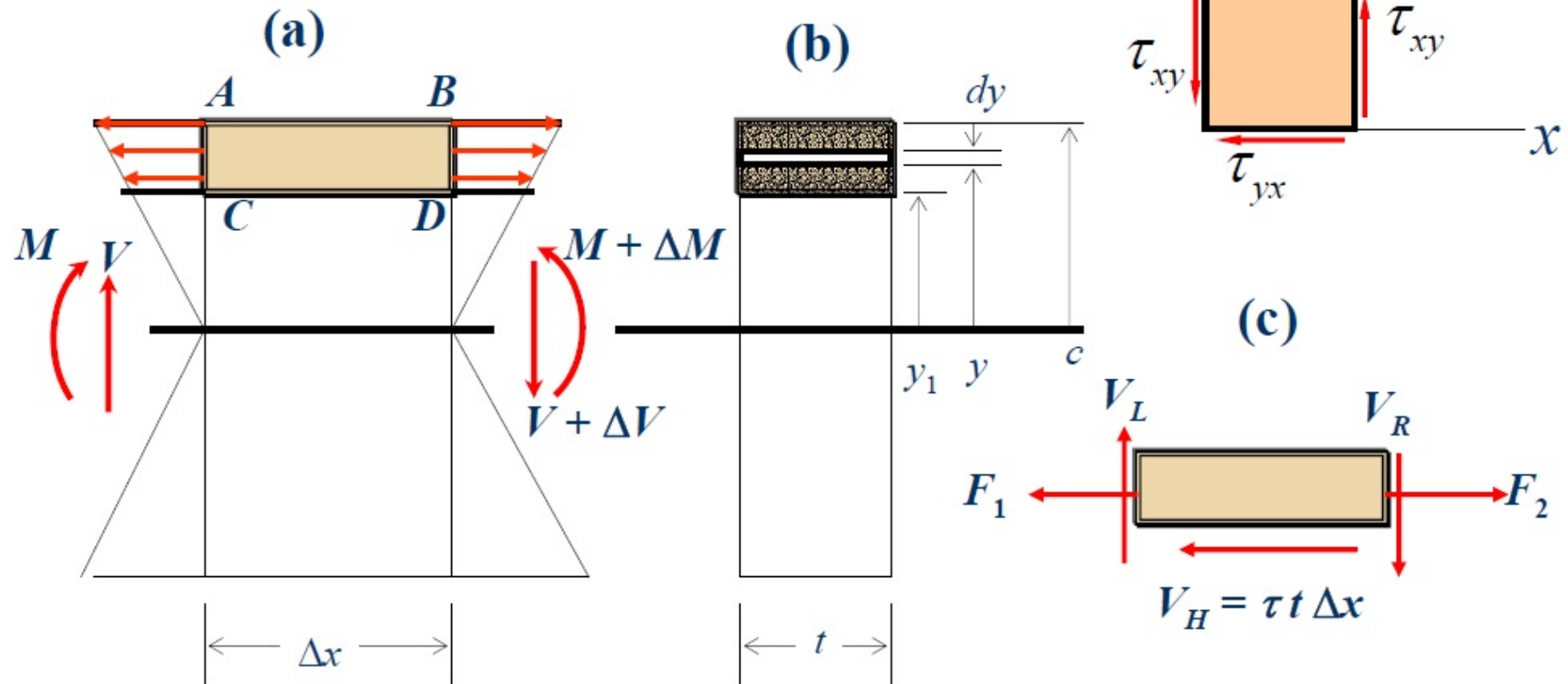


Transformations of Stress and Strain

□ Introductions

The shearing stress at the same point on the cross section of the beam is given by:

$$\tau = \frac{V \cdot Q}{I \cdot t}$$



Transformations of Stress and Strain

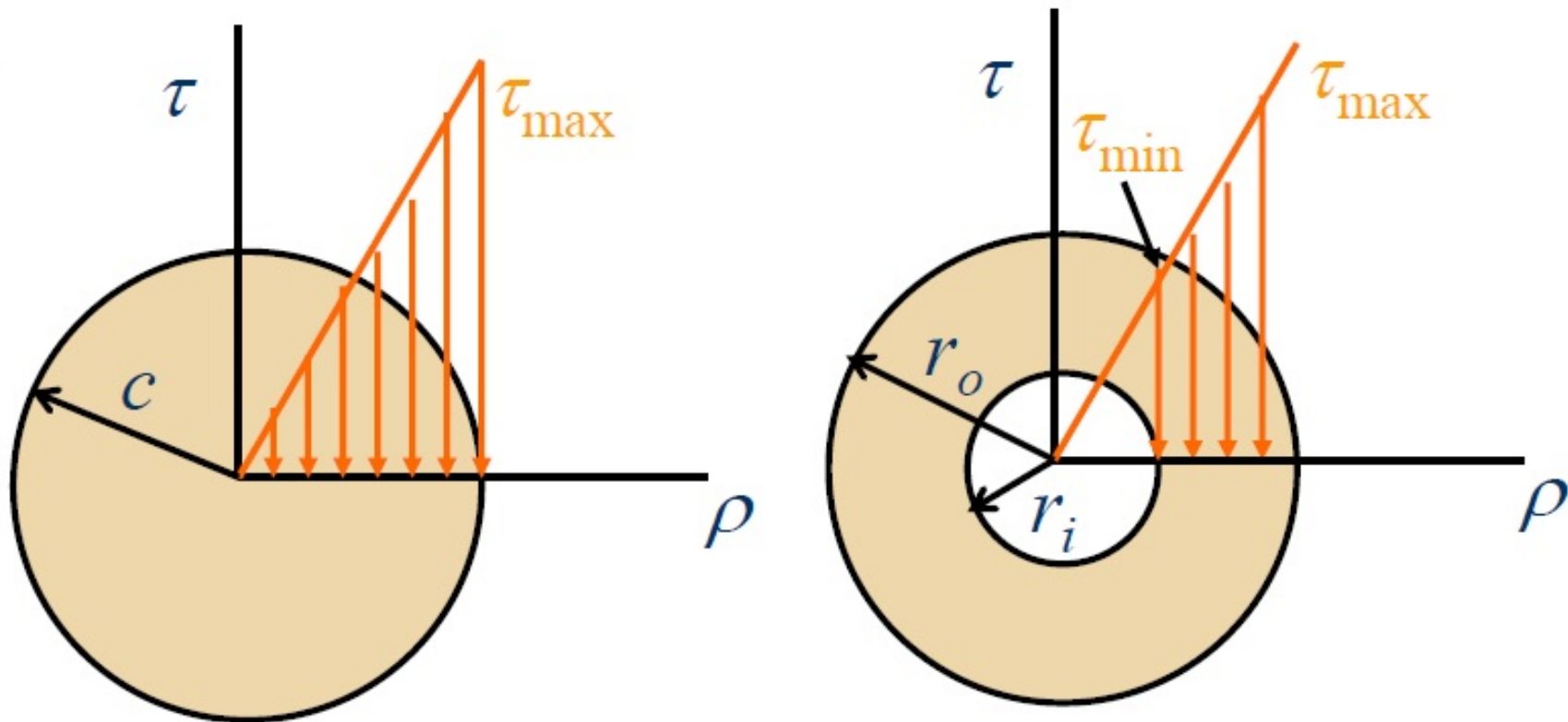
□ Introductions

the stress on circular shafts due to torsion is given by:

$$\tau_{\rho} = \frac{T \cdot \rho}{J}$$

$$\tau_{\max} = \frac{T \cdot c}{J}$$

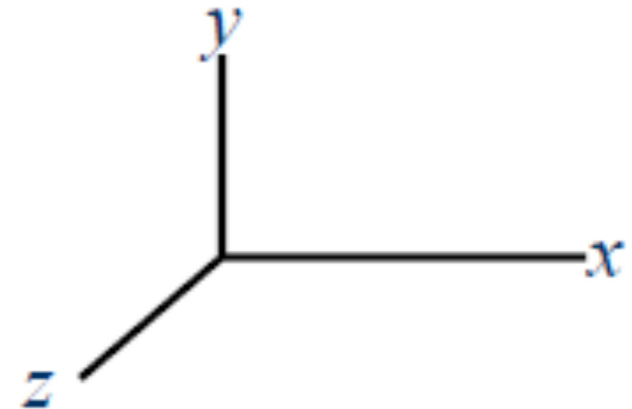
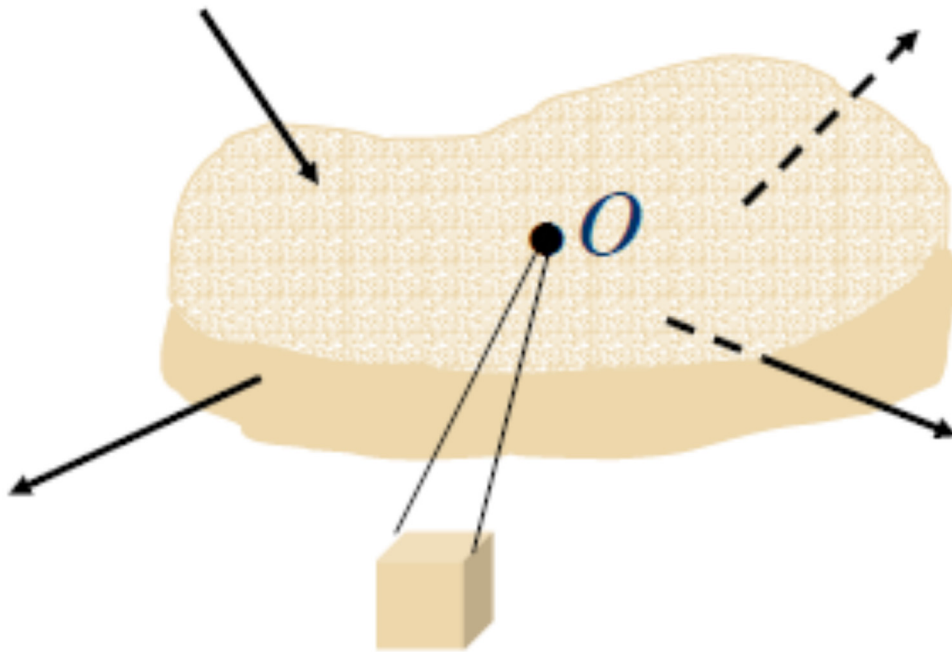
Distribution of Normal Stress in a Beam Cross Section



Transformations of Stress and Strain

□ State of Stress

Stress at a point in a material body has been defined as a force per unit area. But this definition is somewhat ambiguous since it depends upon *what area we consider at the point*.

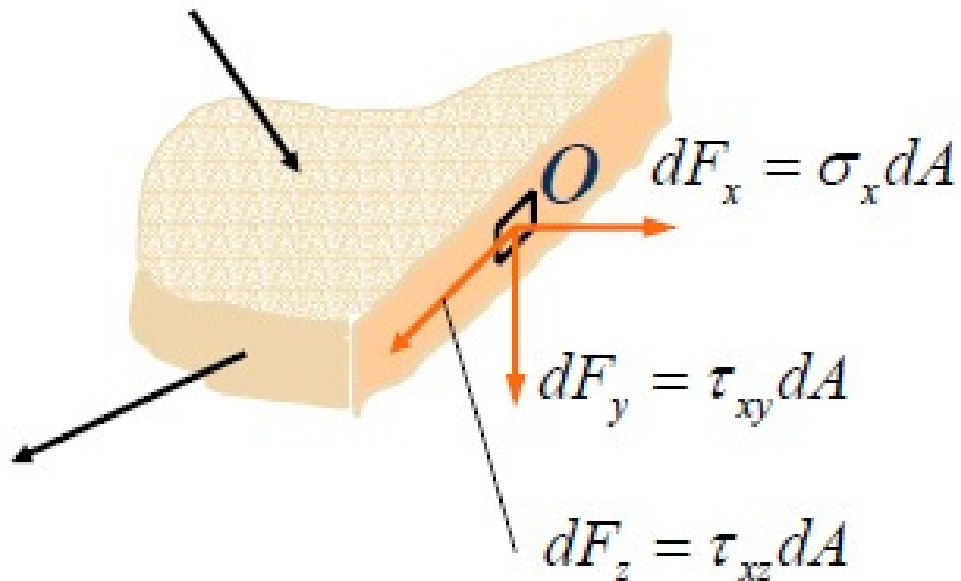


Transformations of Stress and Strain

□ State of Stress

let us pass a cutting plane through point O perpendicular to the x axis.

If dA is the area, then by definition



$$\sigma_x = \frac{dF_x}{dA}$$

$$\tau_{xy} = \frac{dF_y}{dA}$$

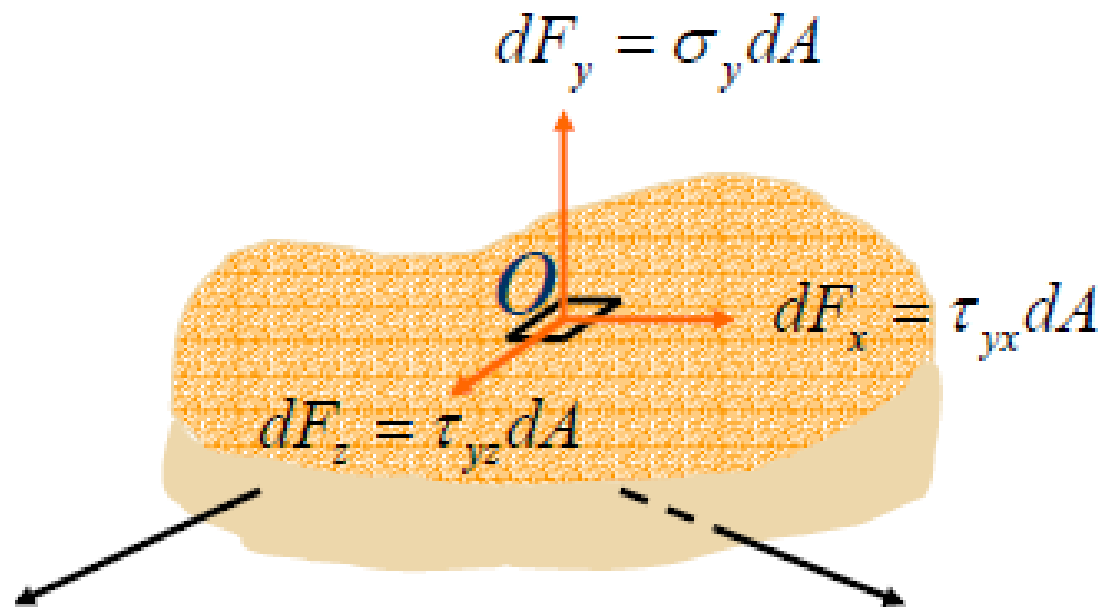
$$\tau_{xz} = \frac{dF_z}{dA}$$

Transformations of Stress and Strain

□ State of Stress

let us pass a cutting plane through point O perpendicular to the y axis.

If dA is the area, then by definition



$$\sigma_y = \frac{dF_y}{dA}$$

$$\tau_{yx} = \frac{dF_x}{dA}$$

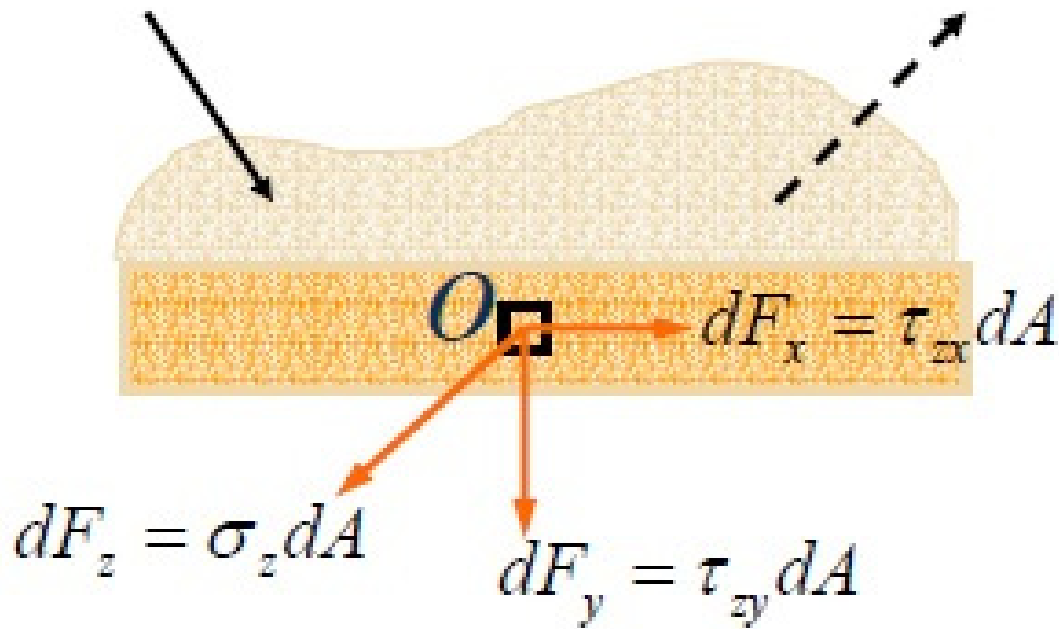
$$\tau_{yz} = \frac{dF_z}{dA}$$

Transformations of Stress and Strain

□ State of Stress

let us pass a cutting plane through point O perpendicular to the z axis.

If dA is the area, then by definition



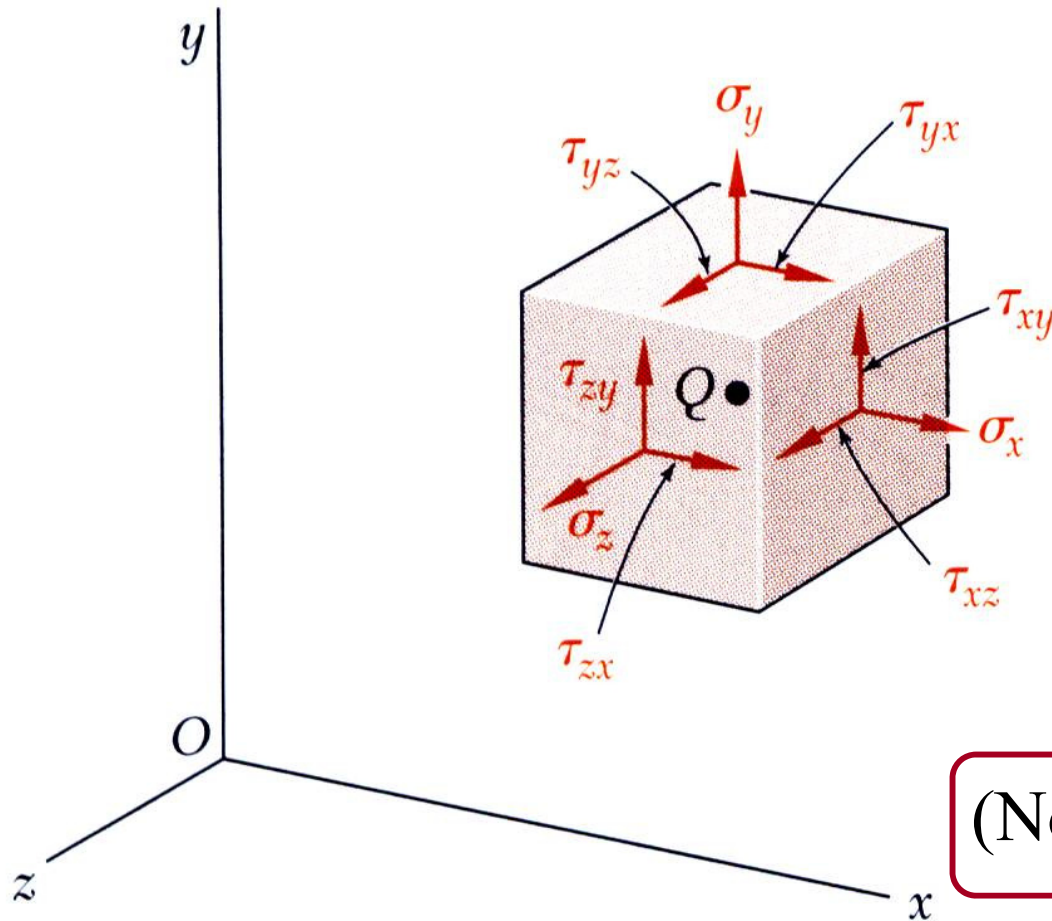
$$\sigma_z = \frac{dF_z}{dA}$$

$$\tau_{zx} = \frac{dF_x}{dA}$$

$$\tau_{zy} = \frac{dF_y}{dA}$$

Transformations of Stress and Strain

□ General or Triaxial State of stress



- Normal Stresses

$$\sigma_x, \sigma_y, \sigma_z$$

- Shear Stress

$$\tau_{xy}, \tau_{yz}, \tau_{zx}$$

(Note : $\tau_{xy} = \tau_{yx}$, $\tau_{yz} = \tau_{zy}$, $\tau_{zx} = \tau_{xz}$)

Transformations of Stress and Strain

□ General or Triaxial State of stress

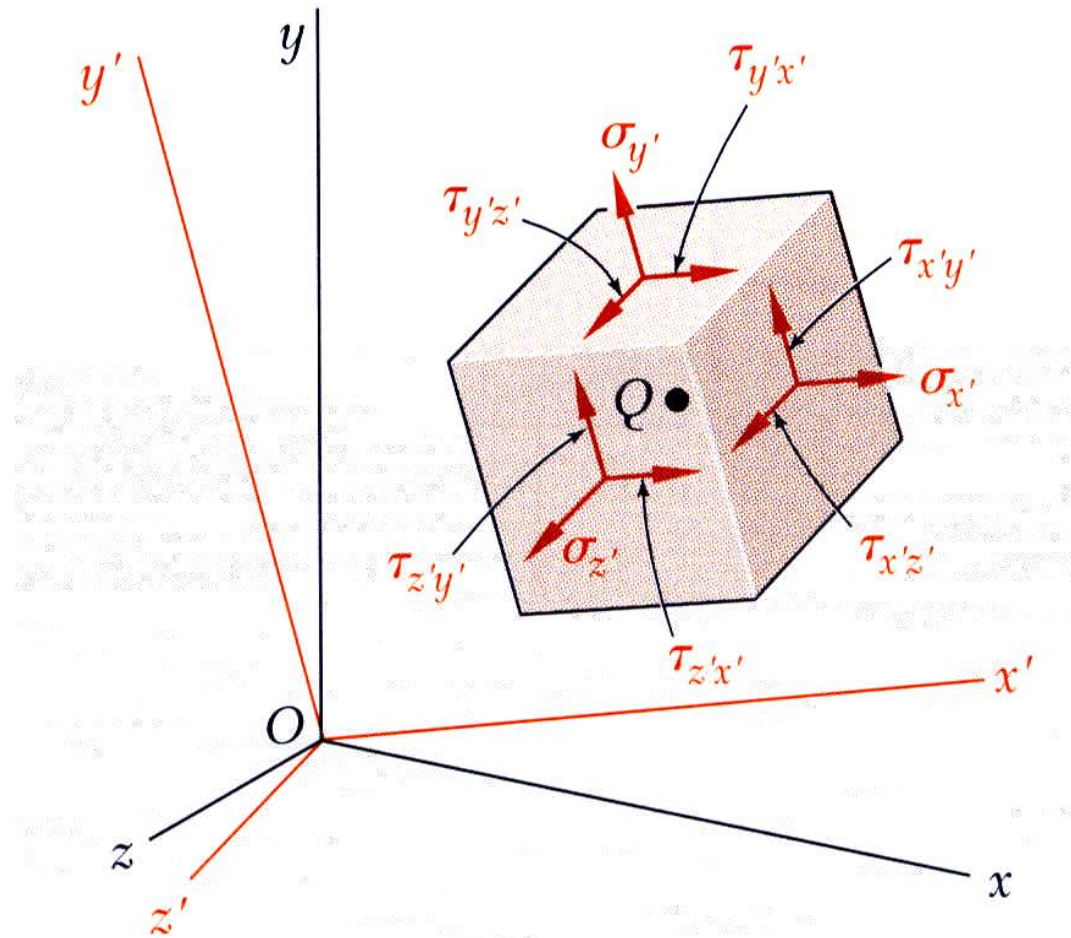
Sign Conventions

- Normal stresses indicated by the symbol σ and a single subscript to indicate the plane (**actually the outward normal to the plane**) on which the stress acts.
- Normal stresses are positive if they point in the direction of the outward normal. Thus, normal stresses are **positive if tensile and negative if compressive**.
- Shearing stresses are denoted by the symbol τ followed by two subscripts, **the first subscript designates the normal to the plane on which the stress acts and the second designate the coordinate axis to which the stress is parallel**.
- A positive shearing stress points in **the positive direction of the coordinate axis of the second subscript if it acts on a surface with an outward normal in the positive direction**.

Transformations of Stress and Strain

□ General state of stress

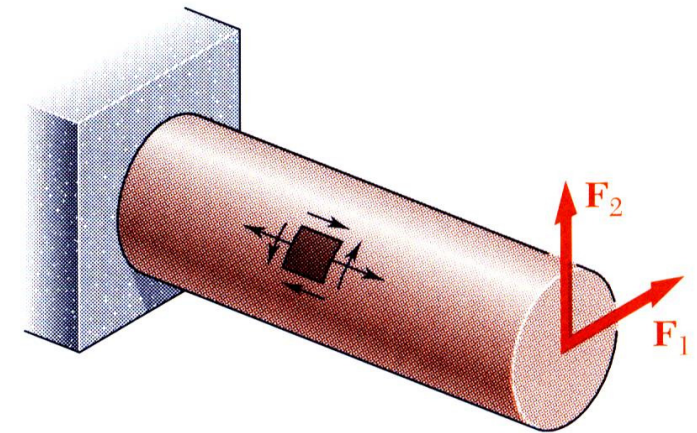
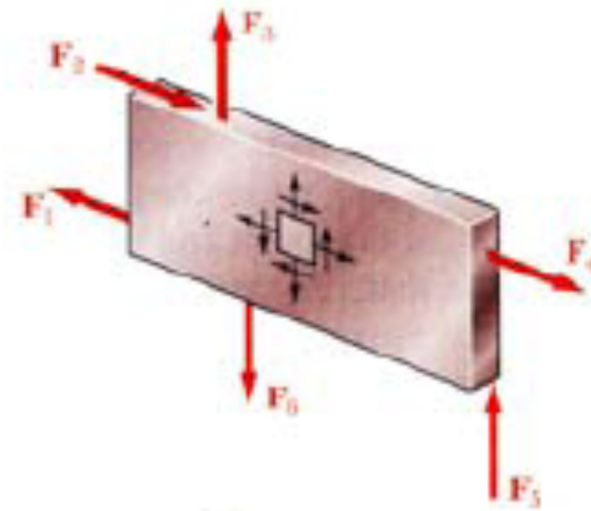
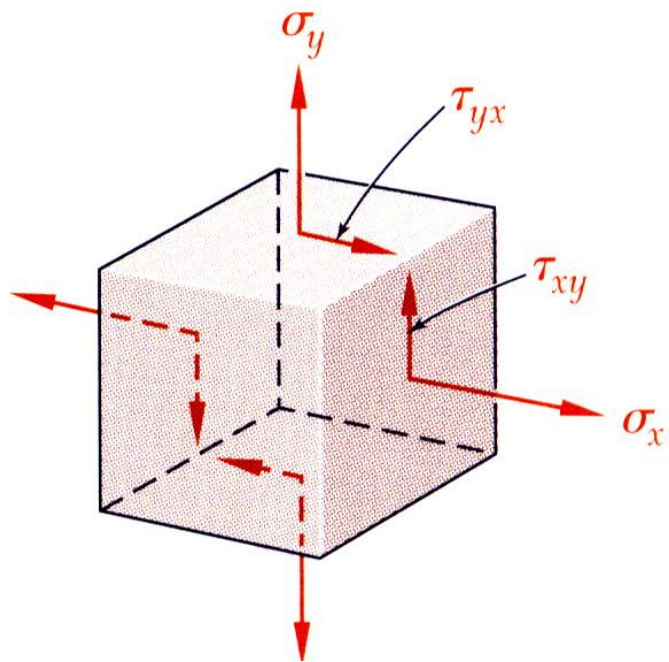
Same state of stress is represented by a **different set of components** if axes are rotated.



Transformations of Stress and Strain

□ Plane Stress

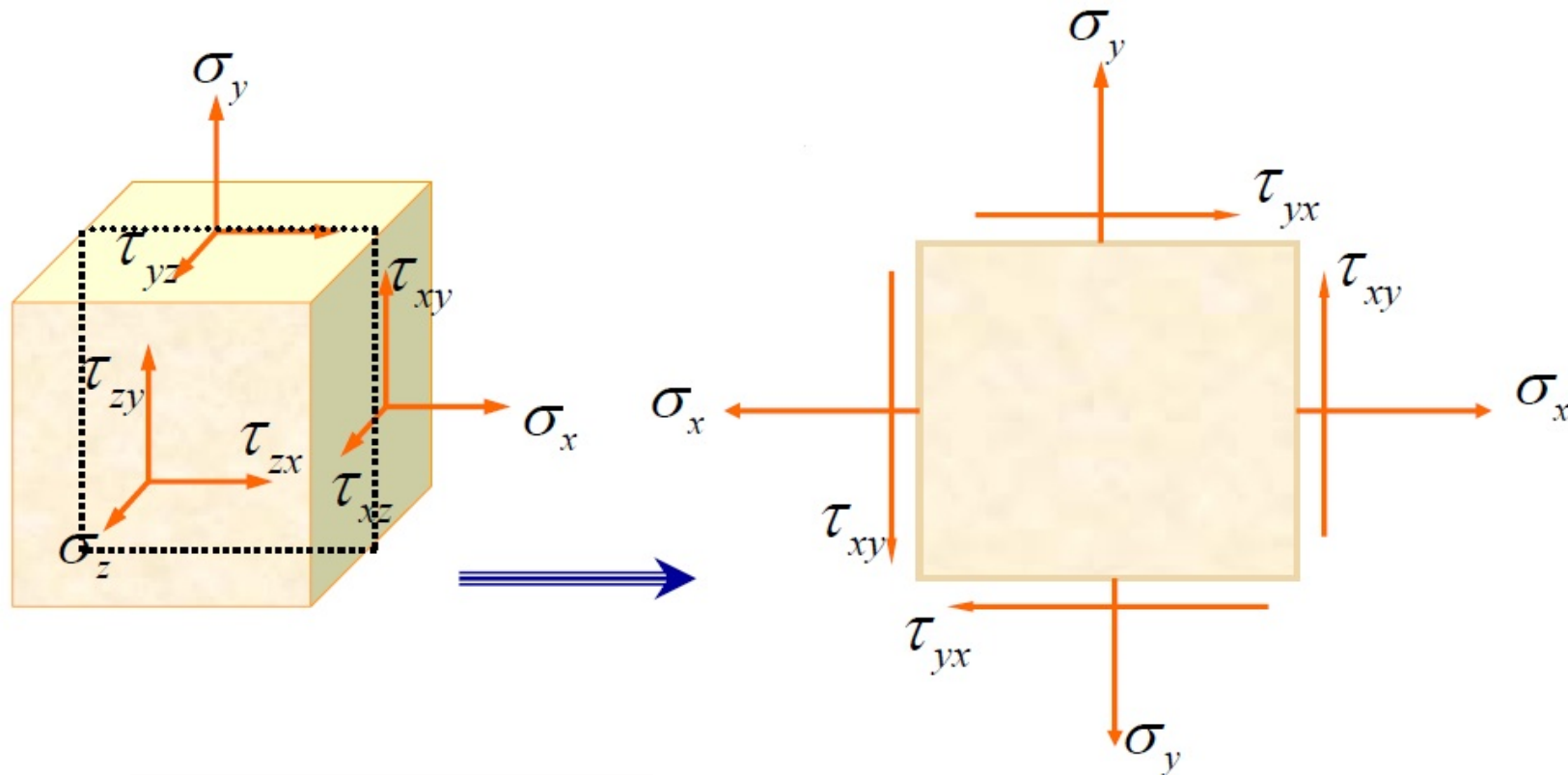
- **Plane Stress** - state of stress in which two faces of the cubic element are free of stress.



Transformations of Stress and Strain

□ Plane Stress

- **Plane Stress** - state of stress in which two faces of the cubic element are free of stress.



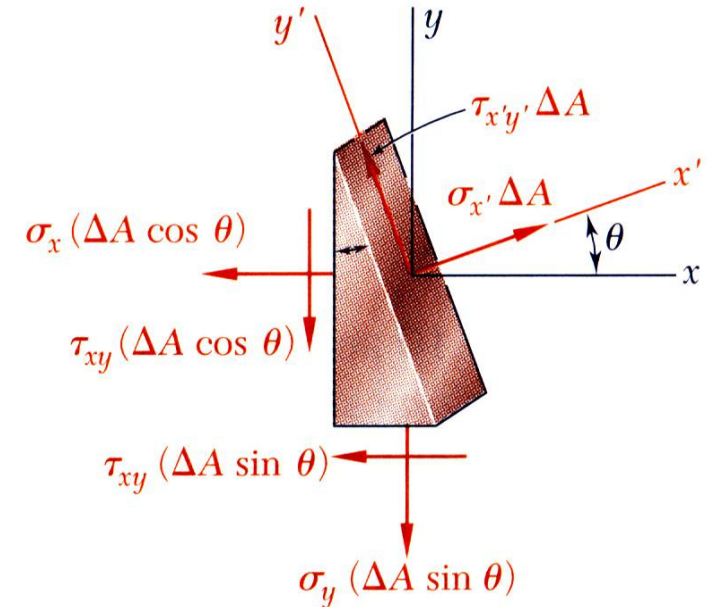
$$\sigma_z = \tau_{zx} = \tau_{zy} = 0.$$

$$\sigma_x, \sigma_y, \tau_{xy} \neq 0$$

Transformations of Stress and Strain

□ Transformation of Plane Stress

Plane Stress Equations
Free-body Diagram



$$\sum F_{x'} = 0 = \sigma_{x'} \Delta A - \sigma_x (\Delta A \cos(\theta)) \cos(\theta) - \tau_{xy} (\Delta A \cos(\theta)) \sin(\theta) - \sigma_y (\Delta A \sin(\theta)) \sin(\theta) - \tau_{xy} (\Delta A \sin(\theta)) \cos(\theta)$$

$$\sum F_{y'} = 0 = \tau_{x'y'} \Delta A + \sigma_x (\Delta A \cos(\theta)) \sin(\theta) - \tau_{xy} (\Delta A \cos(\theta)) \cos(\theta) - \sigma_y (\Delta A \sin(\theta)) \cos(\theta) + \tau_{xy} (\Delta A \sin(\theta)) \sin(\theta)$$

Transformations of Stress and Strain

□ Transformation of Plane Stress

• The equations may be rewritten to yield

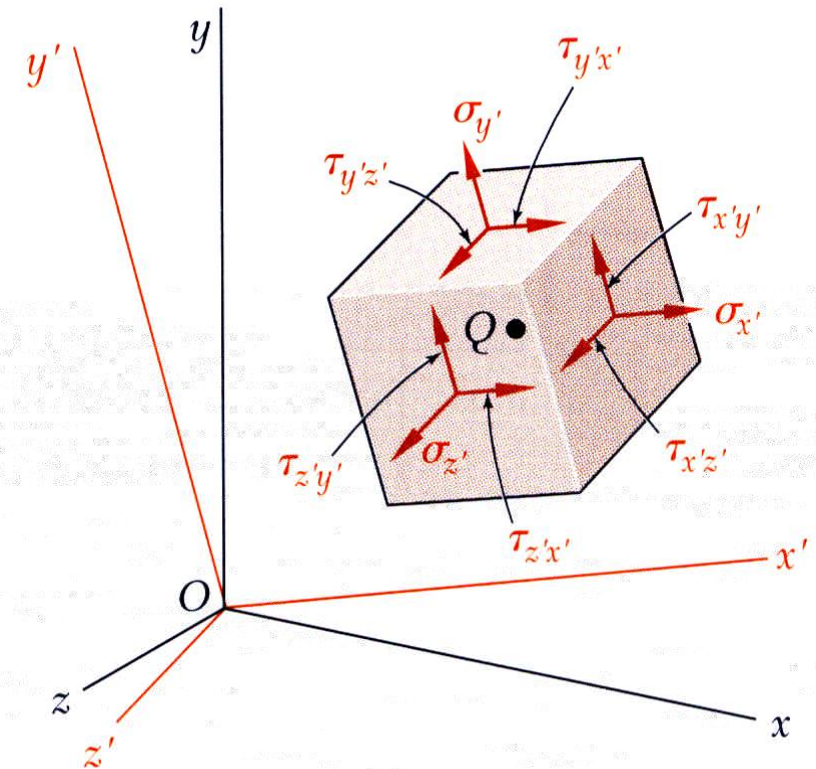
$$\sigma_{x'} = \frac{\sigma_x + \sigma_y}{2} + \frac{\sigma_x - \sigma_y}{2} \cos(2\theta) + \tau_{xy} \sin(2\theta)$$

if $\theta \rightarrow \theta + 90 \Rightarrow$

$$\sigma_{y'} = \frac{\sigma_x + \sigma_y}{2} - \frac{\sigma_x - \sigma_y}{2} \cos(2\theta) - \tau_{xy} \sin(2\theta)$$

$$\tau_{x'y'} = -\frac{\sigma_x - \sigma_y}{2} \sin(2\theta) + \tau_{xy} \cos(2\theta)$$

For plane stress, the sum of the normal stresses on any two orthogonal planes through a point in a body is a constant or in invariant.

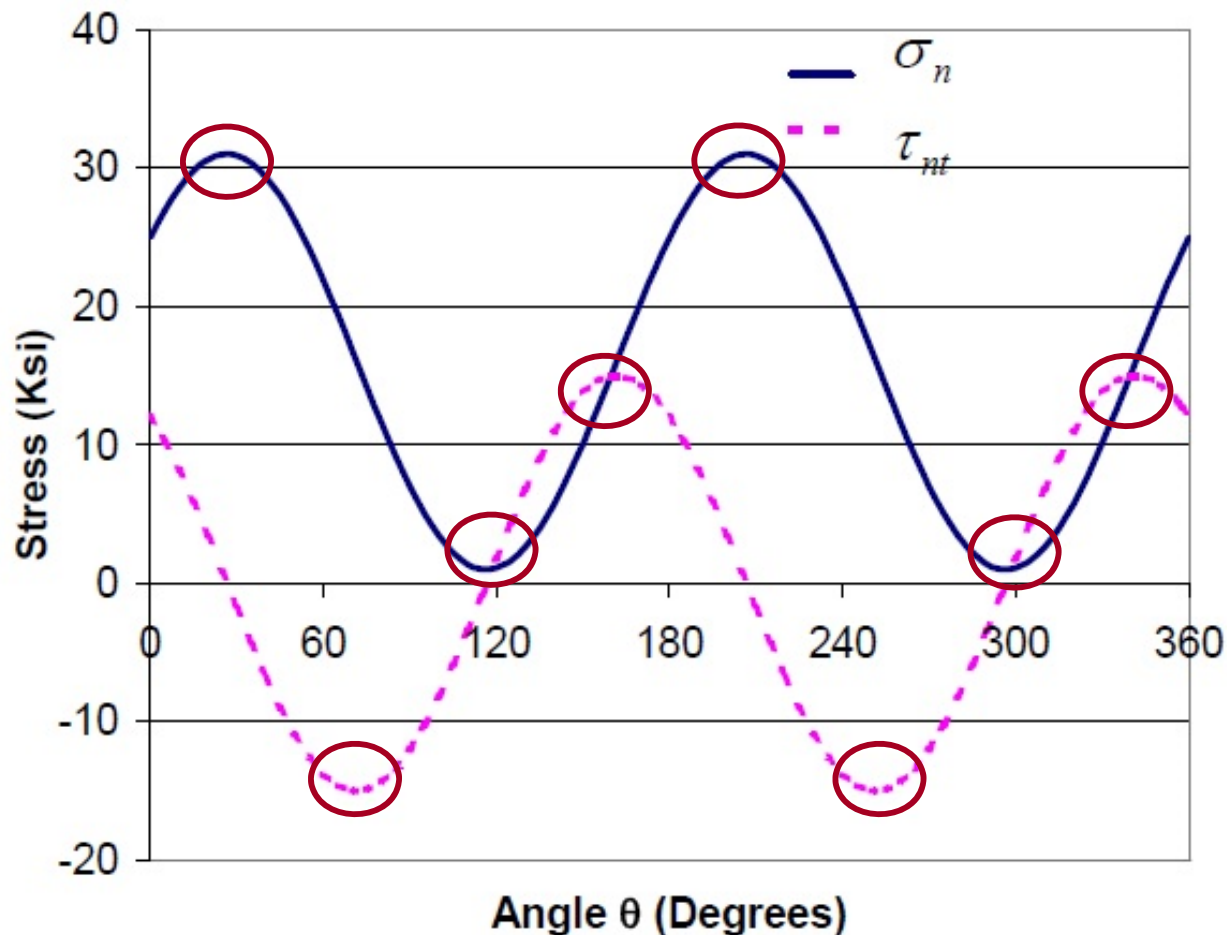


$$\sigma_{x'} + \sigma_{y'} = \sigma_x + \sigma_y$$

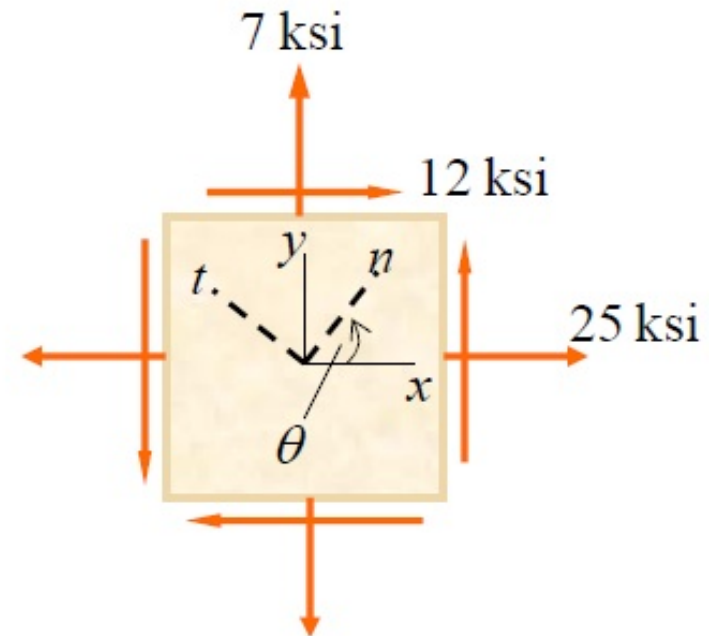
Transformations of Stress and Strain

□ Principal Stresses

- The principal stresses are the maximum and minimum normal stress.
- In general, the principal stresses can be determined by plotting curves.
- This process is time-consuming, and therefore, general methods are needed.



Variation of Stresses as Functions of θ



Transformations of Stress and Strain

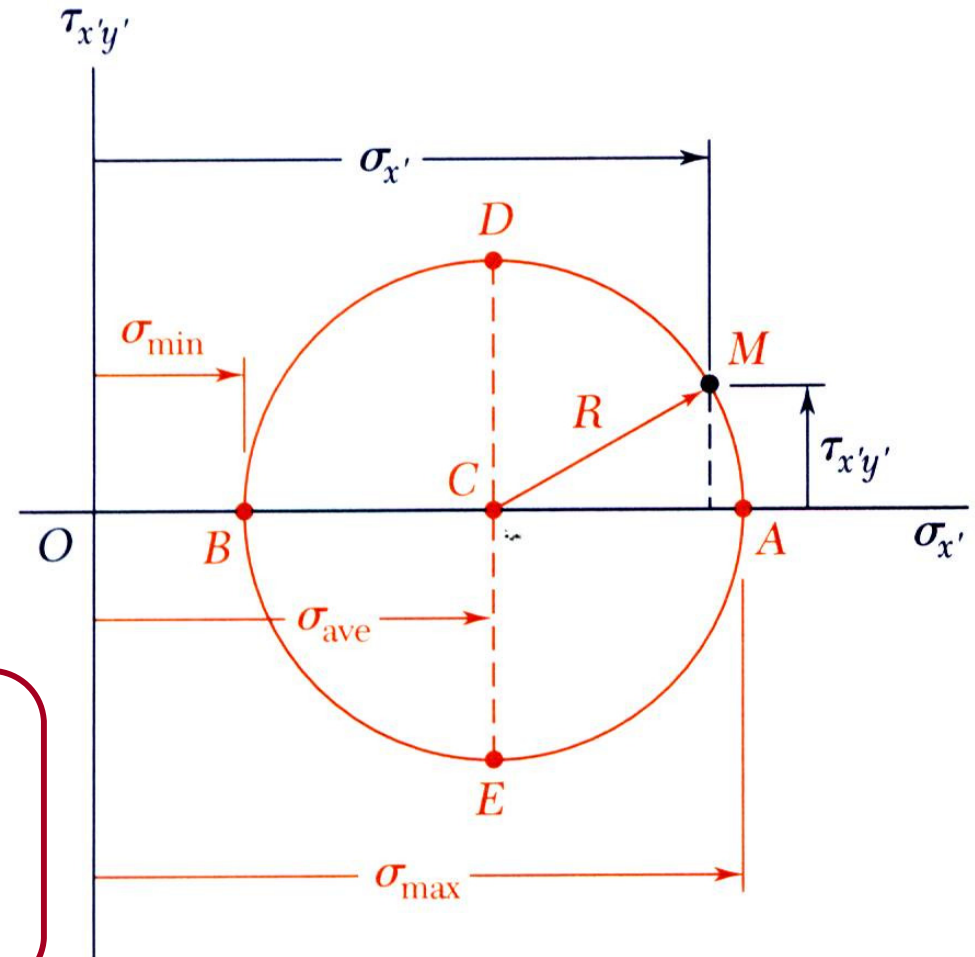
□ Principal Stresses

- The previous equations are combined to yield parametric equations for a circle

$$(\sigma_{x'} - \sigma_{ave})^2 + \tau_{x'y'}^2 = R^2$$

where

$$\sigma_{ave} = \frac{\sigma_x + \sigma_y}{2} \quad R = \sqrt{\left(\frac{\sigma_x - \sigma_y}{2}\right)^2 + \tau_{xy}^2}$$



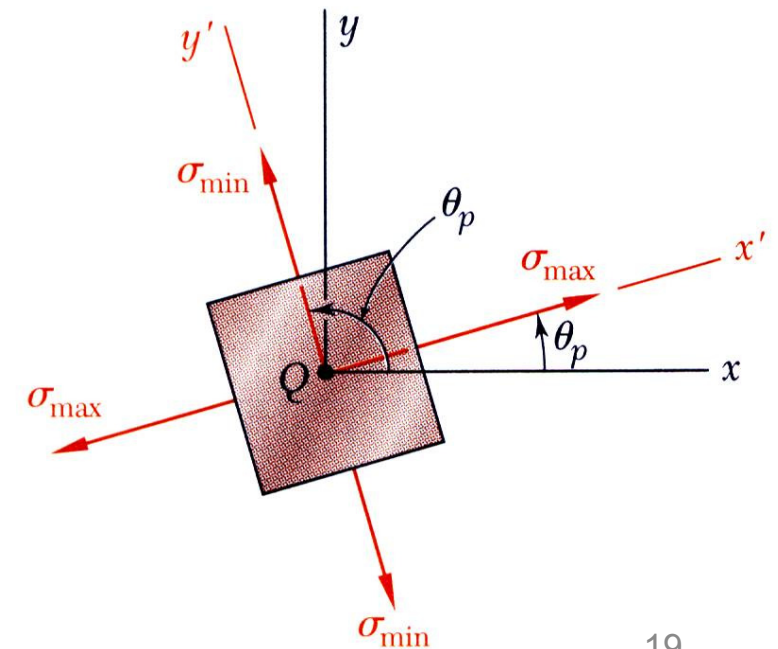
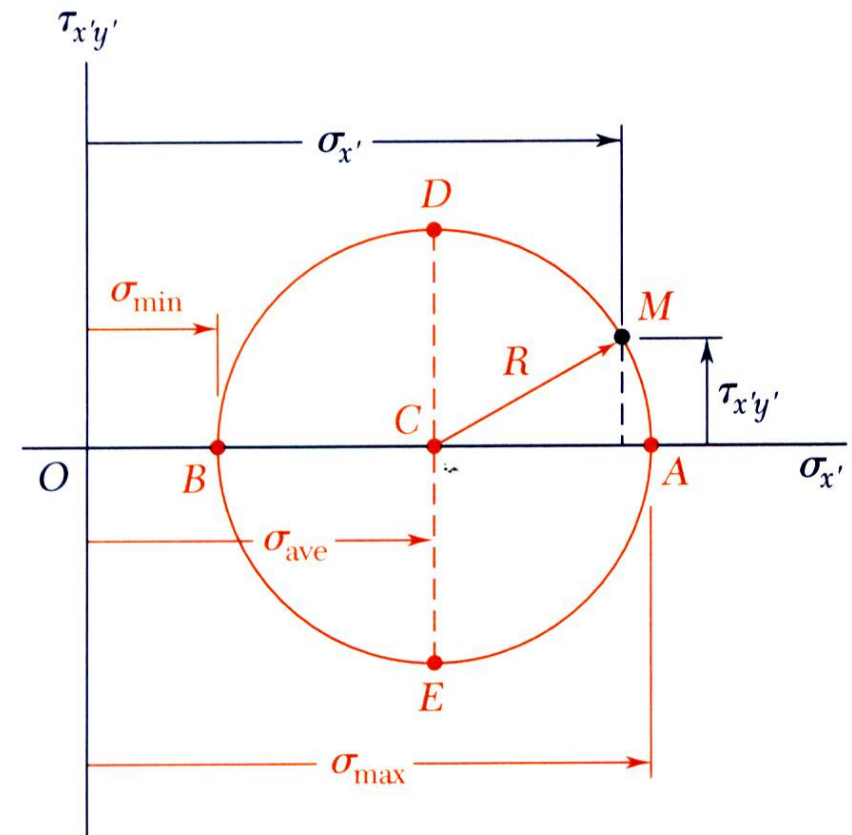
Transformations of Stress and Strain

□ Maximum normal stress

- **Principal stresses** occur on the principal planes of stress with zero shearing stresses.

$$\sigma_{\max, \min} = \frac{\sigma_x + \sigma_y}{2} \pm \sqrt{\left(\frac{\sigma_x - \sigma_y}{2}\right)^2 + \tau_{xy}^2}$$

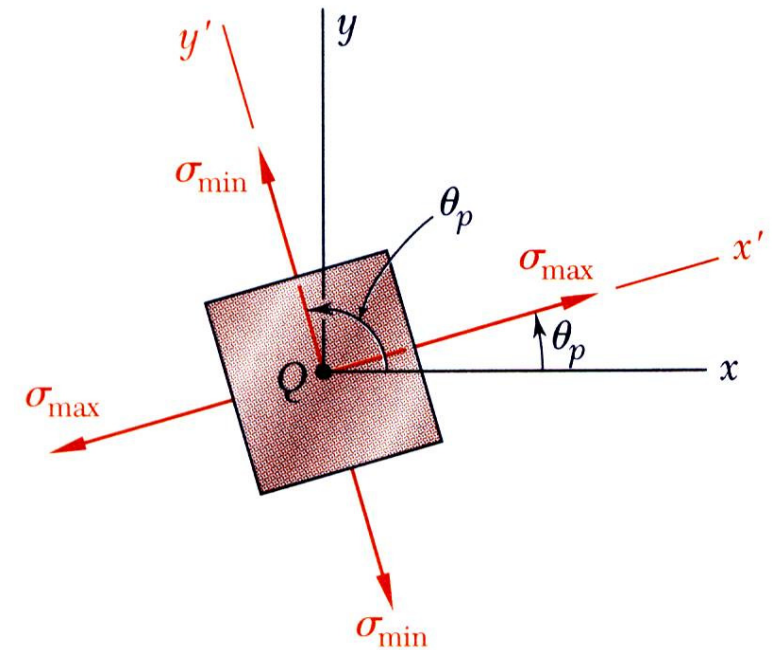
$$\tan 2\theta_p = \frac{2\tau_{xy}}{\sigma_x - \sigma_y}$$



Transformations of Stress and Strain

□ Notes on Principal Stresses Equation

- I. The angle θ_p and $\theta_p + 90$ between x-plane (or y-plane) and the mutually perpendicular planes on which the principal stresses act.
- II. When $\tan 2\theta_p$ is positive, θ_p is **positive**, and the rotation is **counterclockwise**.
- III. When $\tan 2\theta_p$ is negative, θ_p is **negative**, and the rotation is **clockwise**.
- IV. The shearing stress is zero on planes experiencing maximum and minimum values of normal stresses.
- V. If one or both of the principal stresses is negative, the algebraic maximum stress can have a smaller absolute value than the minimum stress.



$$\sigma_{\max, \min} = \frac{\sigma_x + \sigma_y}{2} \pm \sqrt{\left(\frac{\sigma_x - \sigma_y}{2}\right)^2 + \tau_{xy}^2}$$

$$\tan 2\theta_p = \frac{2\tau_{xy}}{\sigma_x - \sigma_y}$$

Transformations of Stress and Strain

□ Maximum shear stress

Maximum shearing stress occurs for:

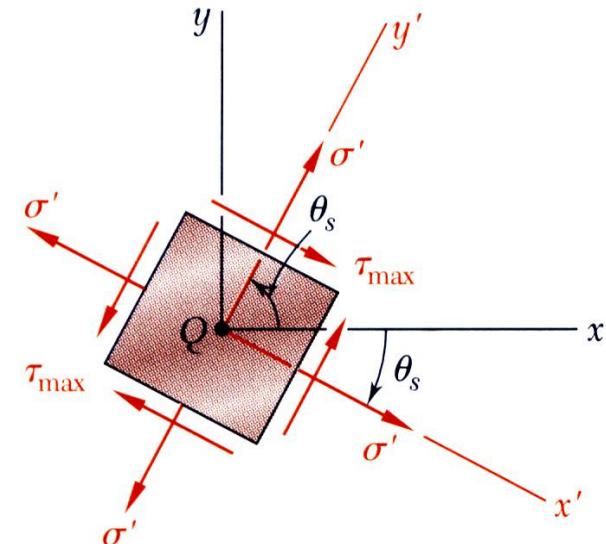
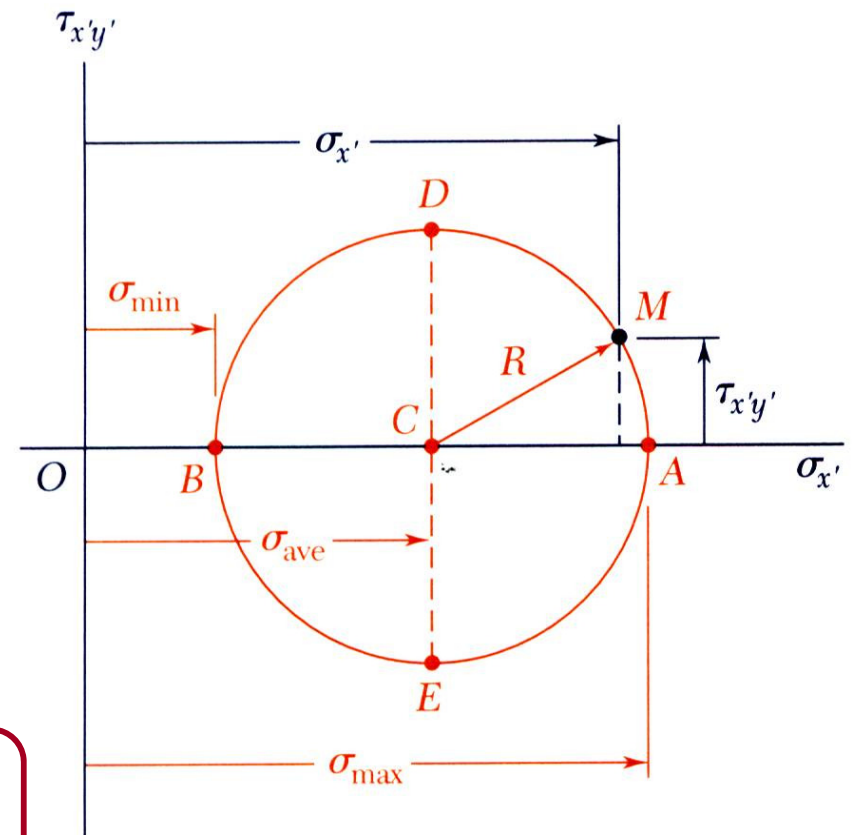
$$\sigma_{x'} = \sigma_{ave} = \frac{\sigma_x + \sigma_y}{2}$$

$$\tau_{max} = R = \sqrt{\left(\frac{\sigma_x - \sigma_y}{2}\right)^2 + \tau_{xy}^2}$$

$$\tau_{max} = \frac{\sigma_{Max} - \sigma_{Min}}{2}$$

$$\tan 2\theta_s = -\frac{\sigma_x - \sigma_y}{2\tau_{xy}}$$

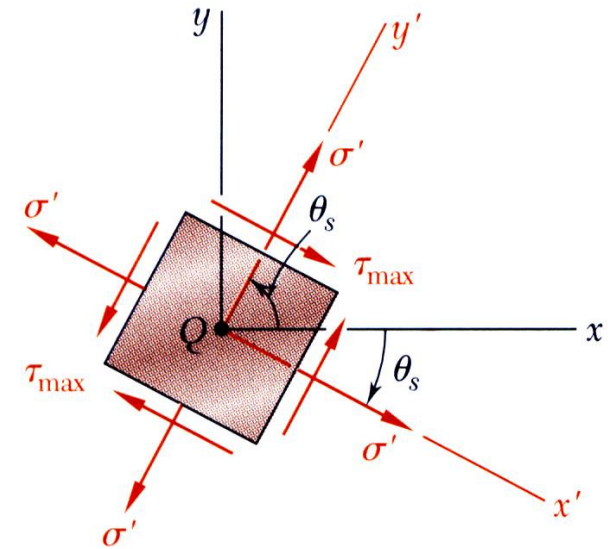
Note : defines two angles separated by 90° and offset from θ_p by 45°



Transformations of Stress and Strain

□ Notes on Principal Stresses and Maximum In-Plane Shearing Stress Equation

- I. The two angles $2\theta_p$ and $2\theta_s$ differ by 90° , therefore, θ_p and θ_s are 45° apart.
- II. This means that the planes in which the maximum in-plane shearing stress occur are 45° from the principal planes.
- III. The direction of the maximum shearing stress can be determined by drawing a wedge-shaped block with two sides parallel to the planes having the maximum and minimum principal stresses, and with the third side at an angle of 45° . The direction of the maximum shearing stress must oppose the larger of the two principal stresses.

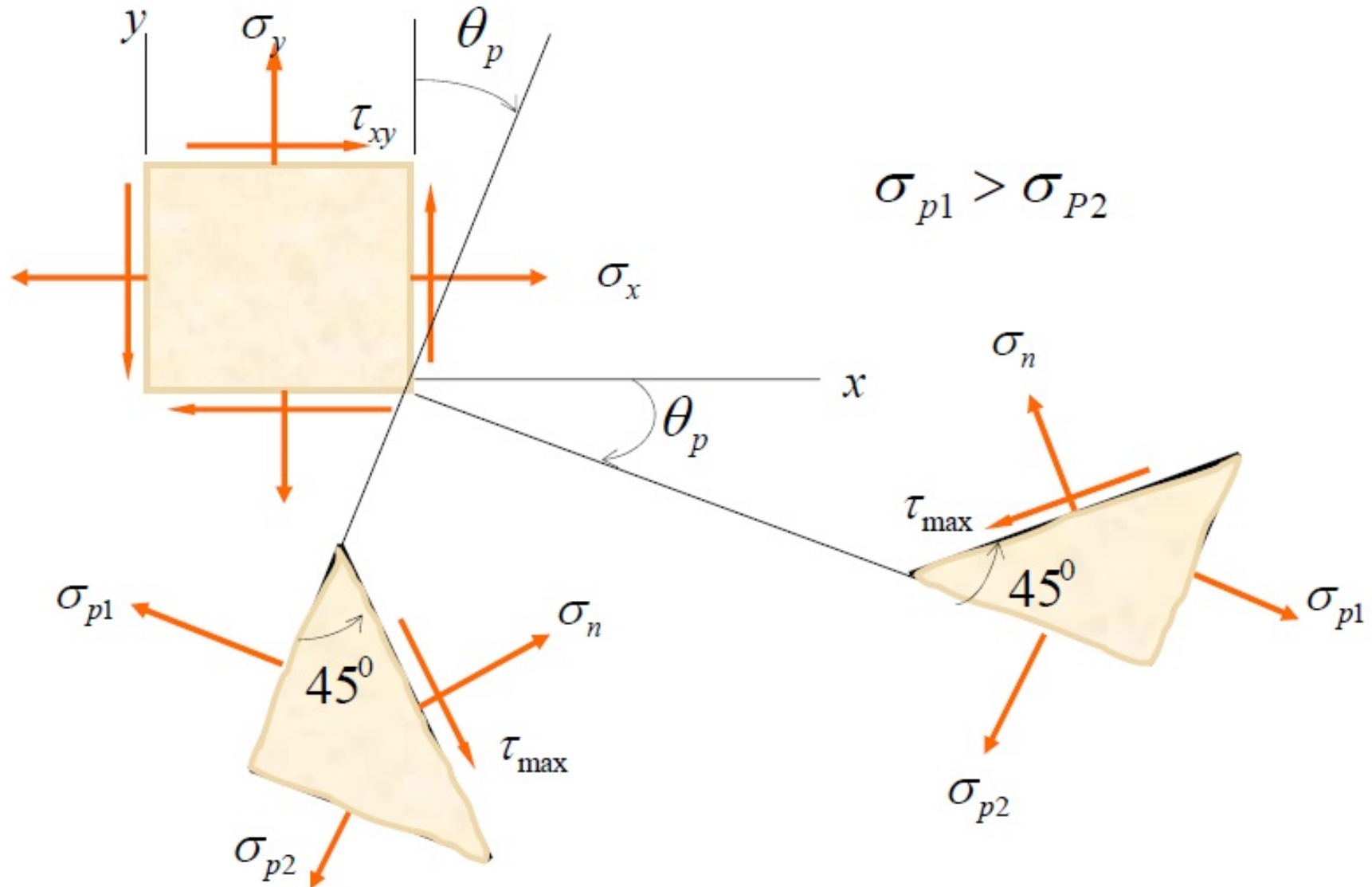


$$\tau_{max} = R = \sqrt{\left(\frac{\sigma_x - \sigma_y}{2}\right)^2 + \tau_{xy}^2}$$

$$\tan 2\theta_s = -\frac{\sigma_x - \sigma_y}{2\tau_{xy}}$$

Transformations of Stress and Strain

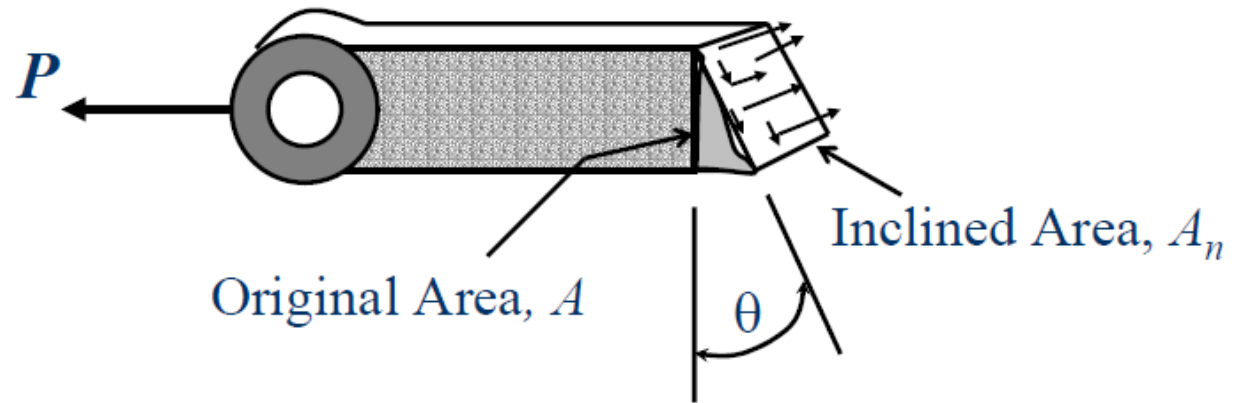
□ Wedge-shaped Block



Transformations of Stress and Strain

□ Principal Stresses for Axially Loaded Bar

$$\begin{aligned}\sigma_x &\neq 0 \\ \sigma_y &= 0 \\ \tau_{xy} &= 0\end{aligned}$$



$$\sigma_{x'} = \frac{\sigma_x + \sigma_y}{2} + \frac{\sigma_x - \sigma_y}{2} \cos(2\theta) + \tau_{xy} \sin(2\theta) = \frac{\sigma_x + 0}{2} + \frac{\sigma_x - 0}{2} \cos(2\theta) + (0) \sin(2\theta)$$

$$\Rightarrow \sigma_{x'} = \frac{\sigma_x}{2} (1 + \cos(2\theta))$$

$$\tau_{x'y'} = -\frac{\sigma_x - \sigma_y}{2} \sin(2\theta) + \tau_{xy} \cos(2\theta) = -\frac{\sigma_x - 0}{2} \sin(2\theta) + (0) \cos(2\theta)$$

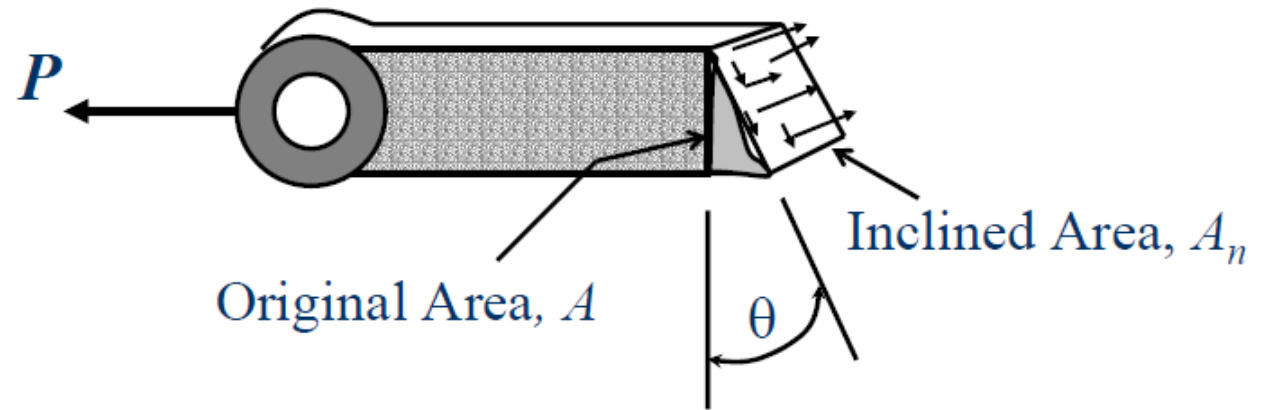
$$\Rightarrow \tau_{x'y'} = -\frac{\sigma_x}{2} \sin(2\theta)$$

Transformations of Stress and Strain

□ Principal Stresses for Axially Loaded Bar

$$\sigma_{x'} = \frac{\sigma_x}{2} (1 + \cos(2\theta))$$

$$\tau_{x'y'} = -\frac{\sigma_x}{2} \sin(2\theta)$$



$$\theta = 0^\circ \text{ or } 180^\circ \Rightarrow \sigma_{x'} = \sigma_{\max}$$

\Rightarrow

$$\sigma_{\max} = \sigma_x$$

\Rightarrow

$$\tau_{\max} = \frac{\sigma_{\max}}{2} = \frac{P}{2A}$$

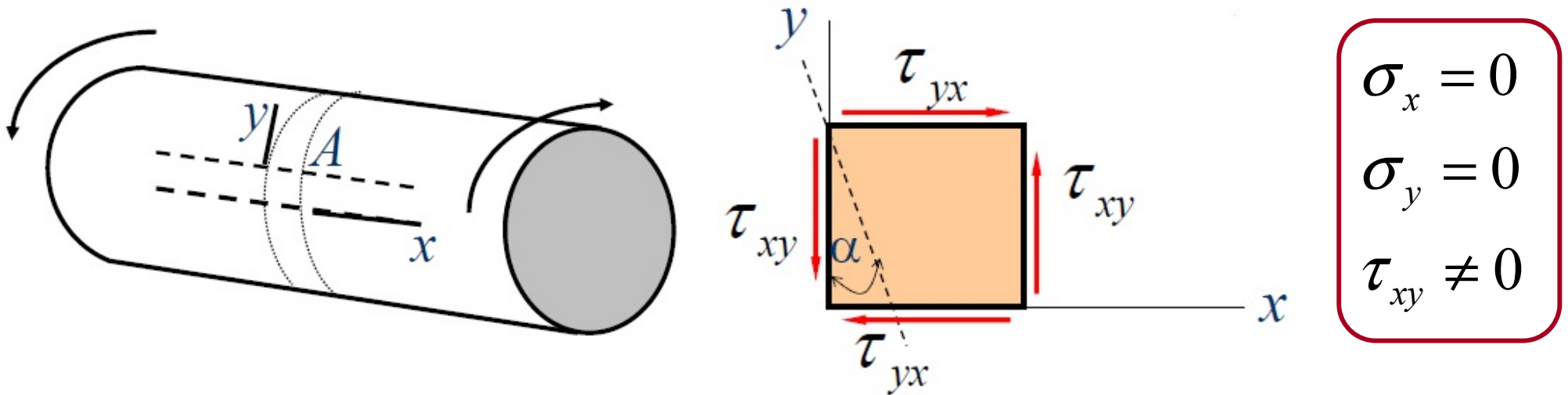
$$\theta = 45^\circ \text{ or } 135^\circ \Rightarrow \tau_{x'y'} = \tau_{\max}$$

\Rightarrow

$$\tau_{\max} = \frac{\sigma_x}{2}$$

Transformations of Stress and Strain

□ Principal Stresses for Shaft under Pure Torsion



$$\sigma_{x'} = \frac{\sigma_x + \sigma_y}{2} + \frac{\sigma_x - \sigma_y}{2} \cos(2\theta) + \tau_{xy} \sin(2\theta) = \frac{0+0}{2} + \frac{0-0}{2} \cos(2\theta) + \tau_{xy} \sin(2\theta)$$

$$\Rightarrow \sigma_{x'} = \tau_{xy} \sin(2\theta)$$

$$\tau_{x'y'} = -\frac{\sigma_x - \sigma_y}{2} \sin(2\theta) + \tau_{xy} \cos(2\theta) = -\frac{0-0}{2} \sin(2\theta) + \tau_{xy} \cos(2\theta)$$

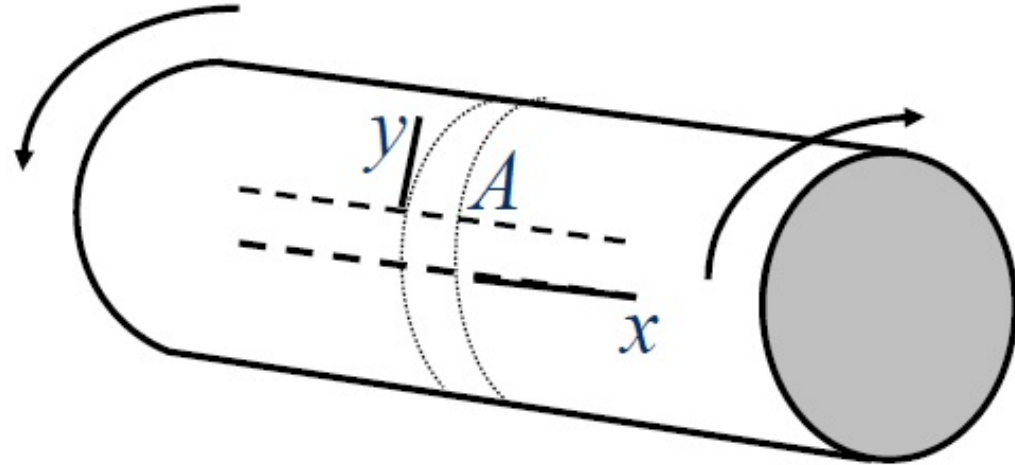
$$\Rightarrow \tau_{x'y'} = \tau_{xy} \cos(2\theta)$$

Transformations of Stress and Strain

□ Principal Stresses for Shaft under Pure Torsion

$$\sigma_{x'} = \tau_{xy} \sin(2\theta)$$

$$\tau_{x'y'} = \tau_{xy} \cos(2\theta)$$

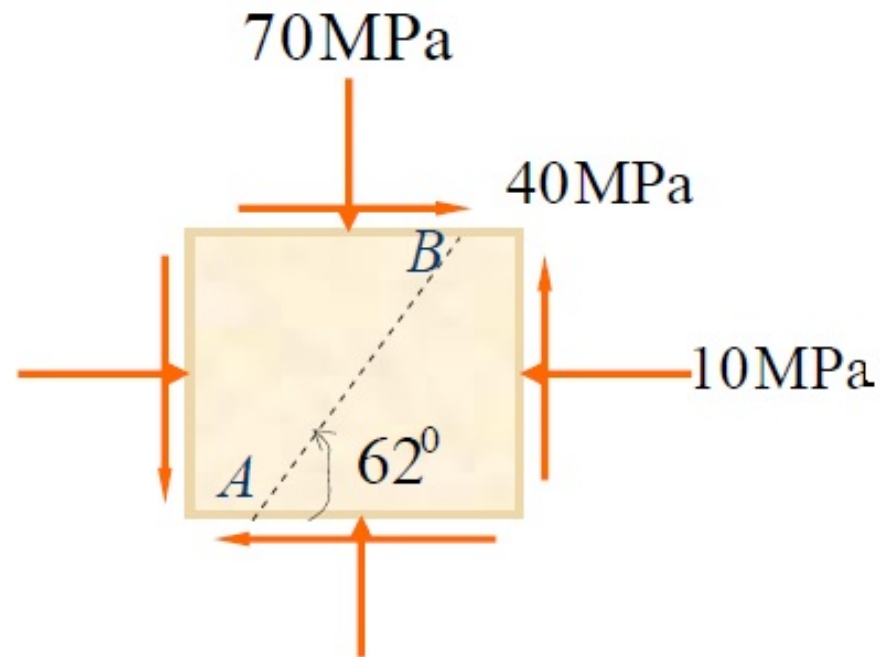
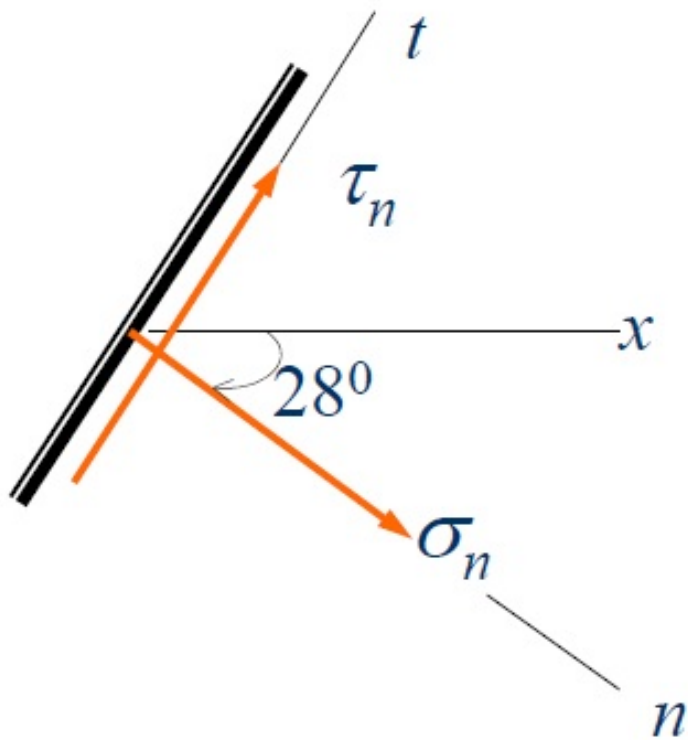


$$\theta = 45^\circ \text{ or } 135^\circ \Rightarrow \begin{matrix} \tau_{x'y'} = \tau_{Max} = \tau_{xy} \\ \sigma_{x'} = \sigma_{Max} = \tau_{xy} \end{matrix} \Rightarrow \sigma_{Max} = \tau_{Max} = \frac{T_{Max} c}{J}$$

Transformations of Stress and Strain

□ Example 1

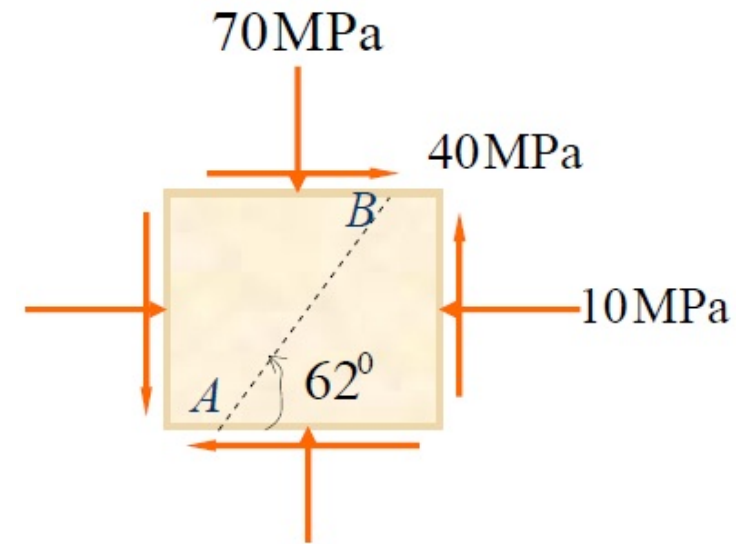
Determine the normal and shearing stresses at this point on the inclined plane AB shown in the figure.



Transformations of Stress and Strain

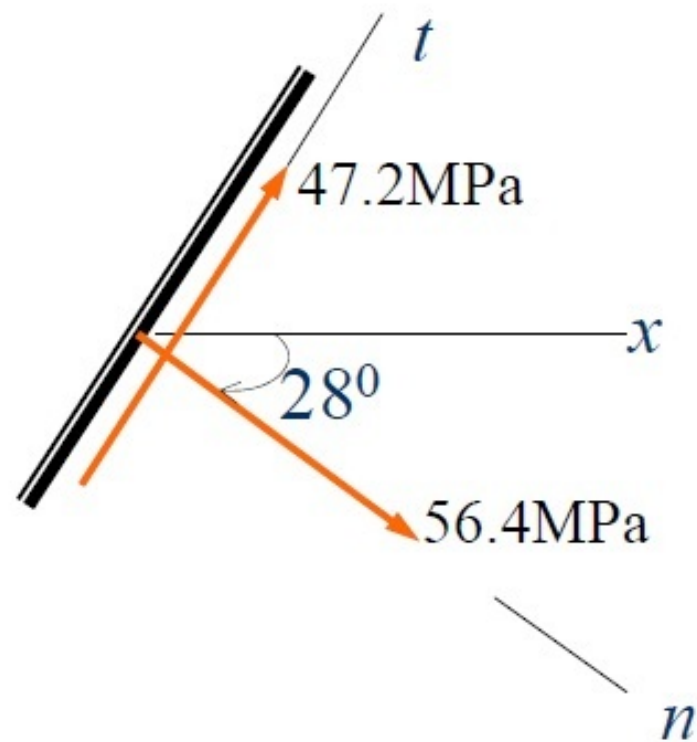
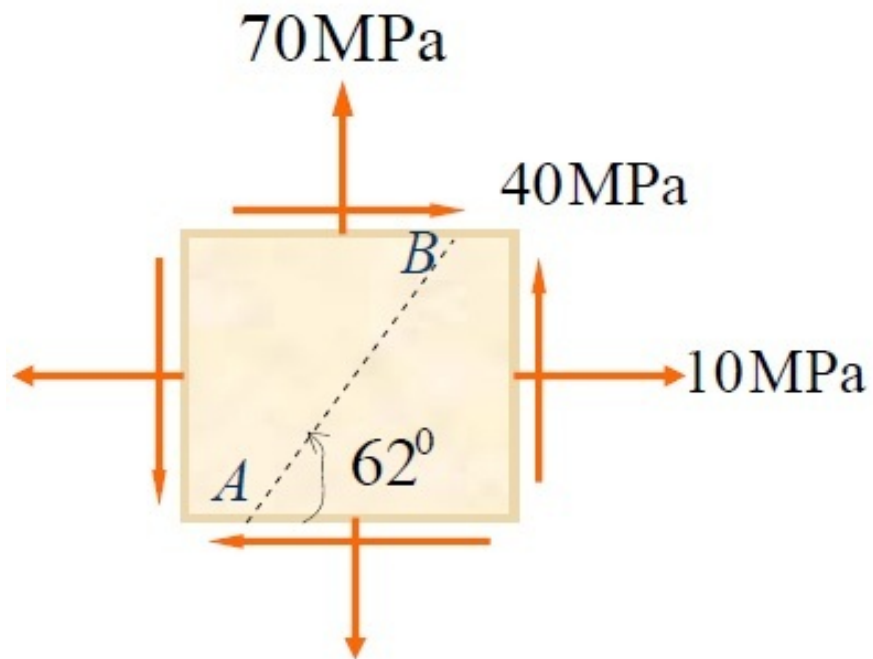
□ Example 1

We have



Transformations of Stress and Strain

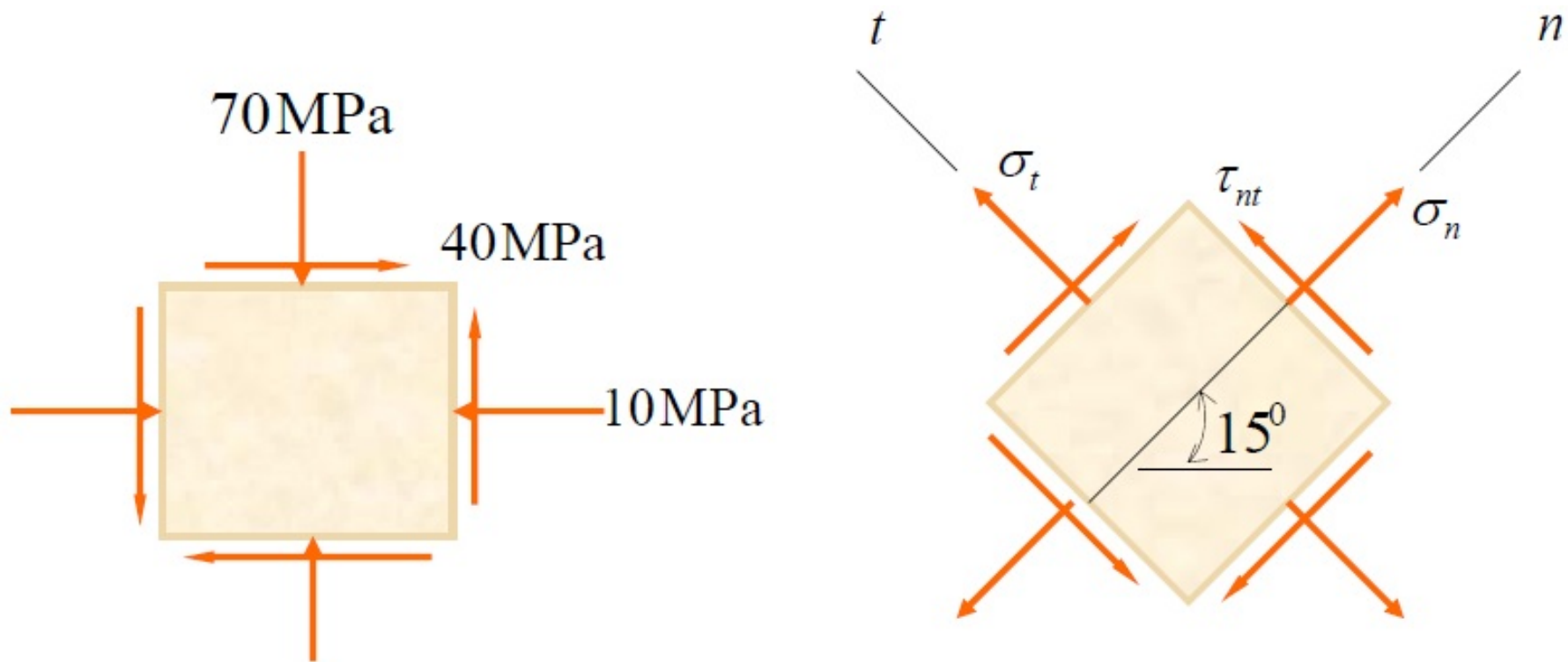
□ Example 1



Transformations of Stress and Strain

□ Example 2

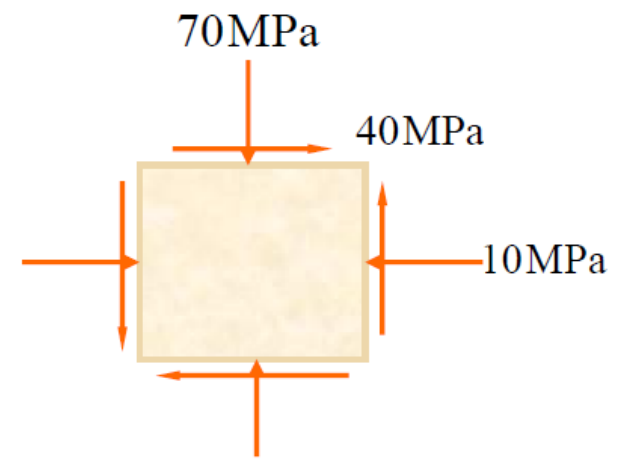
The stresses shown act at a point on the free surface of a stressed body. Determine *the normal stresses and the shearing stress* at this point if they act on the rotated stress element.



Transformations of Stress and Strain

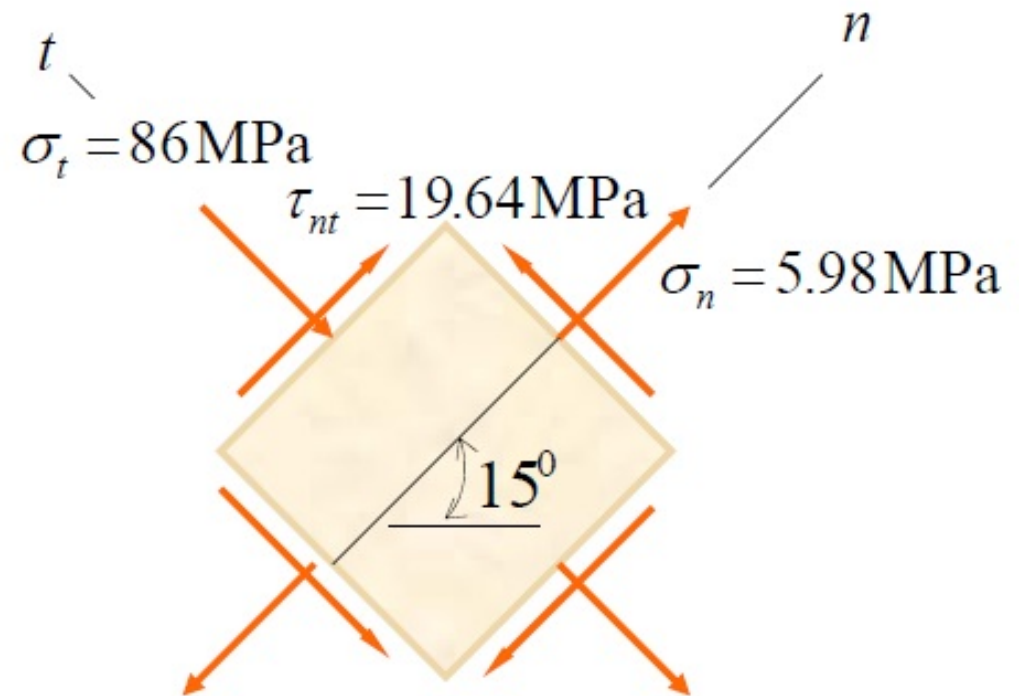
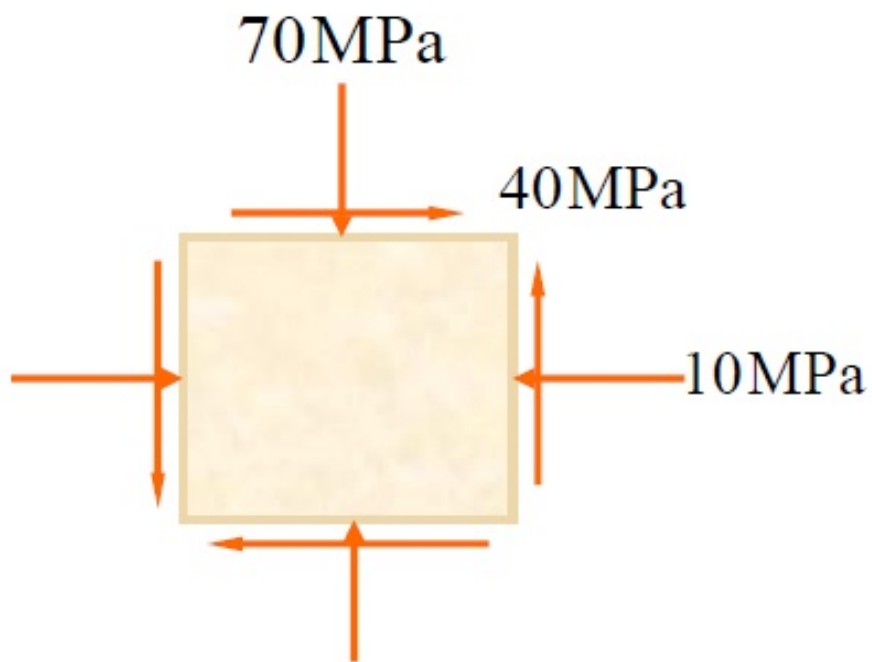
□ Example 2

We have



Transformations of Stress and Strain

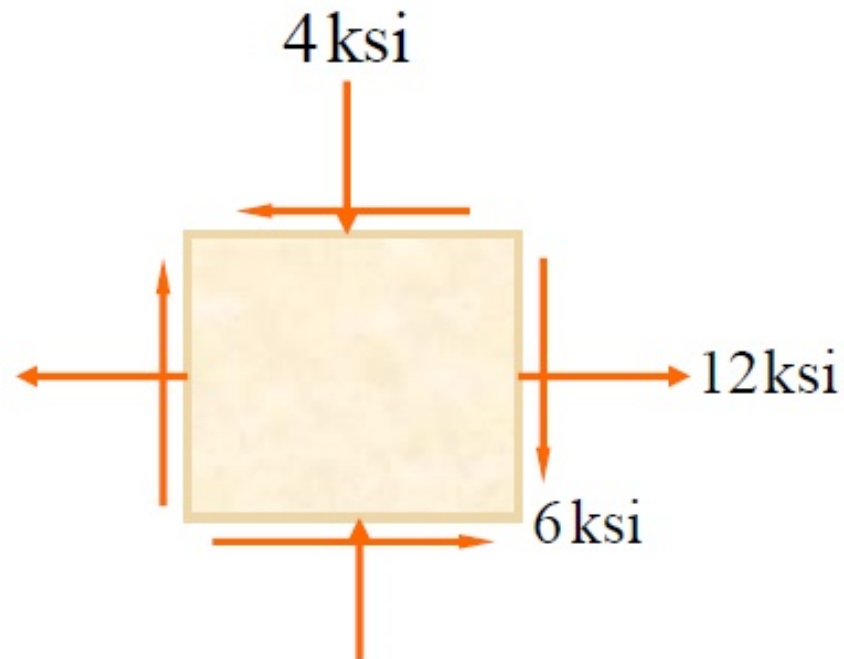
□ Example 2



Transformations of Stress and Strain

□ Example 3

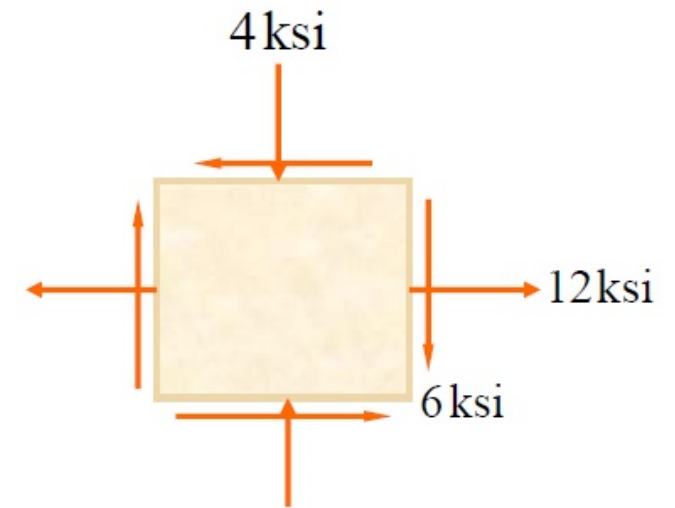
Determine and show on a sketch the principal and maximum shearing stresses.



Transformations of Stress and Strain

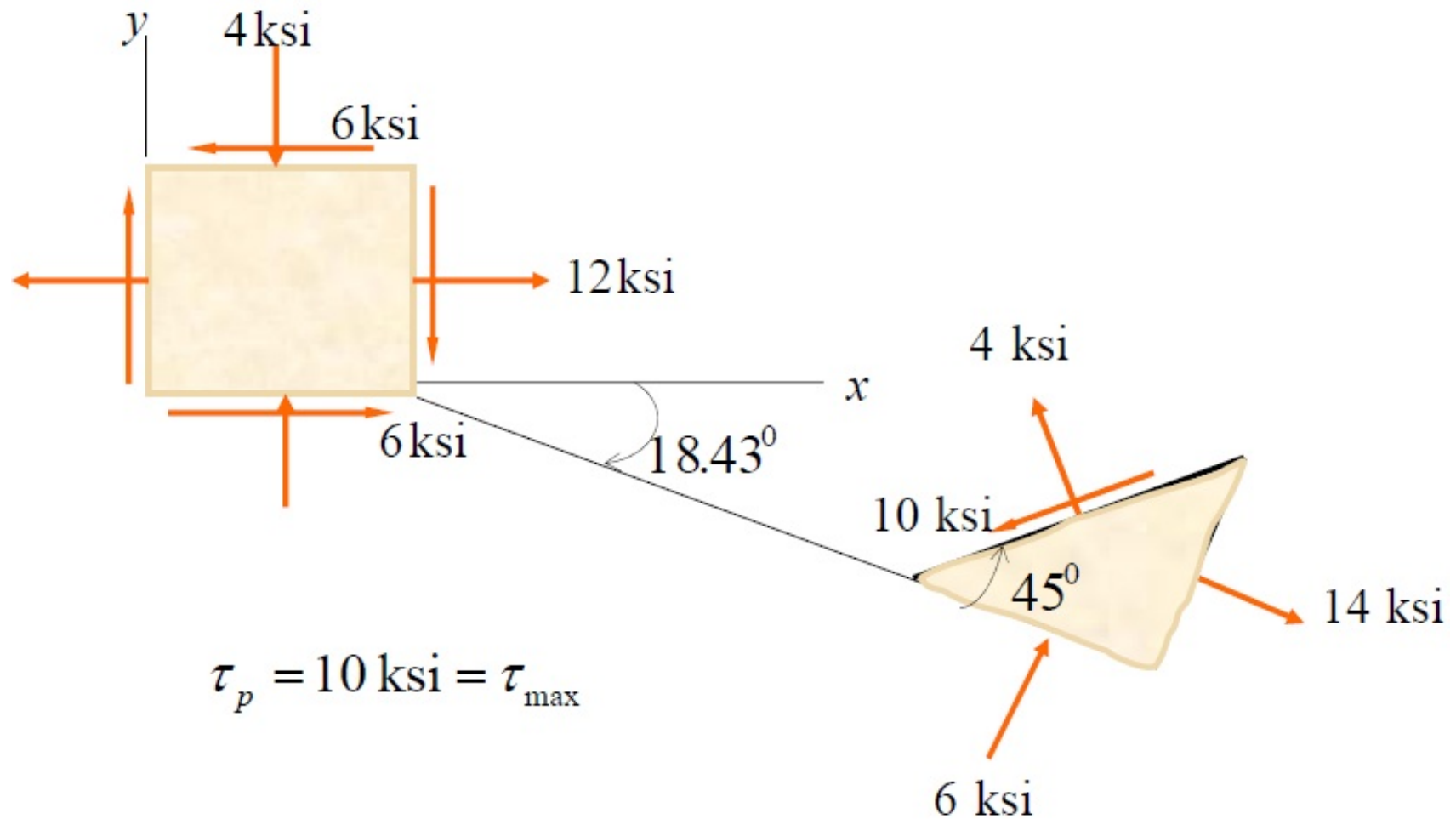
□ Example 3

We have



Transformations of Stress and Strain

□ Example 3

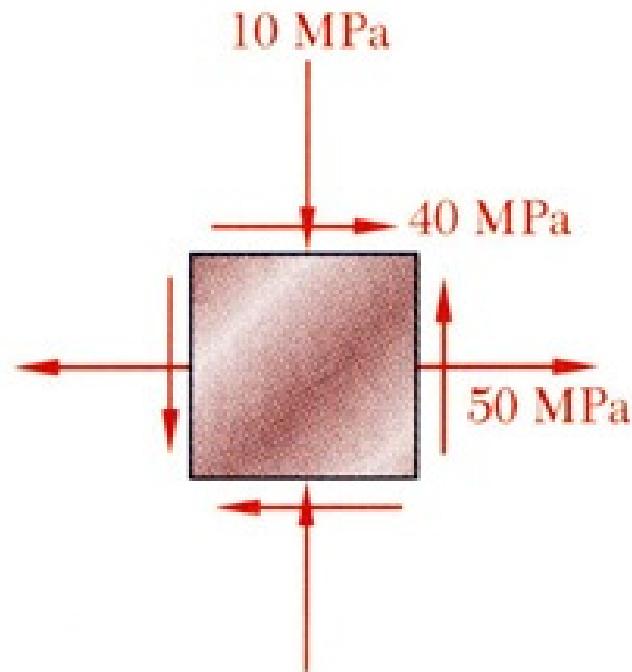


Transformations of Stress and Strain

□ Example 4

For the state of plane stress shown, determine:

- (a) The principal planes
- (b) The principal stresses
- (c) The maximum shearing stress and the corresponding normal stress.

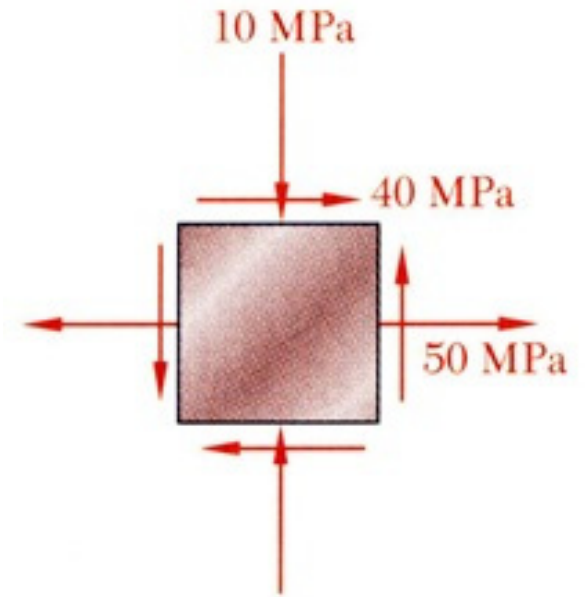


Transformations of Stress and Strain

□ Example 4

SOLUTION:

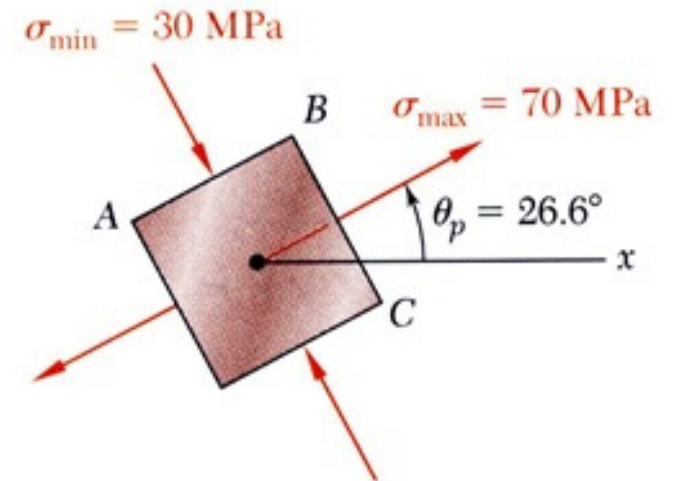
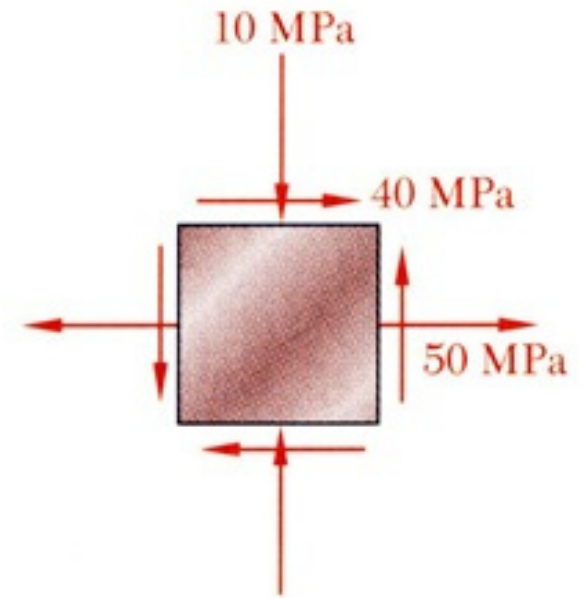
- Find the element orientation for the principal stresses from



Transformations of Stress and Strain

□ Example 4

- Determine the principal stresses from



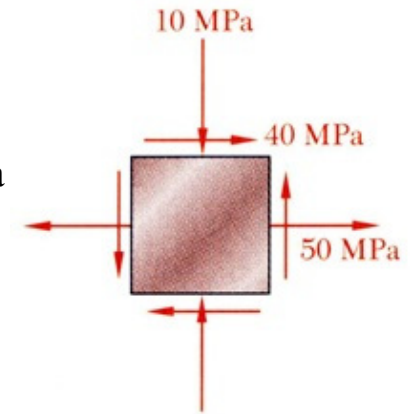
Transformations of Stress and Strain

□ Example 4

$$\sigma_x = +50 \text{ MPa}$$

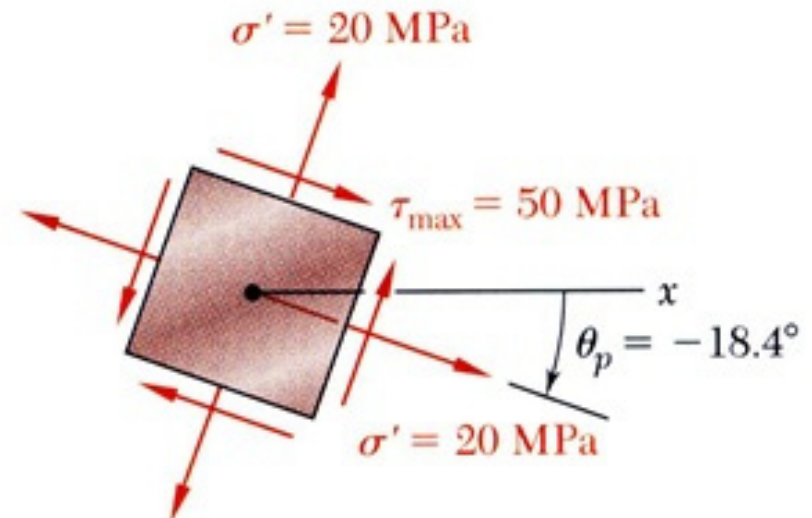
$$\sigma_y = -10 \text{ MPa}$$

$$\tau_{xy} = +40 \text{ MPa}$$



- Calculate the maximum shearing stress with

- The corresponding normal stress is

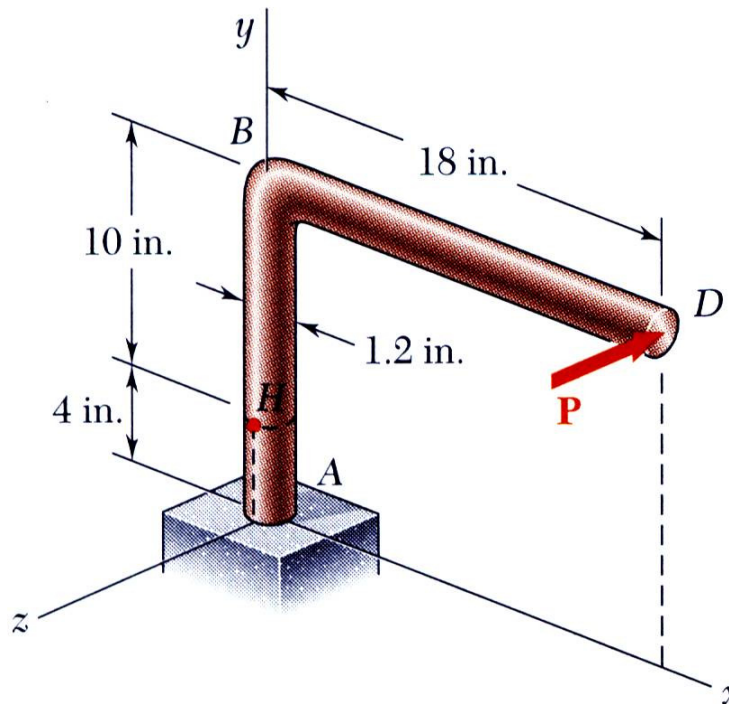


Transformations of Stress and Strain

□ Example 5

A single horizontal force P of 150 lb magnitude is applied to end D of lever ABD . Determine:

- The normal and shearing stresses on an element at point H having sides parallel to the x and y axes
- The principal planes and principal stresses at the point H .

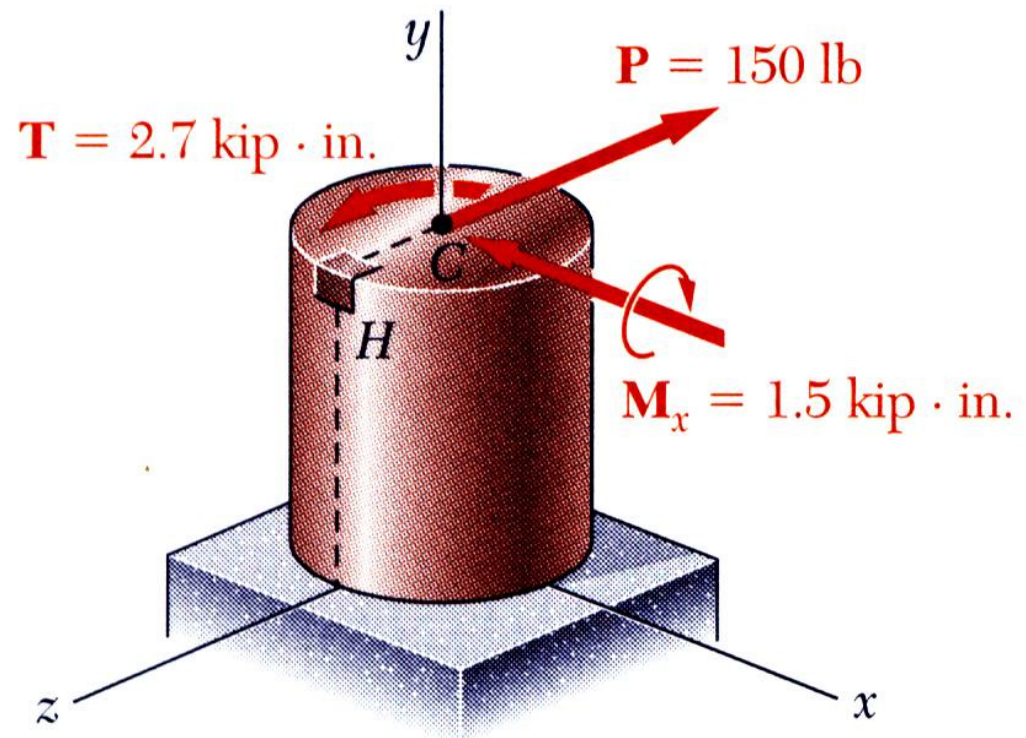
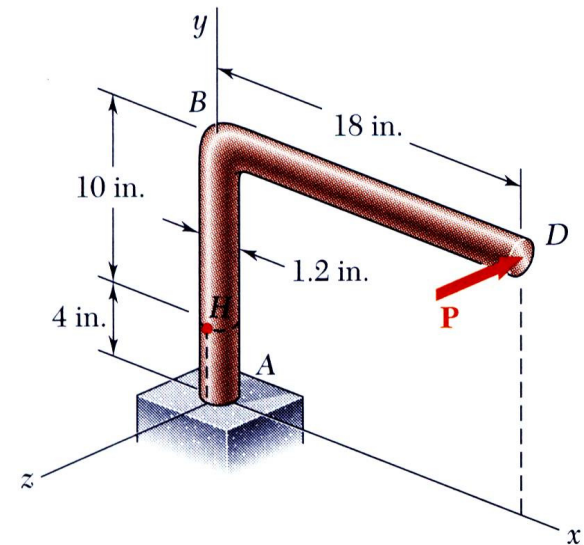


Transformations of Stress and Strain

□ Example 5

SOLUTION:

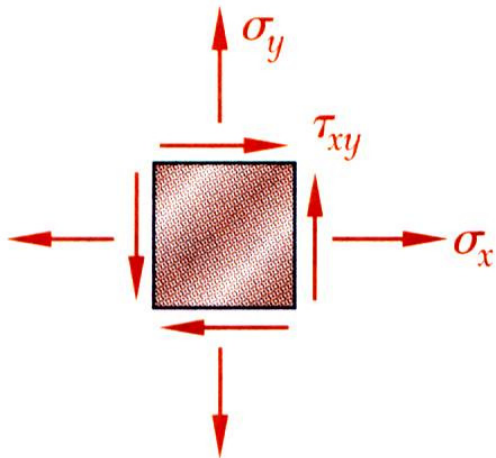
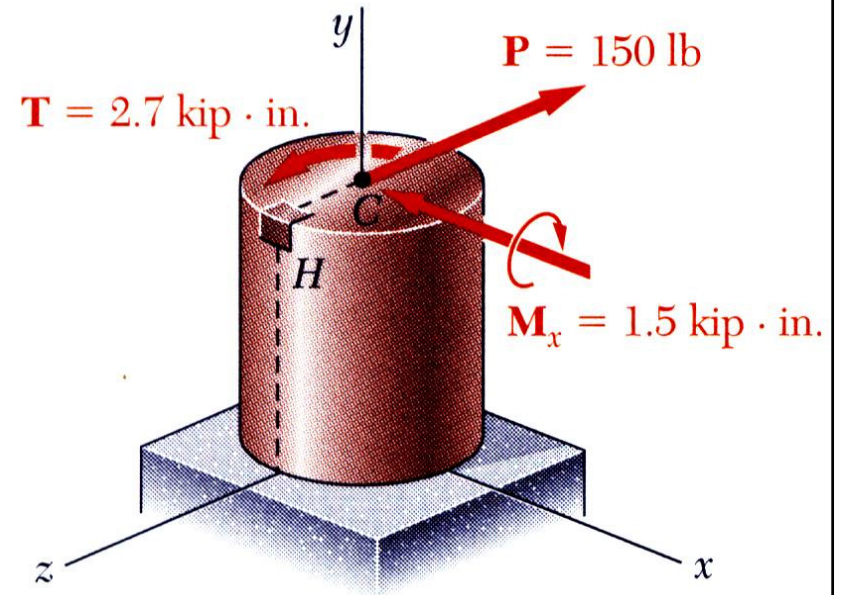
- Determine an equivalent force-couple system at the center of the transverse section passing through H .



Transformations of Stress and Strain

□ Example 5

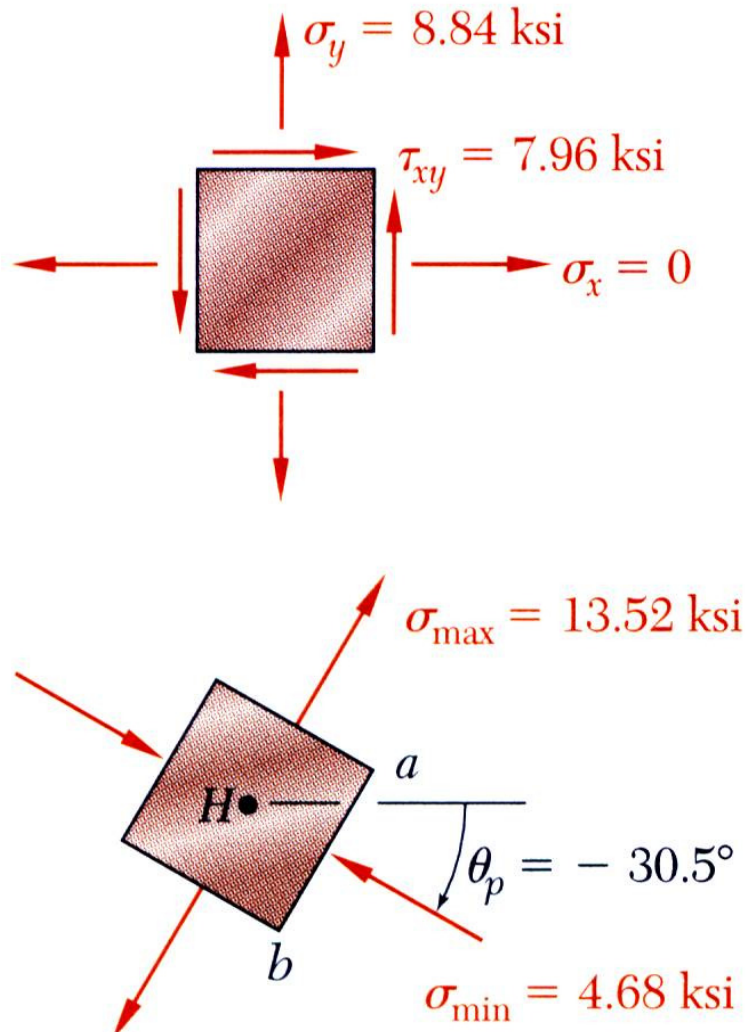
- Evaluate the normal and shearing stresses at H .



Transformations of Stress and Strain

□ Example 5

- Determine the principal planes and calculate the principal stresses.



Introduction –Concept of Stress

□ Homework-01

Solve Problems:

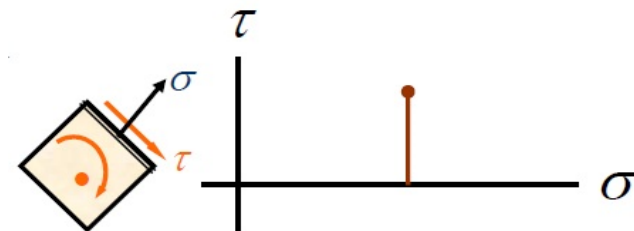
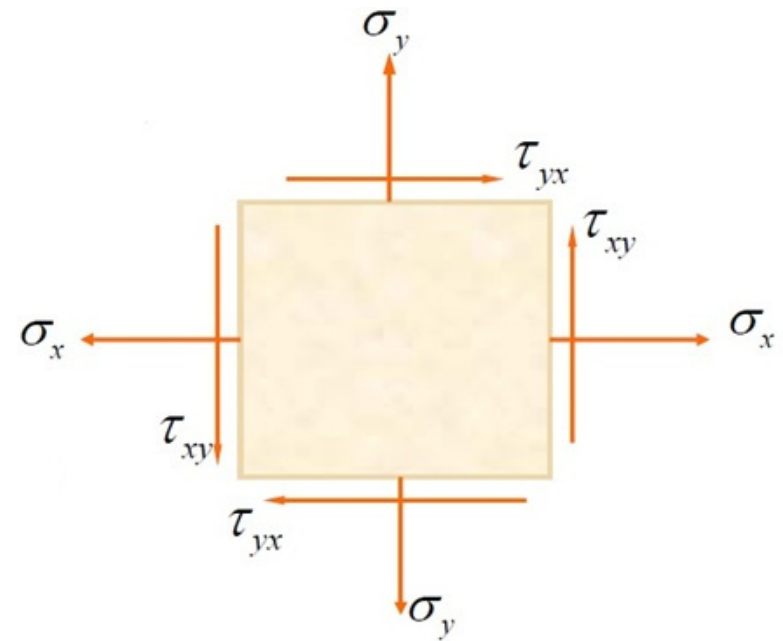
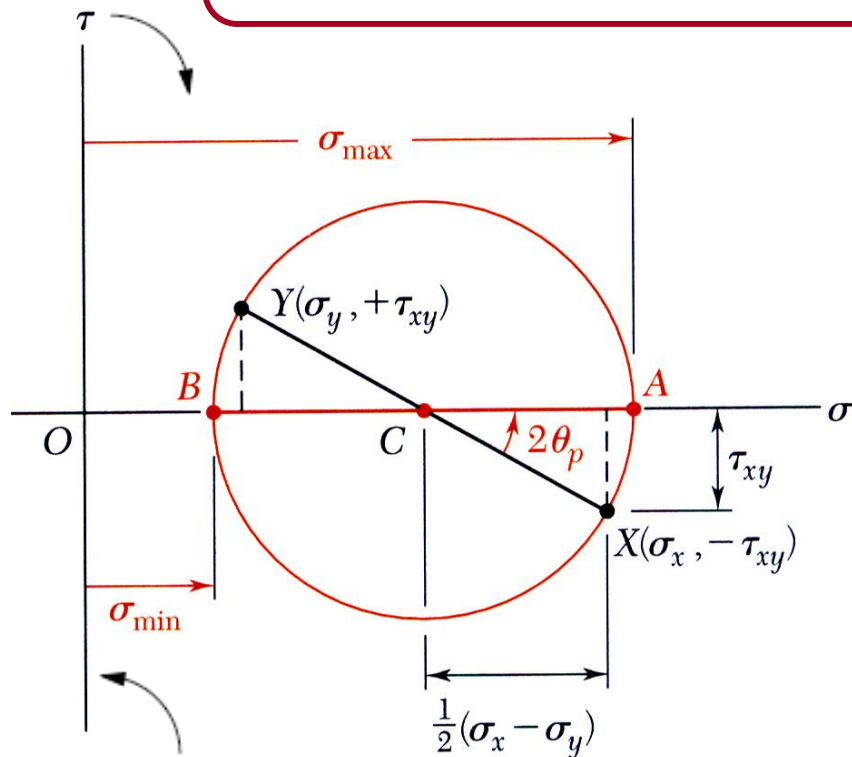
- 6.1 to 6.4
- 6.22
- 6.25

Transformations of Stress and Strain

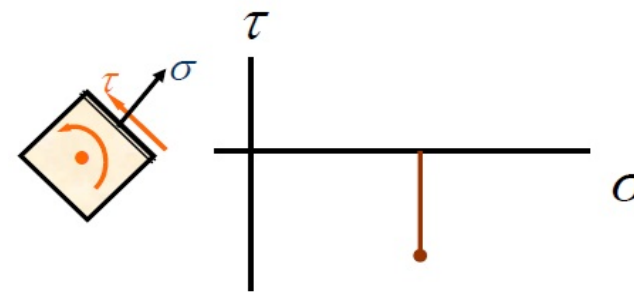
□ Mohr's Circle for Plane Stress

- For a known state of plane stress $\sigma_x, \sigma_y, \tau_{xy}$ plot the points X and Y and construct the circle centered at C .

$$\sigma_{ave} = \frac{\sigma_x + \sigma_y}{2} \quad R = \sqrt{\left(\frac{\sigma_x - \sigma_y}{2}\right)^2 + \tau_{xy}^2}$$



(a) Clockwise → Above

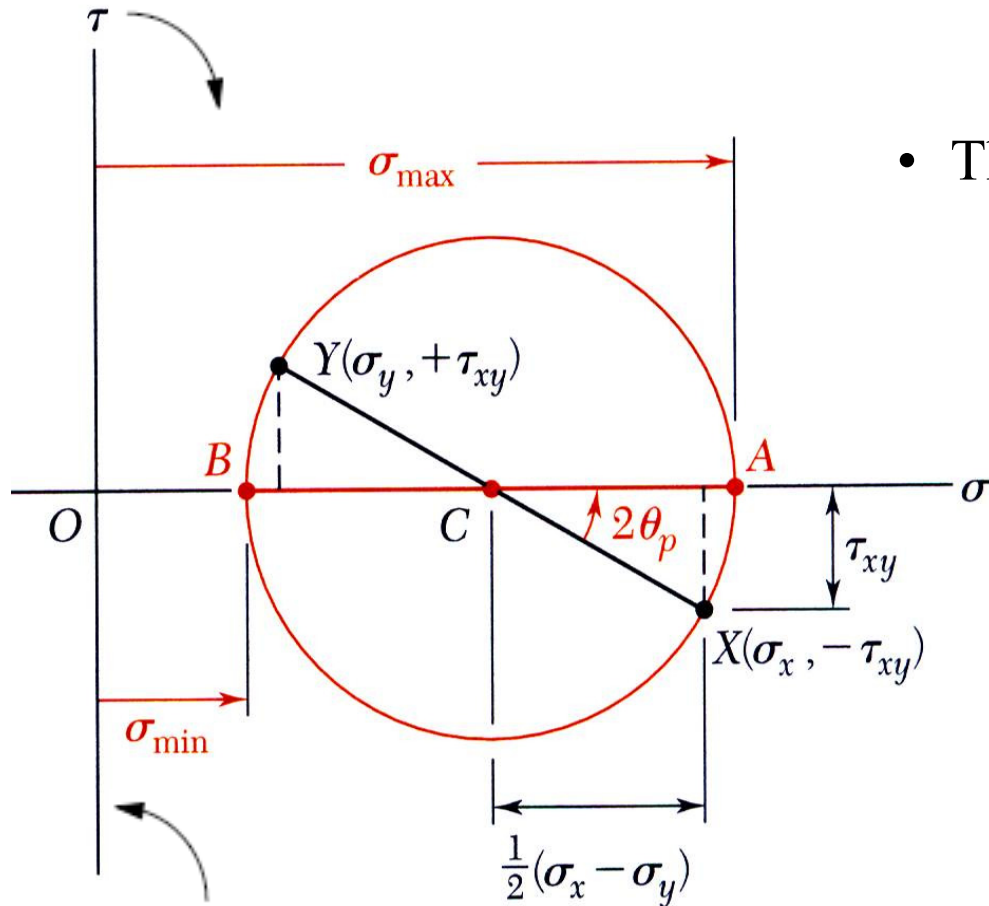


(b) Counterclockwise → Below

Transformations of Stress and Strain

□ Mohr's Circle for Plane Stress

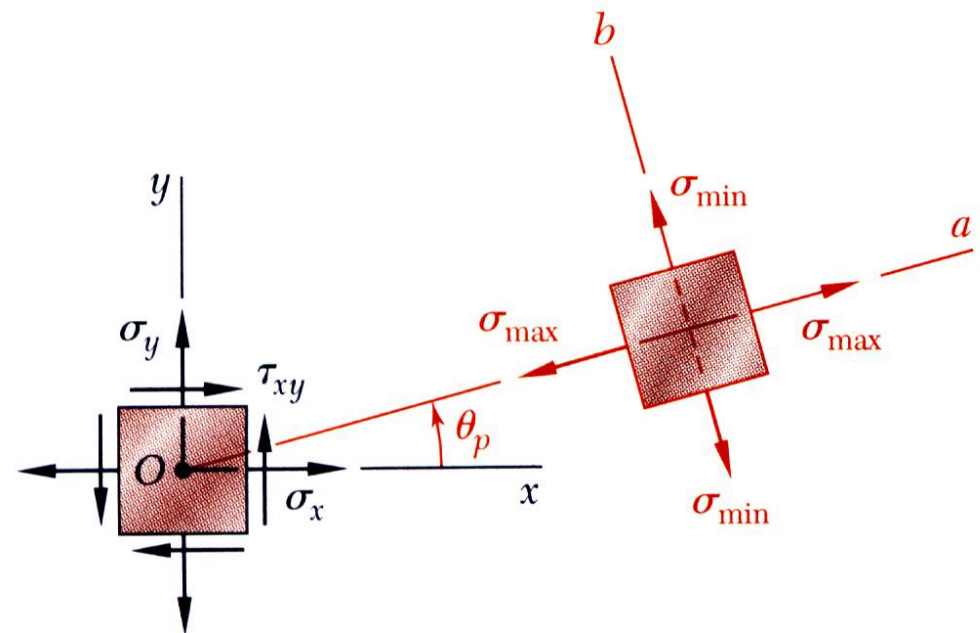
- The principal stresses are obtained at A and B .



$$\sigma_{max,min} = \sigma_{ave} \pm R$$

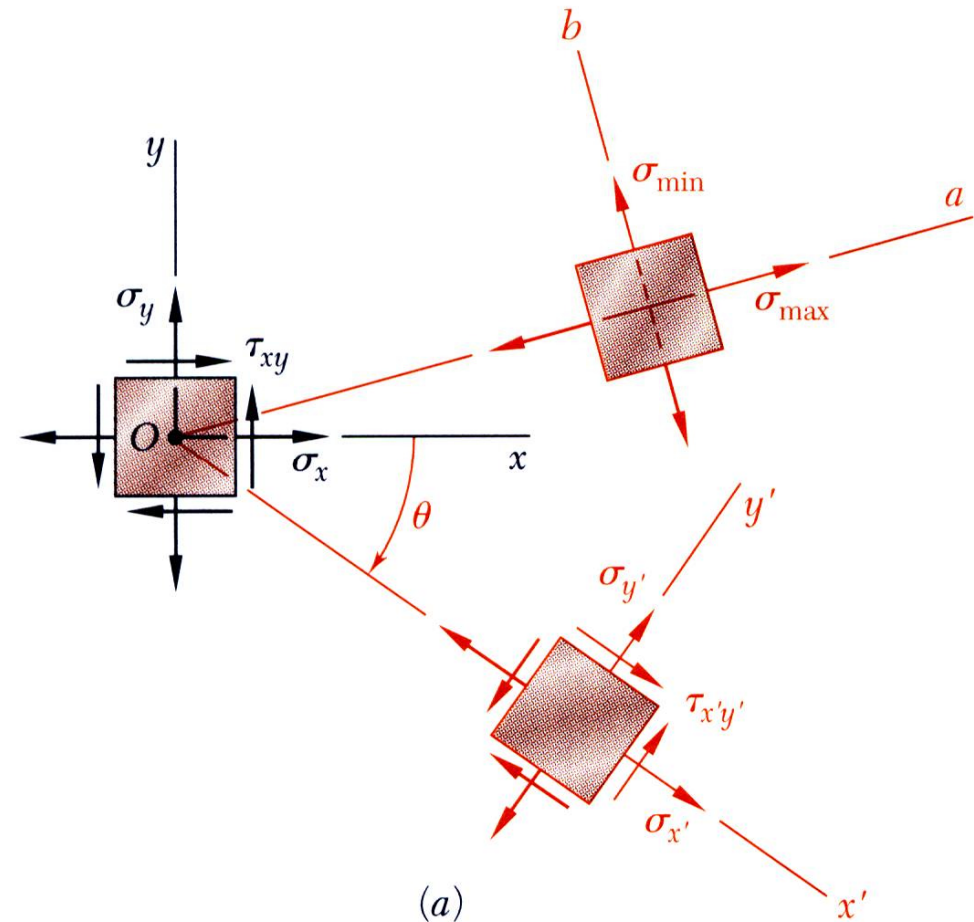
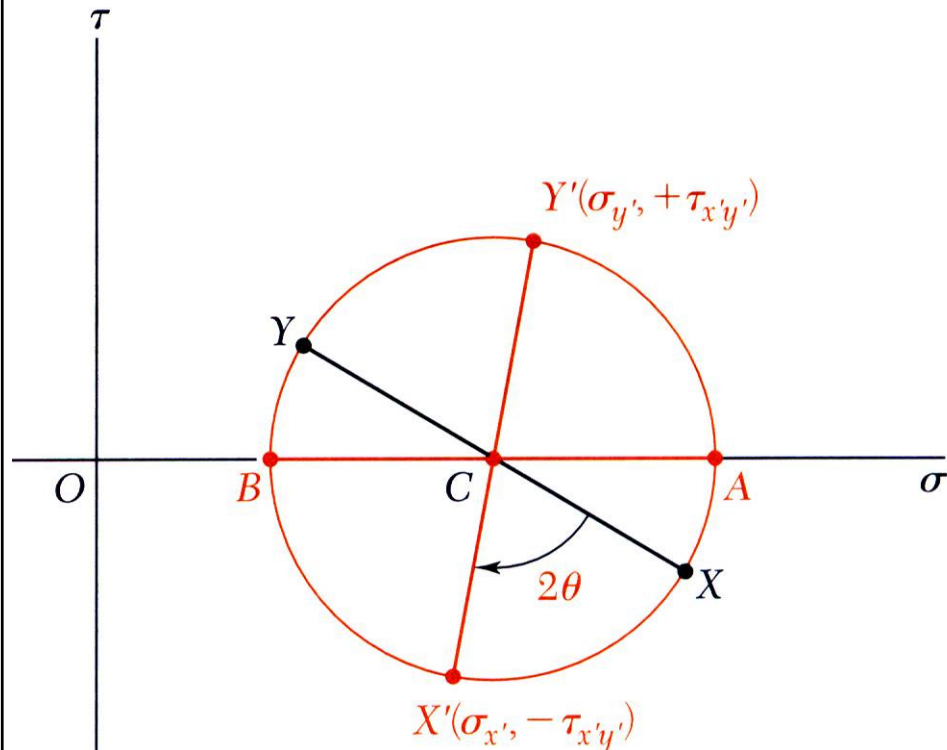
$$\tan 2\theta_p = \frac{2\tau_{xy}}{\sigma_x - \sigma_y}$$

The direction of rotation of Ox to Oa is the same as CX to CA .



Transformations of Stress and Strain

□ Mohr's Circle for Plane Stress



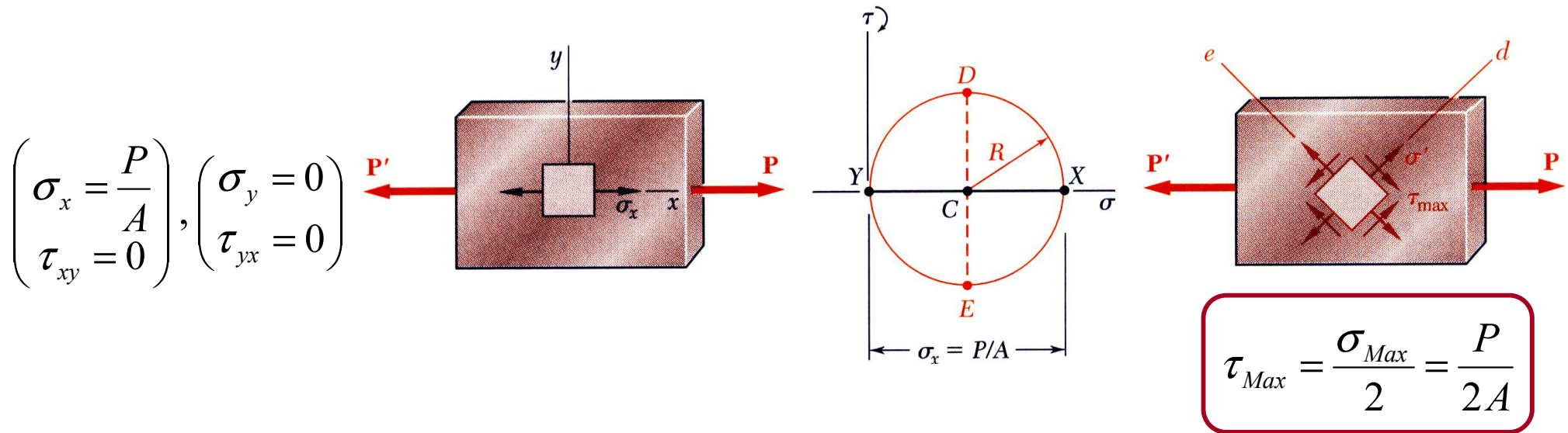
- Mohr's circle *uniquely* defines, the state of stress at *other axes orientations*.

- For the state of stress *at an angle θ* with respect to *the xy axes*, construct a new diameter $X'Y'$ at an *angle 2θ* with *respect to XY* .

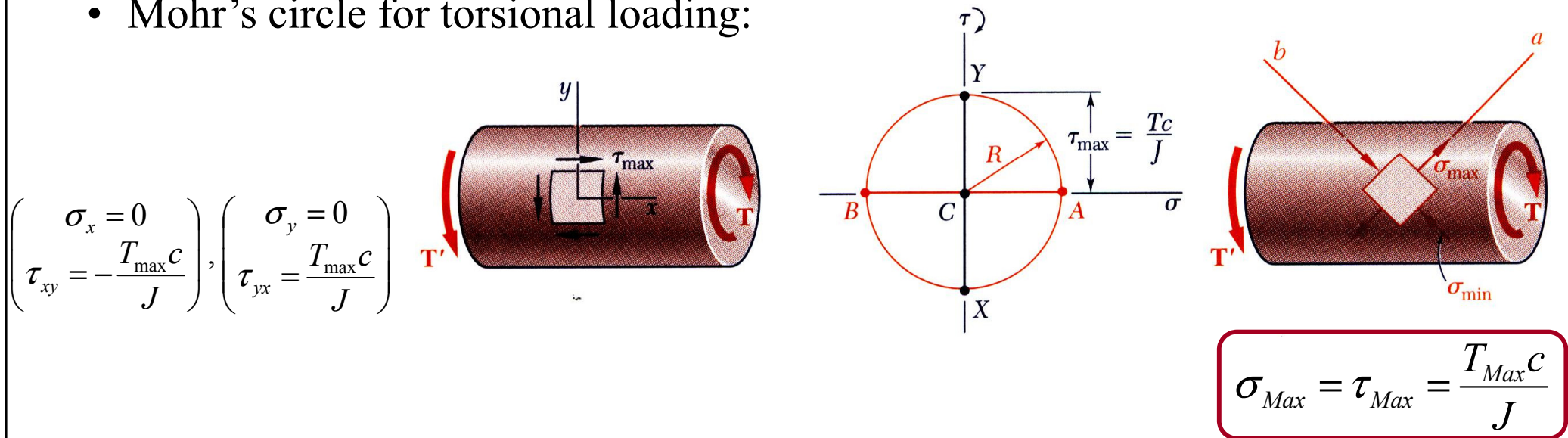
Transformations of Stress and Strain

□ Mohr's Circle for Plane Stress

- Mohr's circle for centric axial loading:



- Mohr's circle for torsional loading:

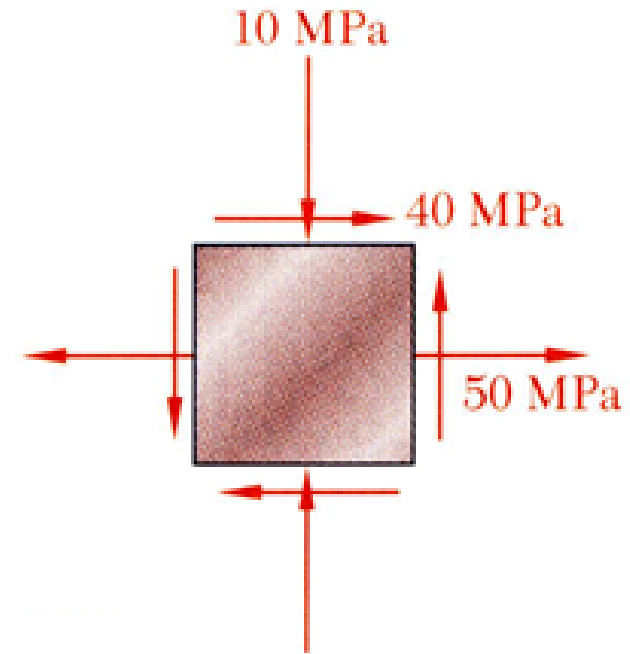


Transformations of Stress and Strain

□ Example 6

For the state of plane stress shown,

- (a) Construct Mohr's circle, determine
- (b) The principal planes,
- (c) The principal stresses,
- (d) The maximum shearing stress and the corresponding normal stress.



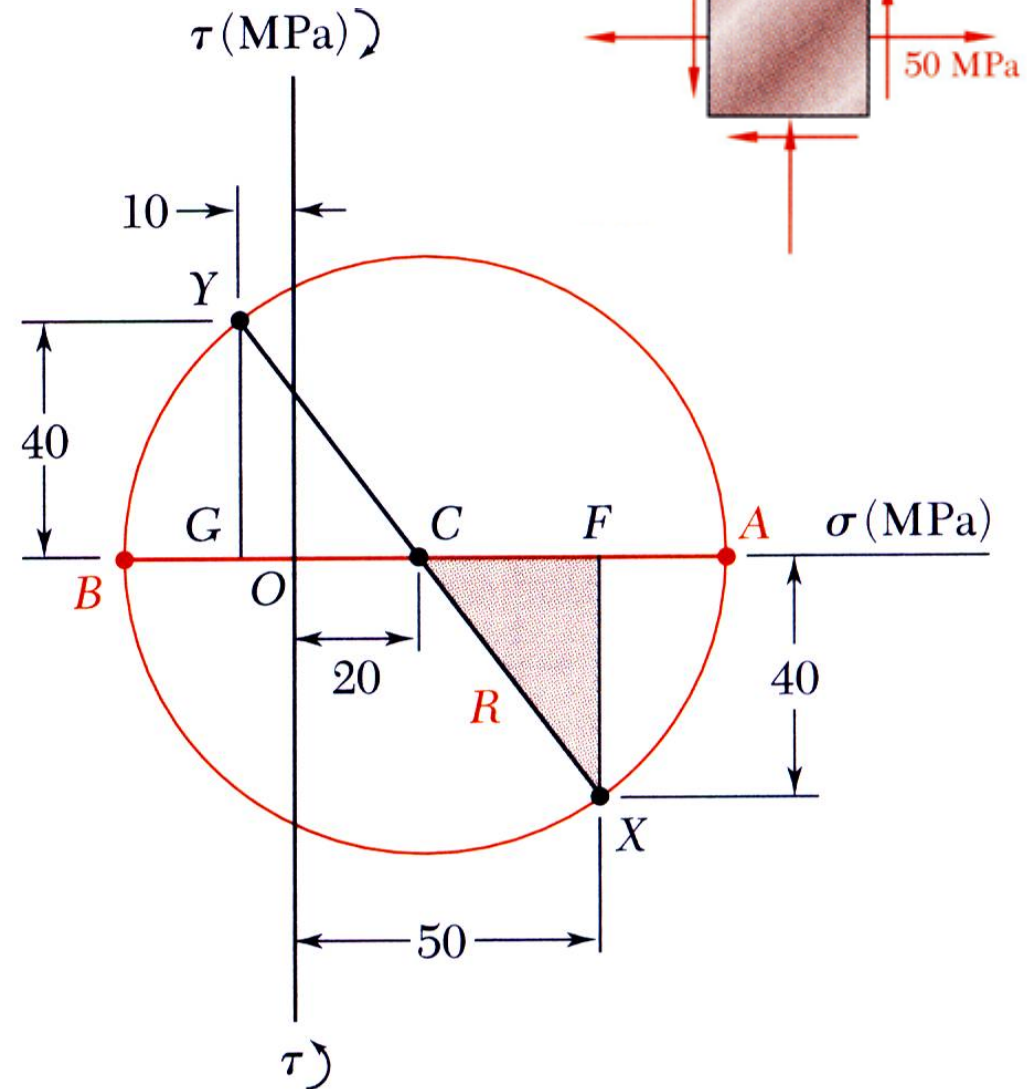
Transformations of Stress and Strain

□ Example 6

SOLUTION:

- Construction of Mohr's circle

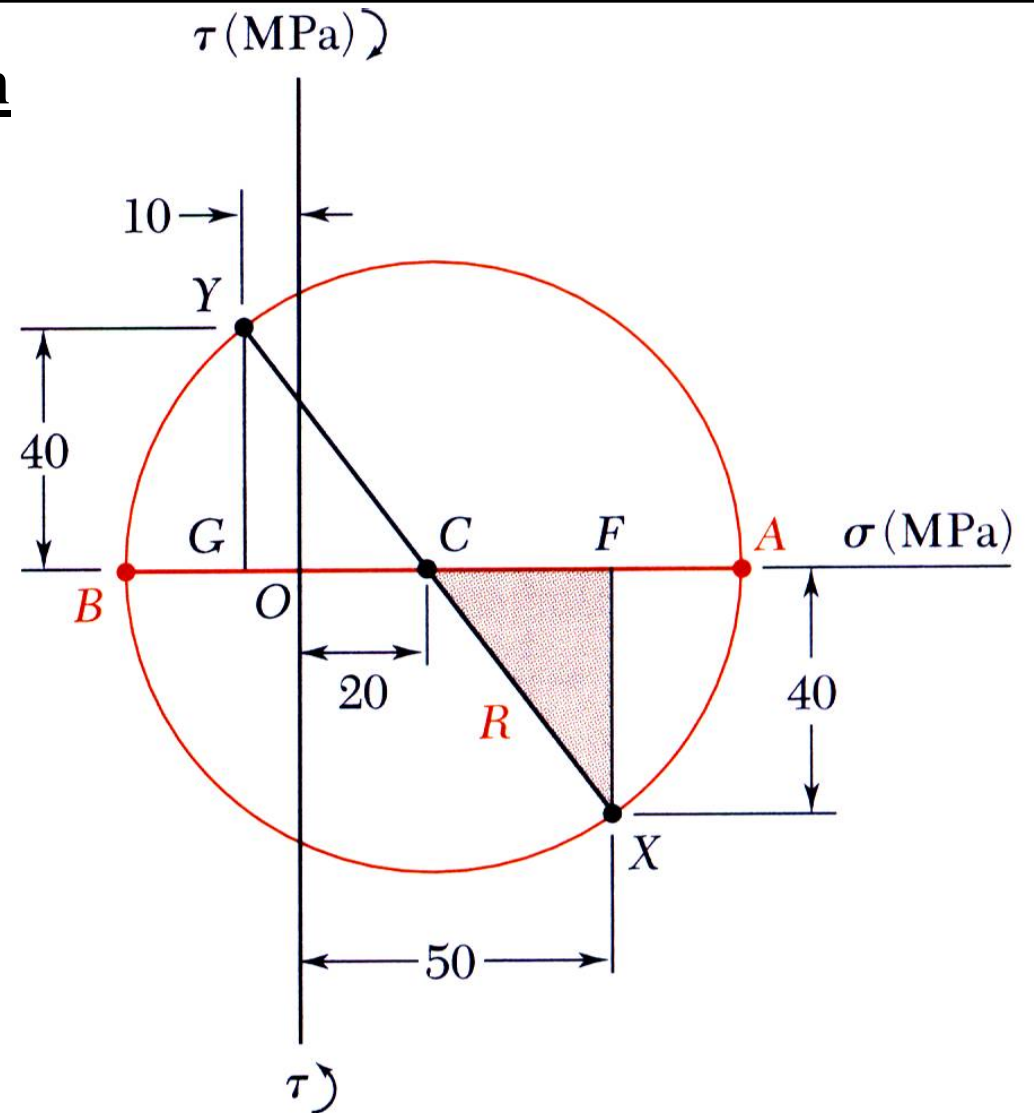
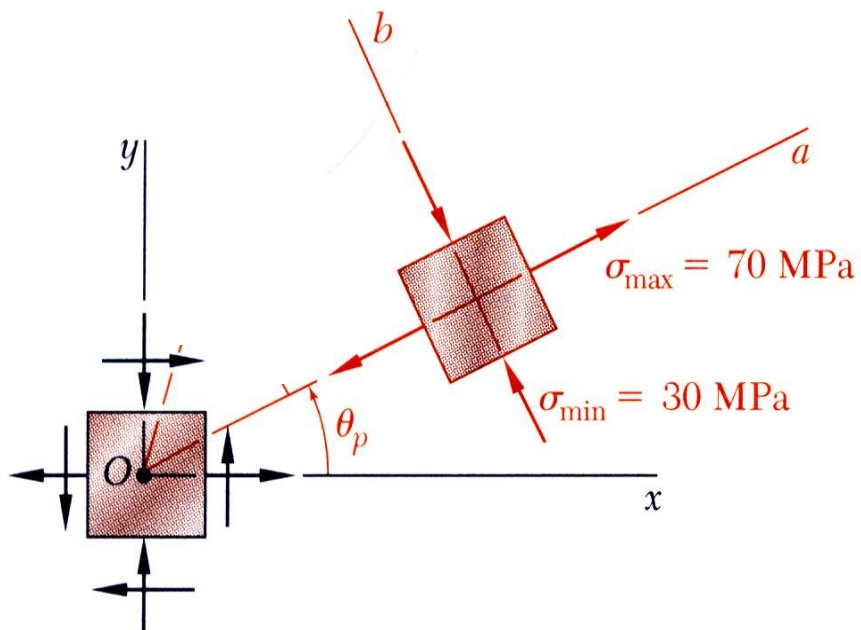
We have



Transformations of Stress and Strain

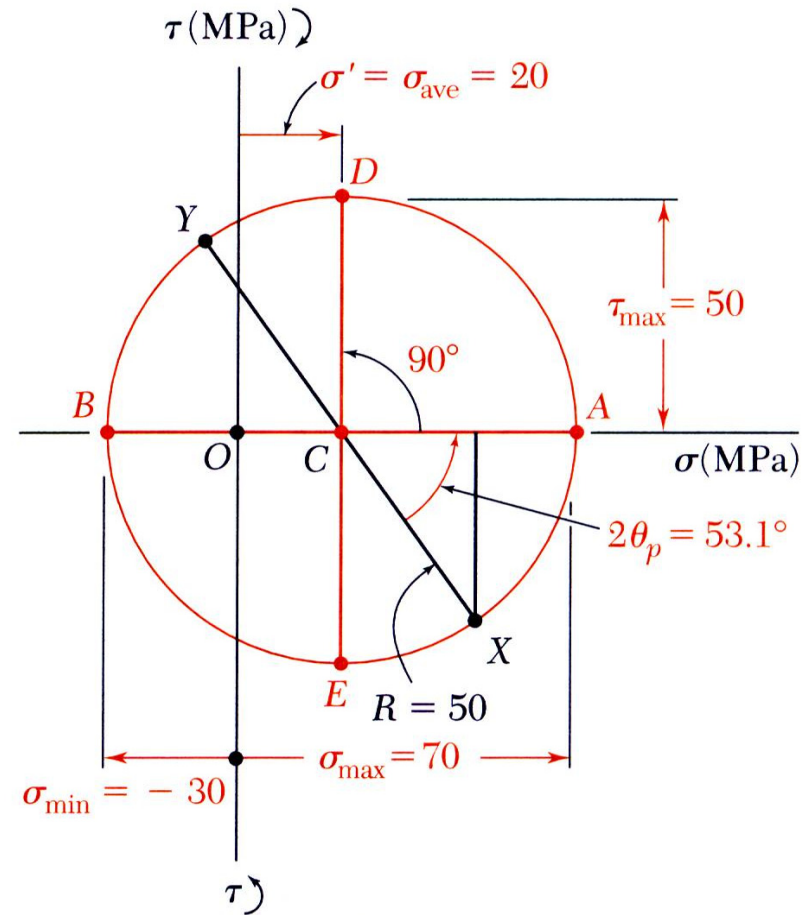
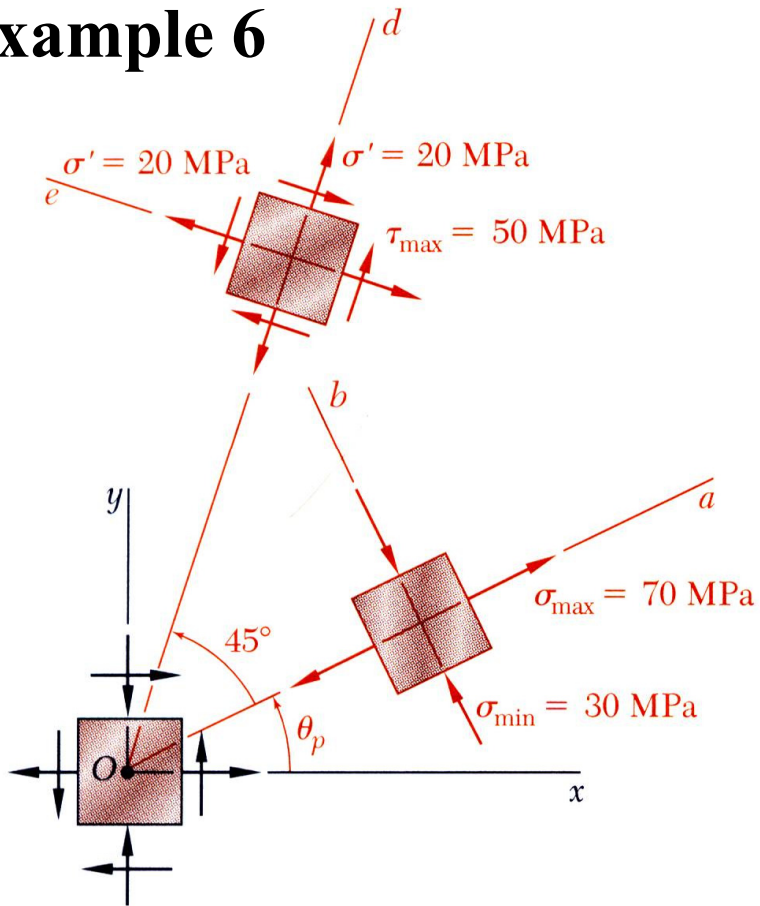
□ Example 6

- Principal planes and stresses



Transformations of Stress and Strain

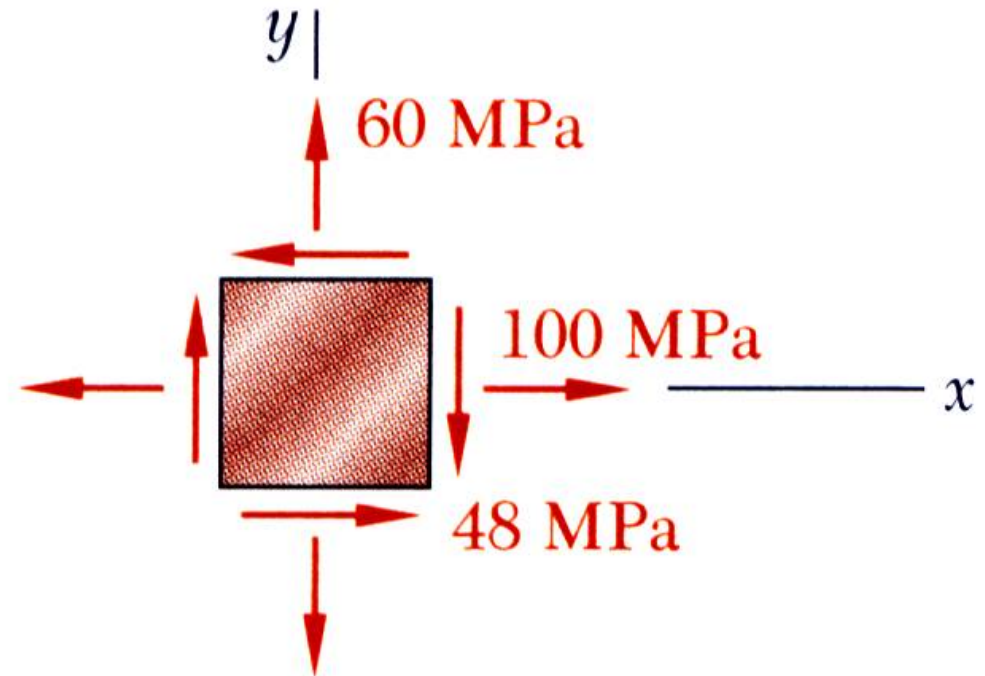
□ Example 6



- Maximum shear stress

Transformations of Stress and Strain

□ Example 7



For the state of stress shown, determine

- The principal planes and the principal stresses.
- The stress components exerted on the element obtained by rotating the given element counterclockwise through 30 degrees.

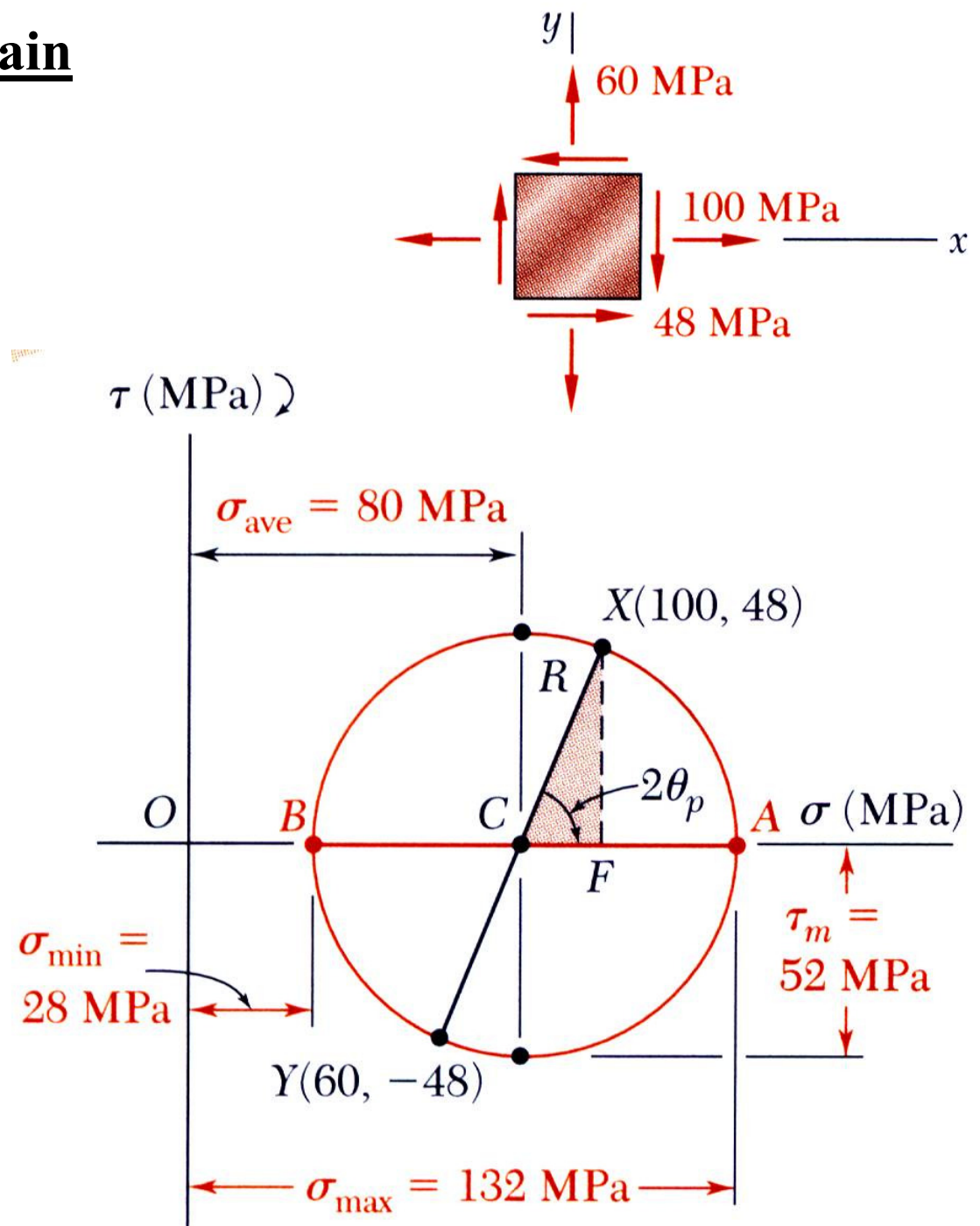
Transformations of Stress and Strain

□ Example 7

SOLUTION:

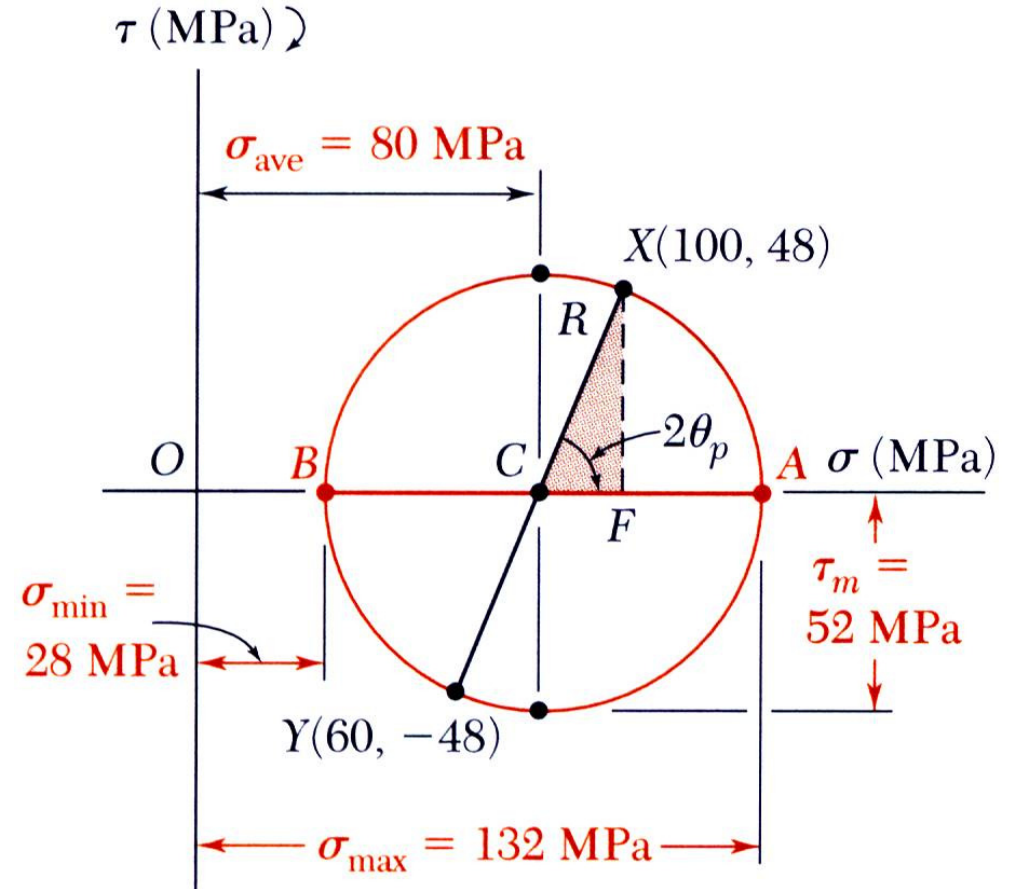
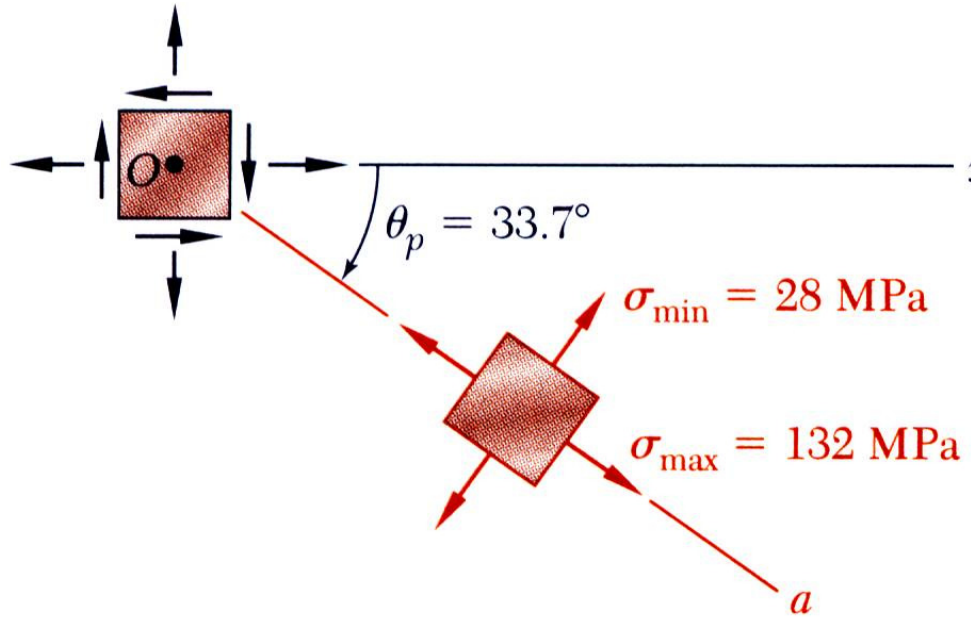
- Construction of Mohr's circle

We have



Transformations of Stress and Strain

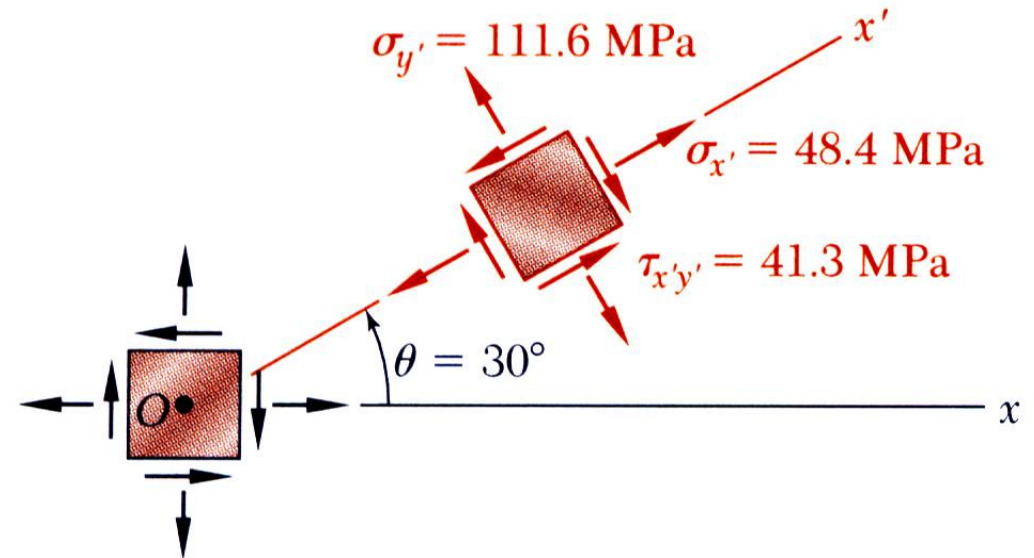
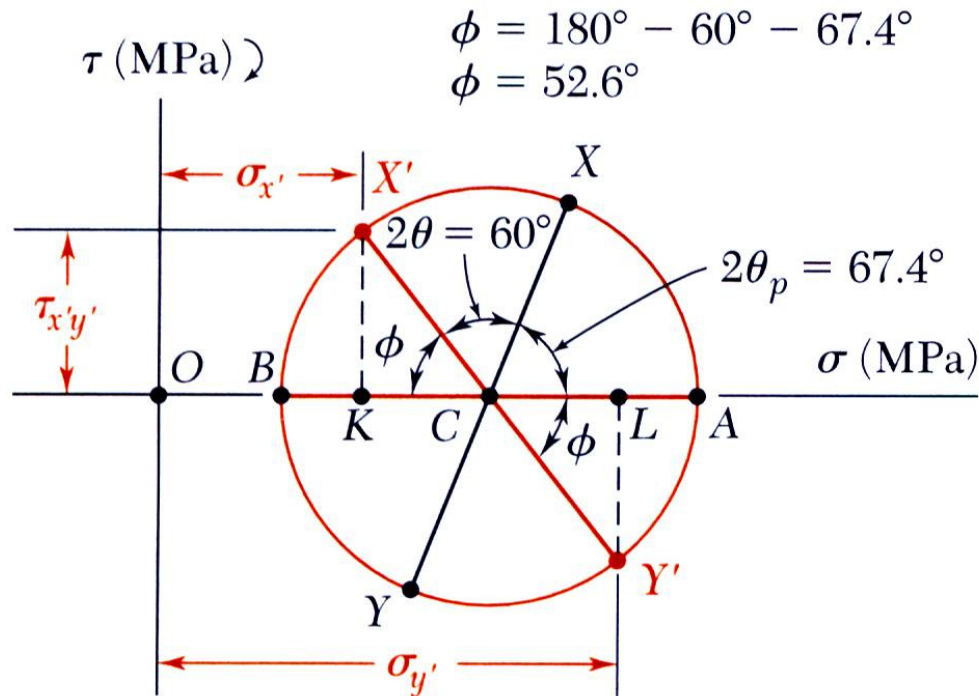
□ Example 7



- Principal planes and stresses

Transformations of Stress and Strain

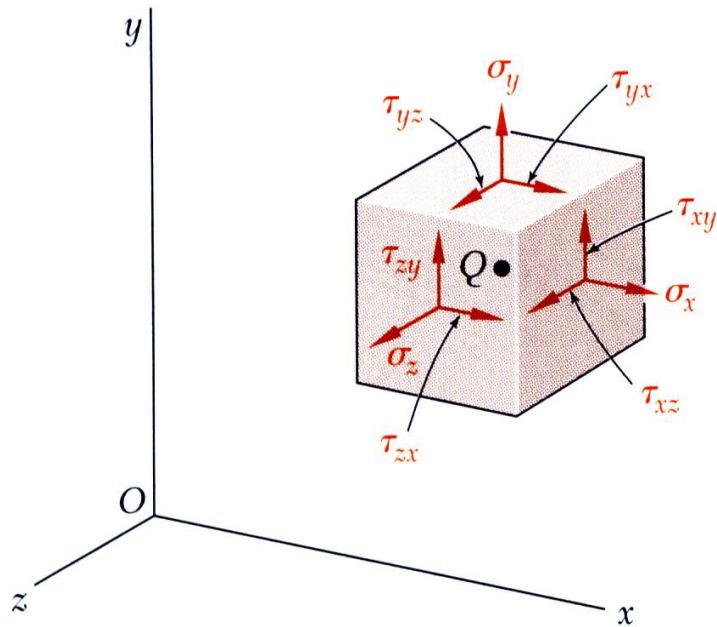
□ Example 7



- Stress components after rotation by 30°
- Points X' and Y' on Mohr's circle that correspond to stress components on the rotated element are obtained by rotating XY counterclockwise through $2\theta = 60^\circ$

Transformations of Stress and Strain

□ General State of Stress

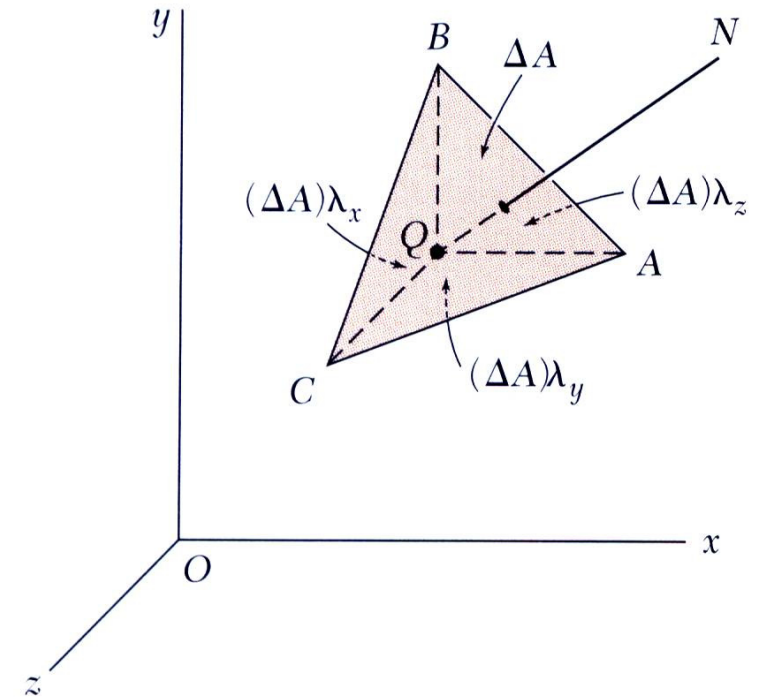


• Consider the general 3D state of stress at a point and the transformation of stress from element rotation

• State of stress at Q defined by: $\sigma_x, \sigma_y, \sigma_z, \tau_{xy}, \tau_{yz}, \tau_{zx}$

• Consider tetrahedron with face perpendicular to the line QN with *direction cosines*:

$$\lambda_x, \lambda_y, \lambda_z$$

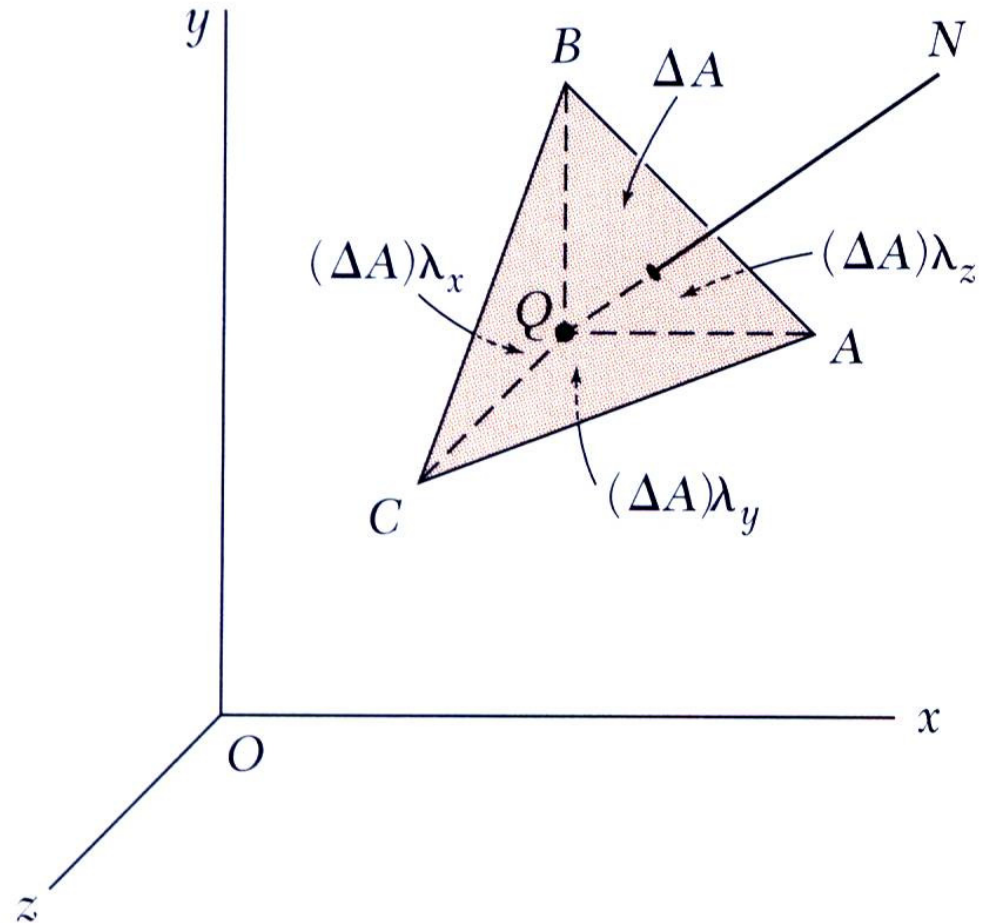


Transformations of Stress and Strain

□ General State of Stress

- The requirement leads to

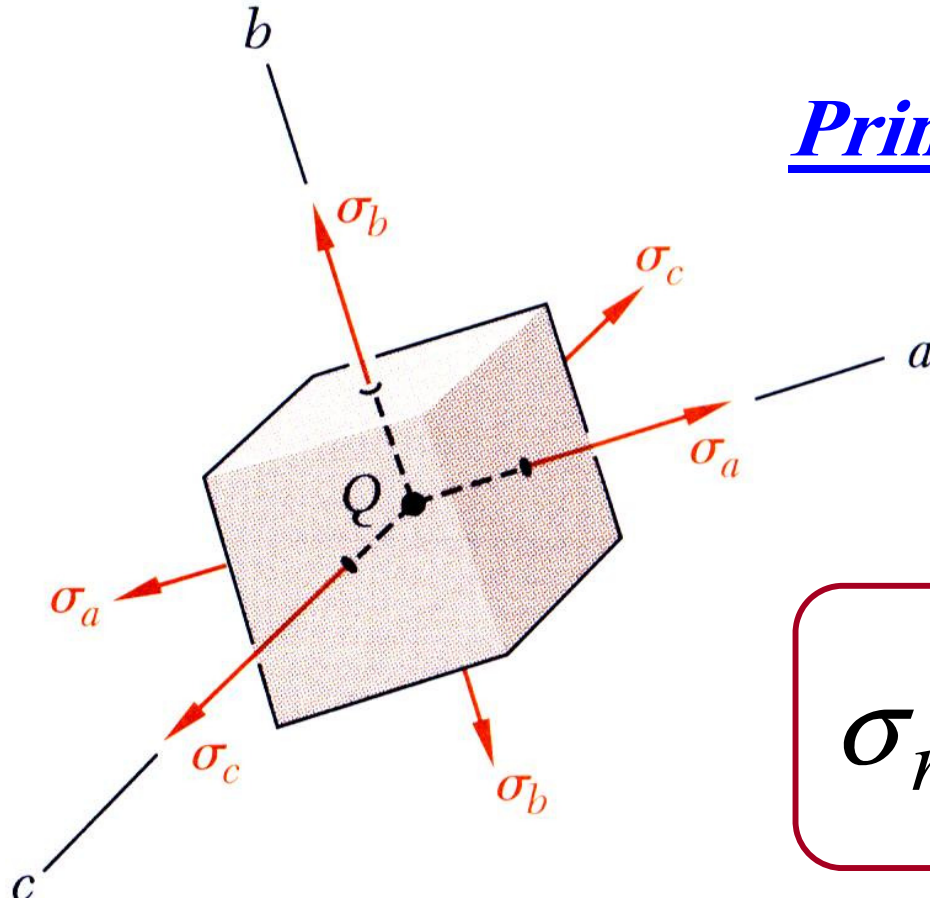
$$\sum F_n = 0$$



$$\begin{aligned}\sigma_n &= \sigma_x \lambda_x^2 + \sigma_y \lambda_y^2 + \sigma_z \lambda_z^2 \\ &\quad + 2\tau_{xy} \lambda_x \lambda_y + 2\tau_{yz} \lambda_y \lambda_z + 2\tau_{zx} \lambda_z \lambda_x\end{aligned}$$

Transformations of Stress and Strain

□ General State of Stress



Principal axes and principal planes

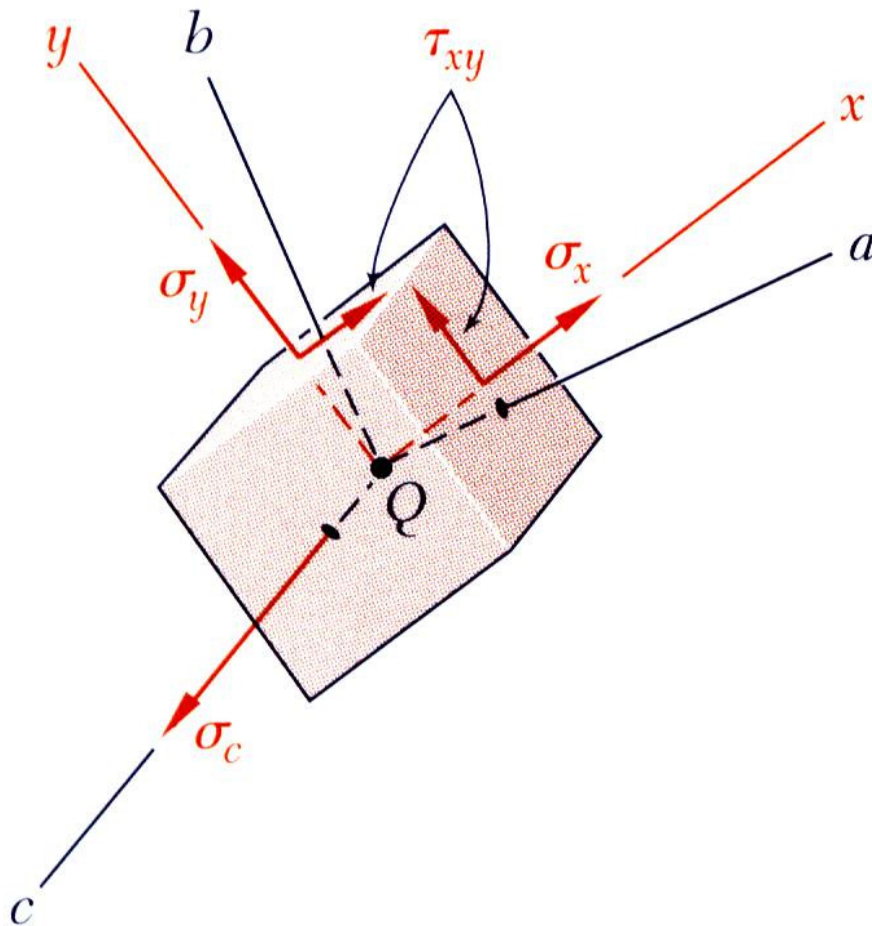
- Form of equation guarantees that an element orientation can be found such that

$$\sigma_n = \sigma_a \lambda_a^2 + \sigma_b \lambda_b^2 + \sigma_c \lambda_c^2$$

These are the principal axes and principal planes and the normal stresses are the principal stresses.

Transformations of Stress and Strain

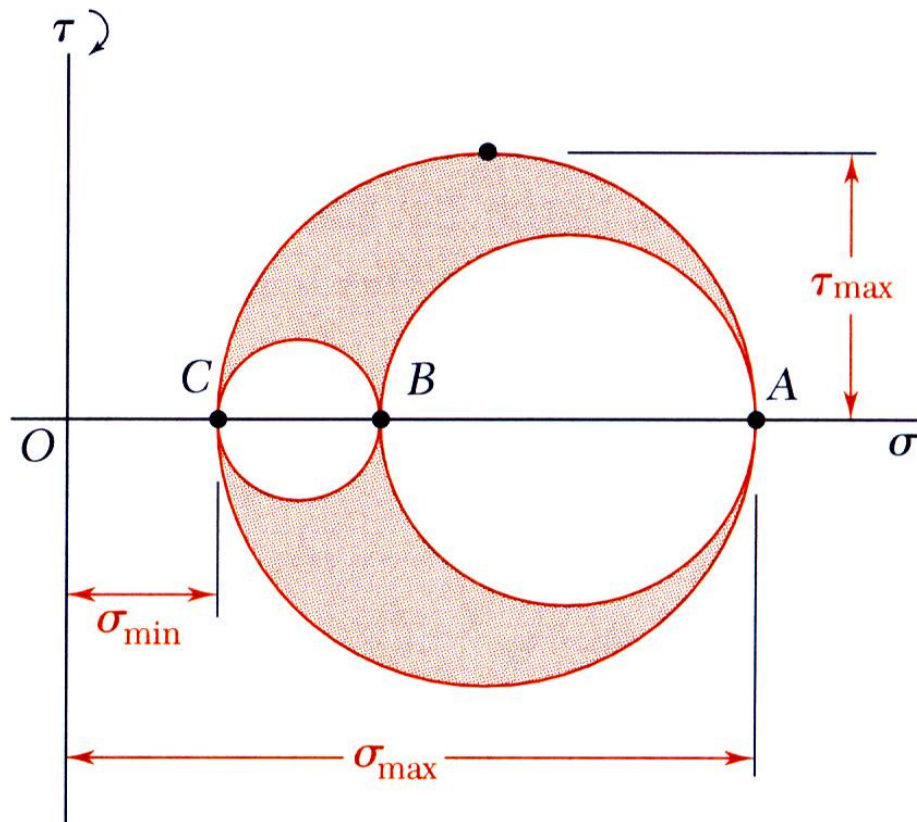
□ Application of Mohr's Circle to the Three- Dimensional Analysis of Stress



- Transformation of stress for an element rotated around a principal axis may be represented by Mohr's circle.

Transformations of Stress and Strain

□ Application of Mohr's Circle to the Three- Dimensional Analysis of Stress



- Points A , B , and C represent the ***principal stresses on the principal planes*** (shearing stress is zero)

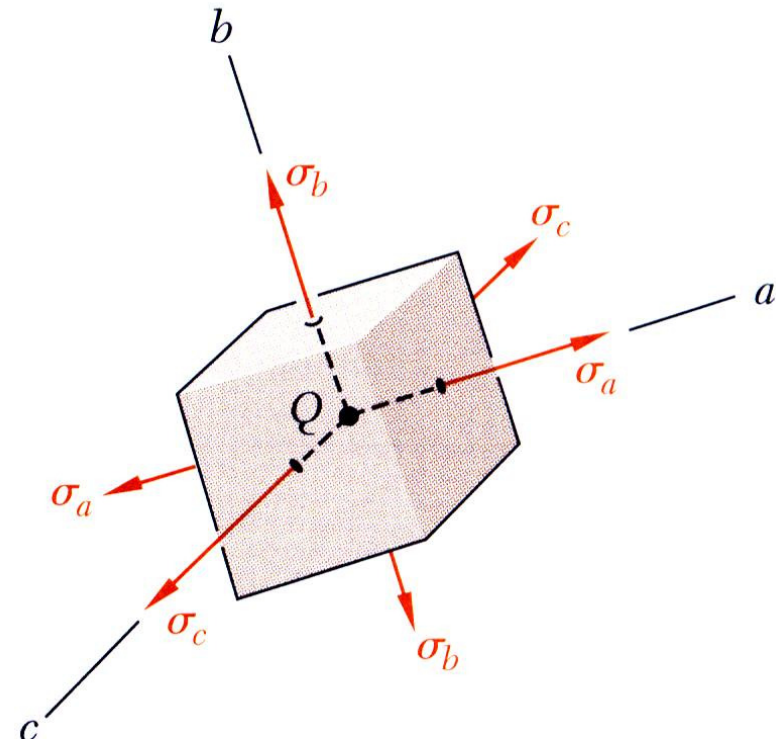
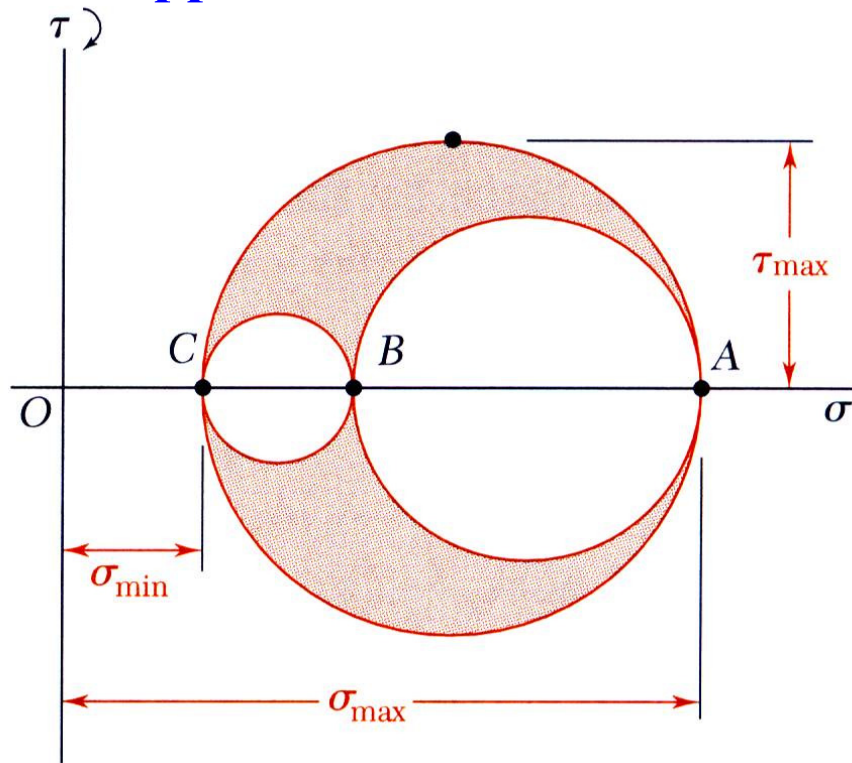
- The three circles represent the normal and shearing stresses for rotation around each principal axis.

- Radius of the largest circle yields the maximum shearing stress.

$$\tau_{\max} = \frac{1}{2} |\sigma_{\max} - \sigma_{\min}|$$

Transformations of Stress and Strain

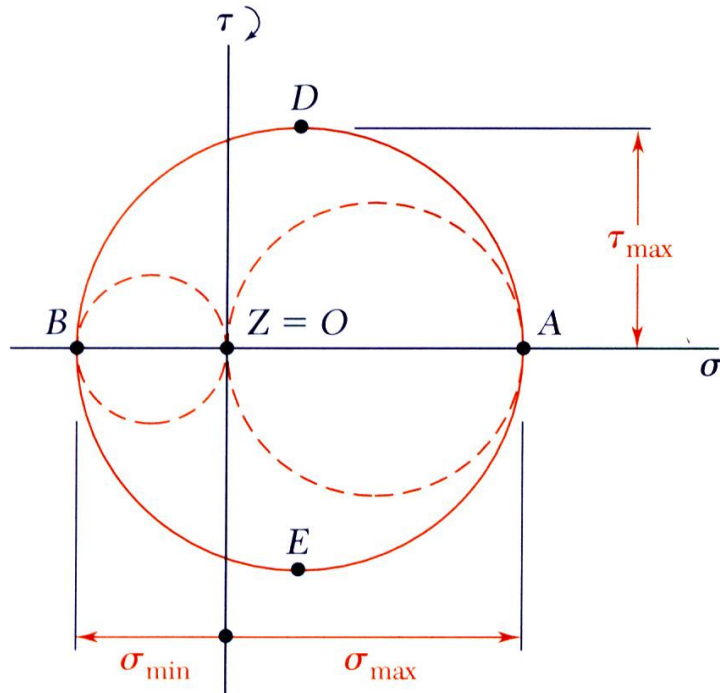
□ Application of Mohr's Circle to the Three- Dimensional Analysis of Stress



- **Circle AB** corresponding to surfaces which *rotates around c axis.*
- **Circle BC** corresponding to surfaces which *rotates around a axis.*
- **Circle CA** corresponding to surfaces which *rotates around b axis.*

Transformations of Stress and Strain

□ Application of Mohr's Circle to the Three-Dimensional Analysis of Stress



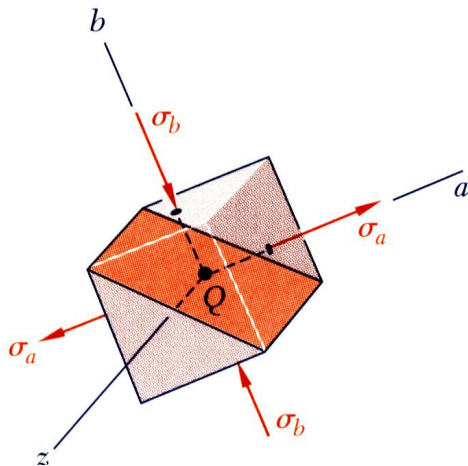
• **In the case of plane stress**, the axis perpendicular to the plane of stress is a principal axis (shearing stress equal zero).

• If the points A and B (representing the principal planes) are on opposite sides of the origin, then

a) The corresponding principal stresses are the maximum and minimum normal stresses for the element

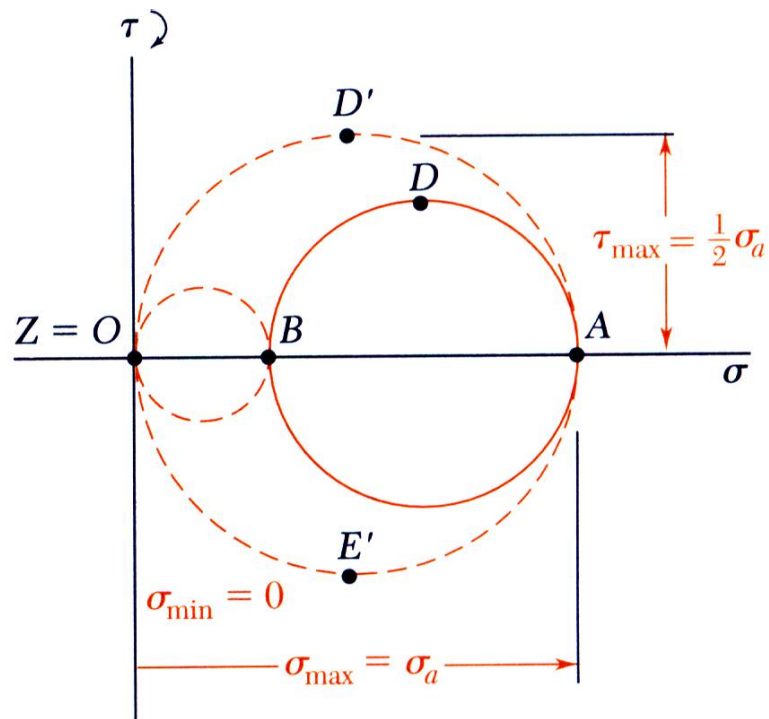
b) The maximum shearing stress for the element is equal to the maximum “in-plane” shearing stress

c) Planes of maximum shearing stress are at 45° to the principal planes.



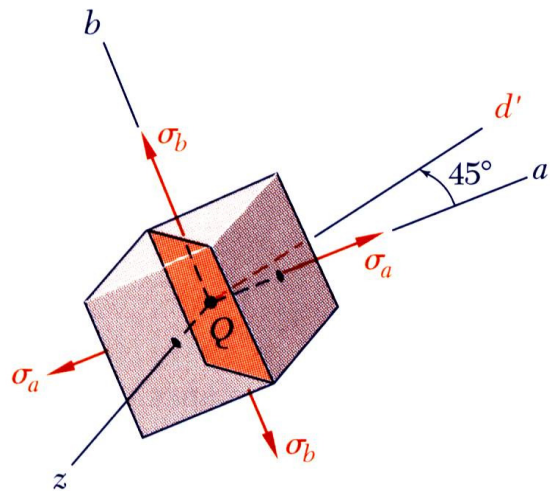
Transformations of Stress and Strain

□ Application of Mohr's Circle to the Three- Dimensional Analysis of Stress



•If A and B are on the same side of the origin (i.e., **have the same sign**), then

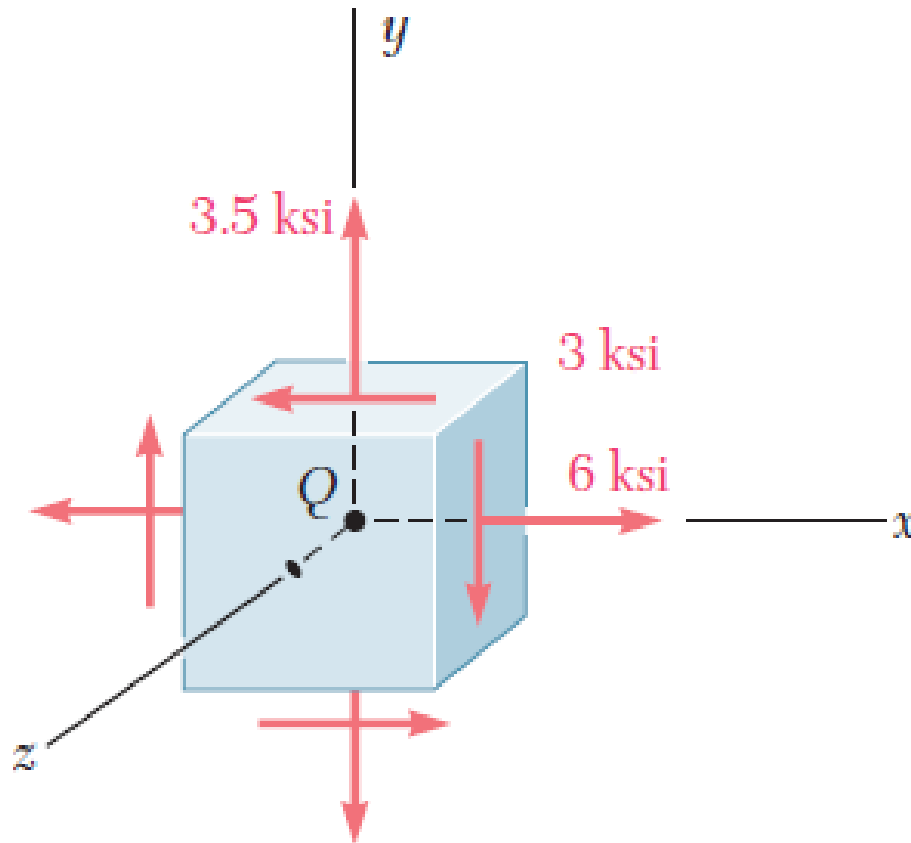
- The circle defining σ_{\max} , σ_{\min} , and τ_{\max} for the element is not the circle corresponding to transformations within the plane of stress
- Maximum shearing stress for the element is equal to **half of the maximum stress**
- Planes of maximum shearing stress are at 45 degrees to the plane of stress



Transformations of Stress and Strain

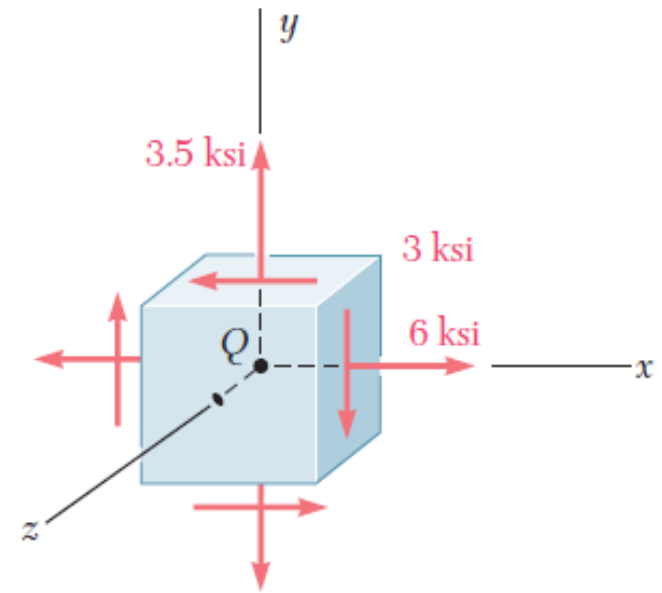
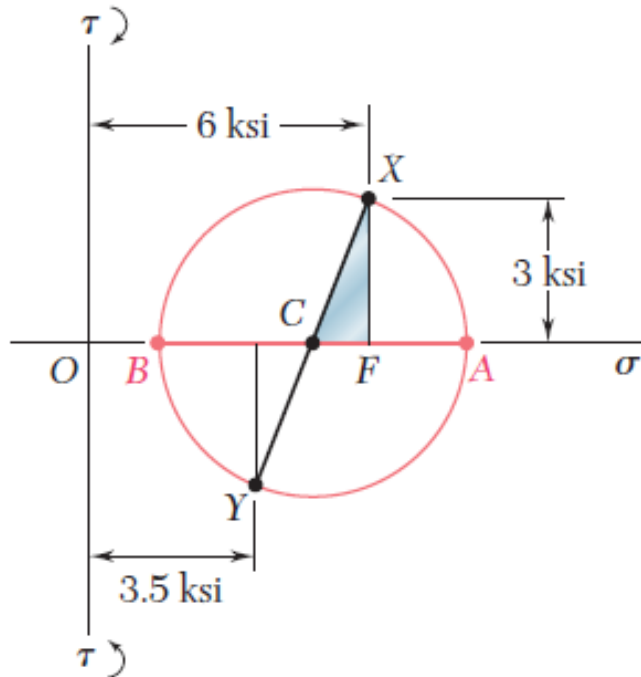
□ Example 8

For the state of plane stress shown, determine (a) the three principal planes and principal stresses, (b) the maximum shearing stress.



Transformations of Stress and Strain

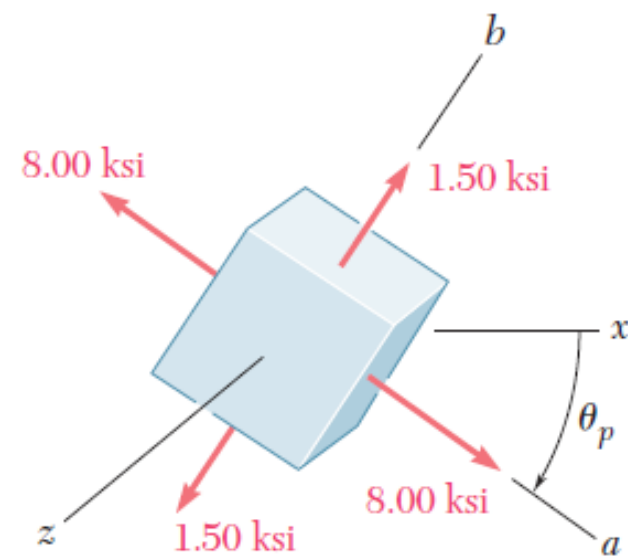
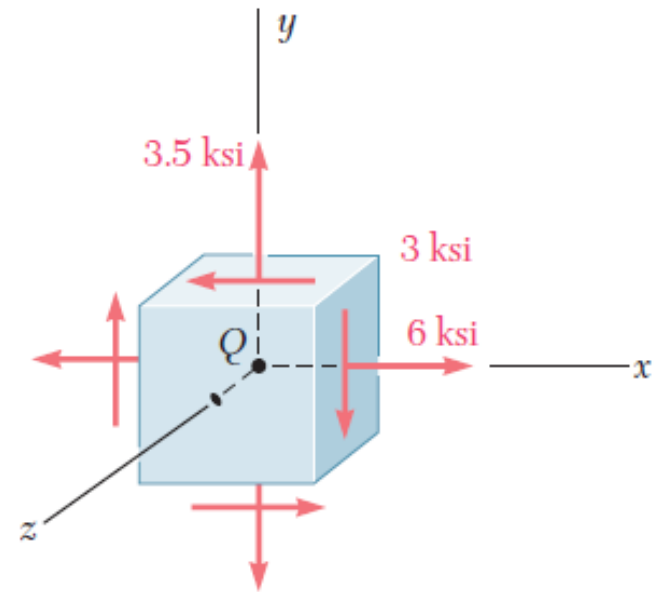
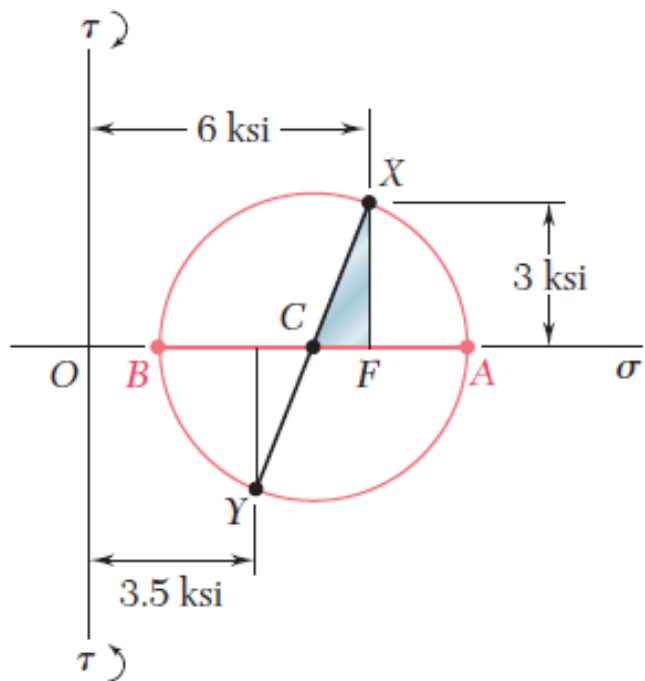
□ Example 8



Since the sides of the right triangle CFX are $CF=6-4.75=1.25 \text{ ksi}$ and $FX= 3 \text{ ksi}$, the radius of the circle is

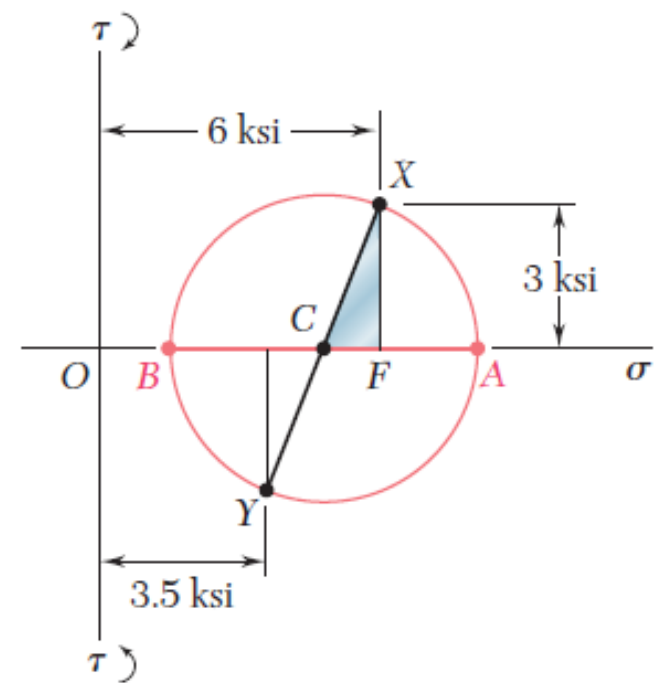
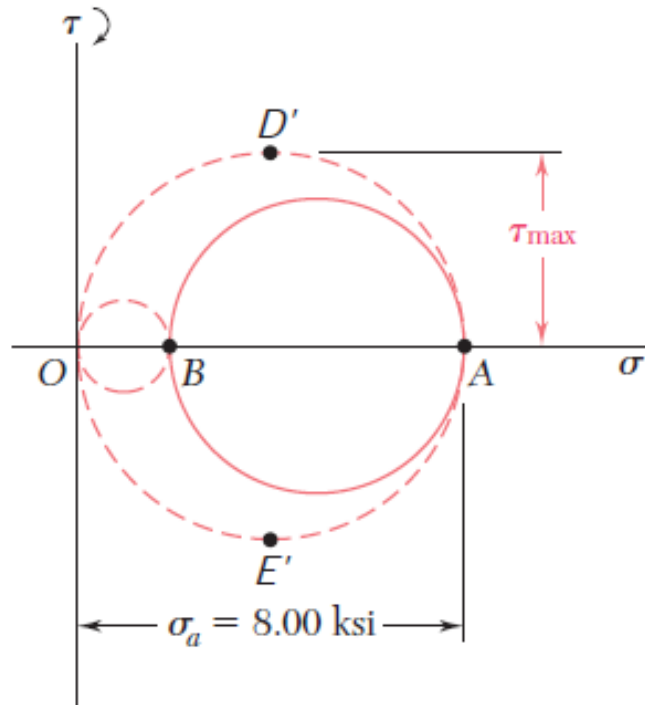
Transformations of Stress and Strain

□ Example 8



Transformations of Stress and Strain

□ Example 8



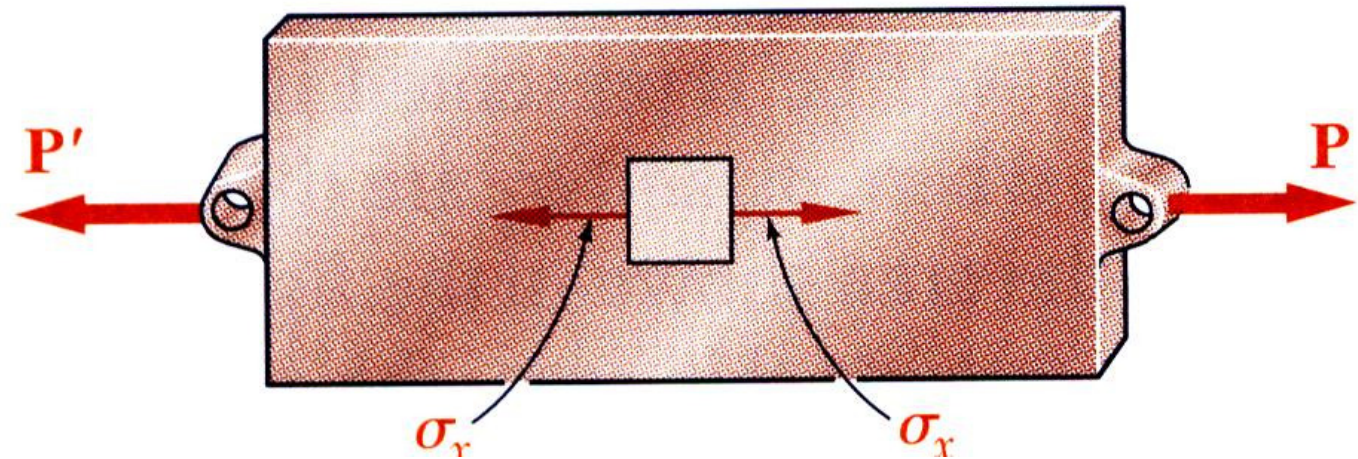
Since points D' and E', which define the planes of maximum shearing stress, are located at the ends of the vertical diameter of the circle corresponding to a rotation about the b axis, the faces of the element can be brought to coincide with the planes of maximum shearing stress through a rotation of 45° about the b axis.

Transformations of Stress and Strain

□ Yield Criteria for Ductile Materials Under Plane Stress

- Failure of a machine component subjected to uniaxial stress is directly **predicted** from an equivalent tensile test

Uniaxial Stress



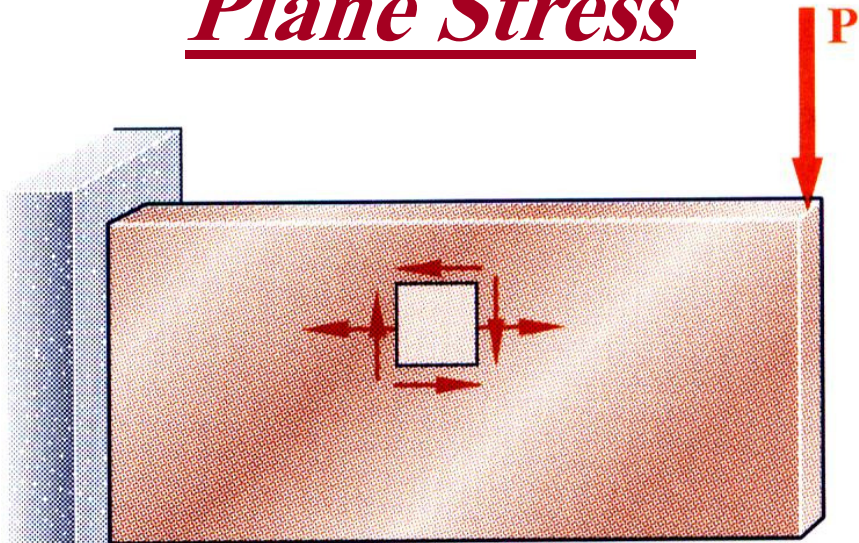
if $\sigma_x < \sigma_y$ \Rightarrow

The component is in a **health condition**.

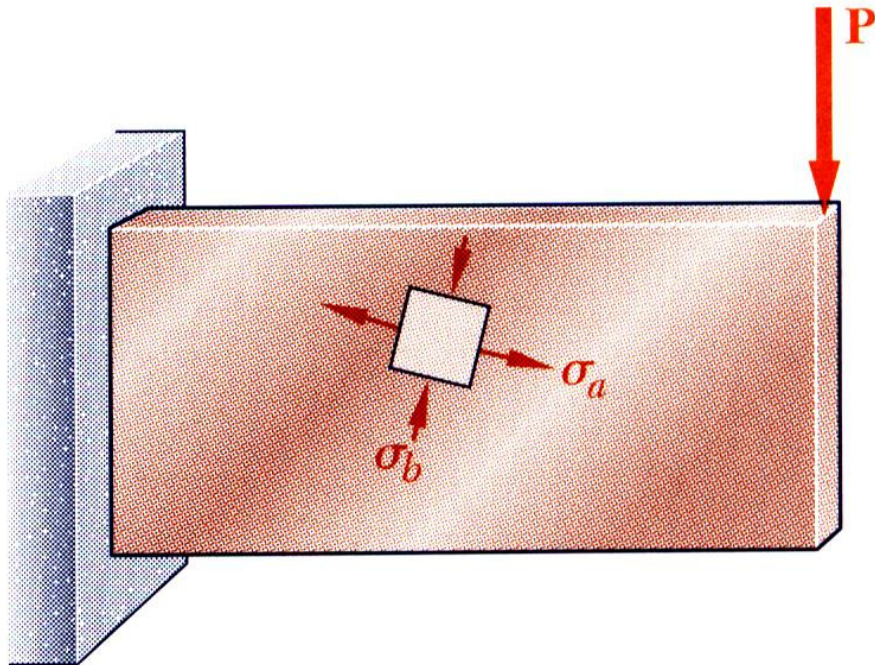
Transformations of Stress and Strain

□ Yield Criteria for Ductile Materials Under Plane Stress

Plane Stress



• Failure of a machine component subjected to plane stress **cannot be directly predicted from the uniaxial state of stress in a tensile test specimen**



• It is convenient to **determine the principal stresses** and to base the failure criteria on the corresponding biaxial stress state

Transformations of Stress and Strain

□ Yield Criteria for Ductile Materials Under Plane Stress

Maximum shearing stress criteria:

- Based on **slippage of the material** along oblique surface and is due to shearing stress

Structural component is safe if the maximum shearing stress is less than the *maximum shearing stress in a tensile test specimen at yield*.

For centric axial loading we have

$$\tau_{Max} = \frac{\sigma_{Max}}{2} \Rightarrow$$

$$\tau_{max} < \tau_Y = \frac{\sigma_Y}{2}$$

Transformations of Stress and Strain

□ Yield Criteria for Ductile Materials Under Plane Stress

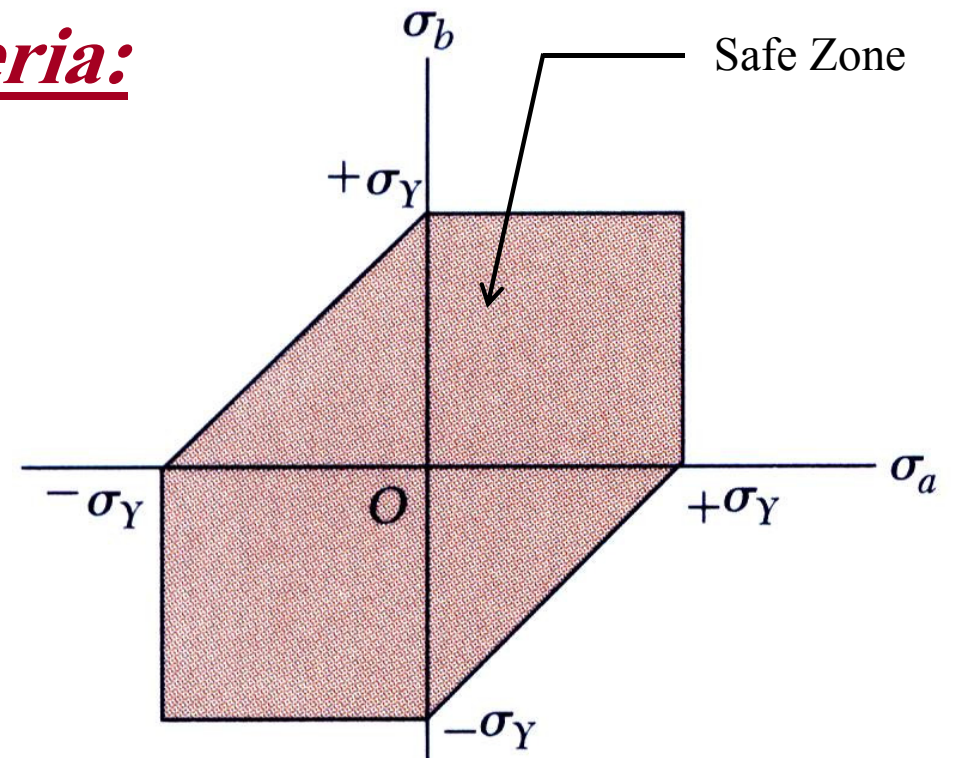
Maximum shearing stress criteria:

For σ_a and σ_b with the same sign

$$\tau_{\max} = \frac{|\sigma_a|}{2} \text{ or } \frac{|\sigma_b|}{2} < \frac{\sigma_Y}{2} \Rightarrow \left\{ \begin{array}{l} |\sigma_a| < \sigma_Y \\ |\sigma_b| < \sigma_Y \end{array} \right.$$

For σ_a and σ_b with opposite signs

$$\tau_{\max} = \frac{|\sigma_a - \sigma_b|}{2} < \frac{\sigma_Y}{2} \Rightarrow |\sigma_a - \sigma_b| < \sigma_Y$$



Tresca's hexagon

(Henri Edouard Tresca 1814-1885)

Transformations of Stress and Strain

□ Yield Criteria for Ductile Materials Under Plane Stress

Maximum Distortion Energy Criterion

- Based on the determination of the *distortion energy* in a given material
It means that determination of energy associated with changes in shape in that material.

Structural component is safe if the distortion energy per unit volume is less than **the required distortion energy per unit volume in a tensile test specimen at yield.**

$$u_d < (u_d)_Y$$

Distortion energy per unit volume of Isotropic material:

$$u_d = \frac{1}{6G} (\sigma_a^2 - \sigma_a \sigma_b + \sigma_b^2)$$

G: Modulus of Rigidity

Transformations of Stress and Strain

□ Yield Criteria for Ductile Materials Under Plane Stress

Maximum Distortion Energy Criterion

in a tensile test specimen at yield.

$$\begin{cases} \sigma_a = \sigma_Y \\ \sigma_b = 0 \end{cases} \Rightarrow (u_d)_Y = \frac{1}{6G} (\sigma_Y^2 - \sigma_Y(0) + (0)^2) = \frac{\sigma_Y^2}{6G}$$

$$u_d < (u_d)_Y \Rightarrow \frac{1}{6G} (\sigma_a^2 - \sigma_a \sigma_b + \sigma_b^2) < \frac{\sigma_Y^2}{6G} \Rightarrow$$

$$\sigma_a^2 - \sigma_a \sigma_b + \sigma_b^2 < \sigma_Y^2$$

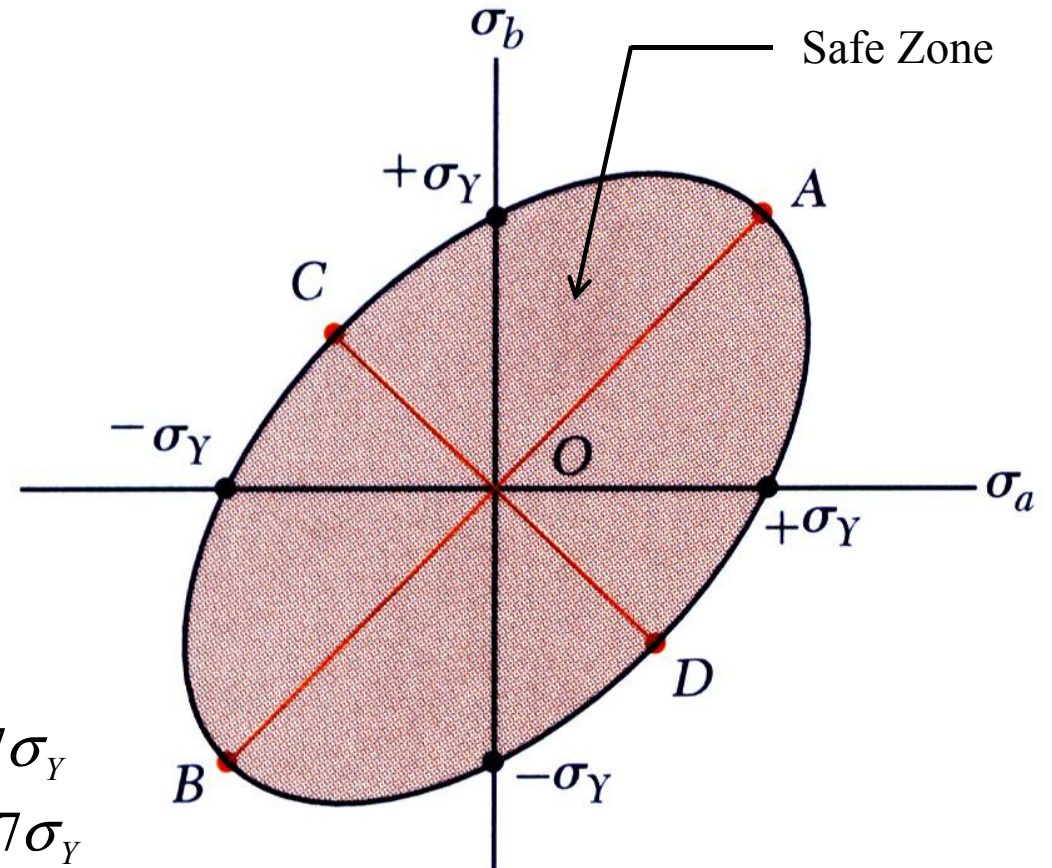
Ellipse equation

Transformations of Stress and Strain

□ Yield Criteria for Ductile Materials Under Plane Stress

Maximum Distortion Energy Criterion

$$\sigma_a^2 - \sigma_a \sigma_b + \sigma_b^2 < \sigma_Y^2$$



$$A = \begin{cases} \sigma_a = \sigma_Y \\ \sigma_b = \sigma_Y \end{cases} \quad \& \quad B = \begin{cases} \sigma_a = -\sigma_Y \\ \sigma_b = -\sigma_Y \end{cases}$$

$$C = \begin{cases} \sigma_a = -0.577\sigma_Y \\ \sigma_b = 0.577\sigma_Y \end{cases} \quad \& \quad C = \begin{cases} \sigma_a = 0.577\sigma_Y \\ \sigma_b = -0.577\sigma_Y \end{cases}$$

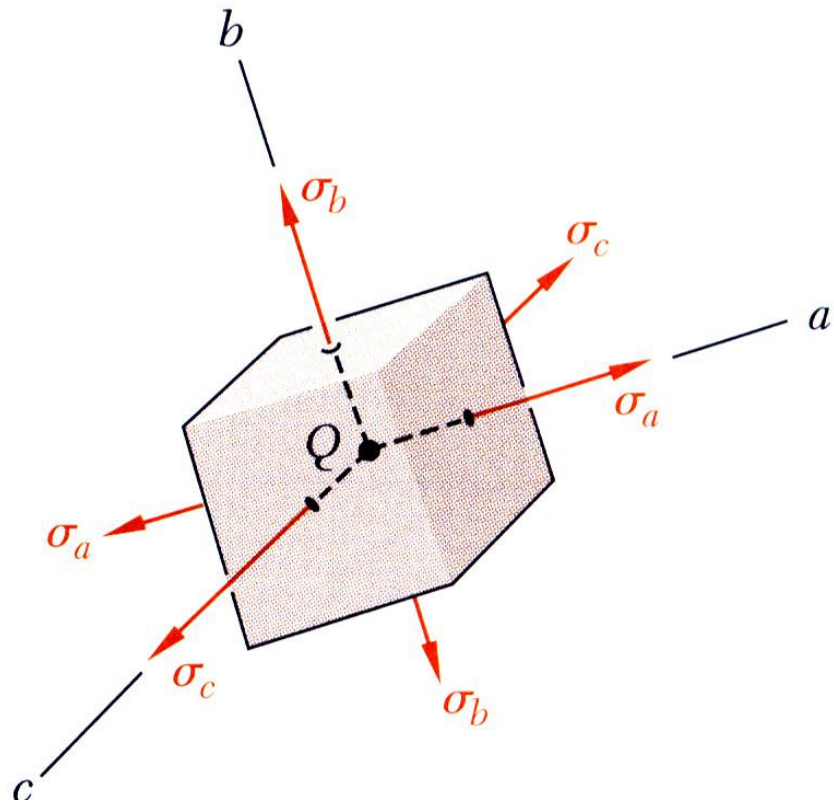
Von Mises criteria

(Richard Von Mises)

Transformations of Stress and Strain

□ Yield Criteria for Ductile Materials Under Plane Stress

Maximum Distortion Energy Criterion



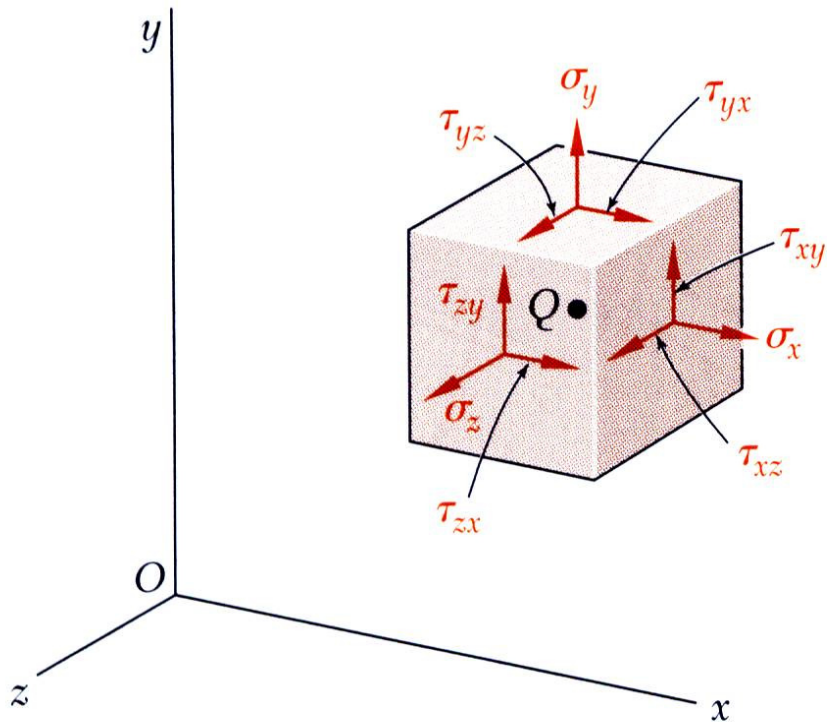
Von Mises criteria for
principle stresses in 3D element

$$(\sigma_a - \sigma_b)^2 + (\sigma_a - \sigma_c)^2 + (\sigma_b - \sigma_c)^2 < 2\sigma_Y^2$$

Transformations of Stress and Strain

□ Yield Criteria for Ductile Materials Under Plane Stress

Maximum Distortion Energy Criterion



Von Mises criteria for
the general 3D state of stress

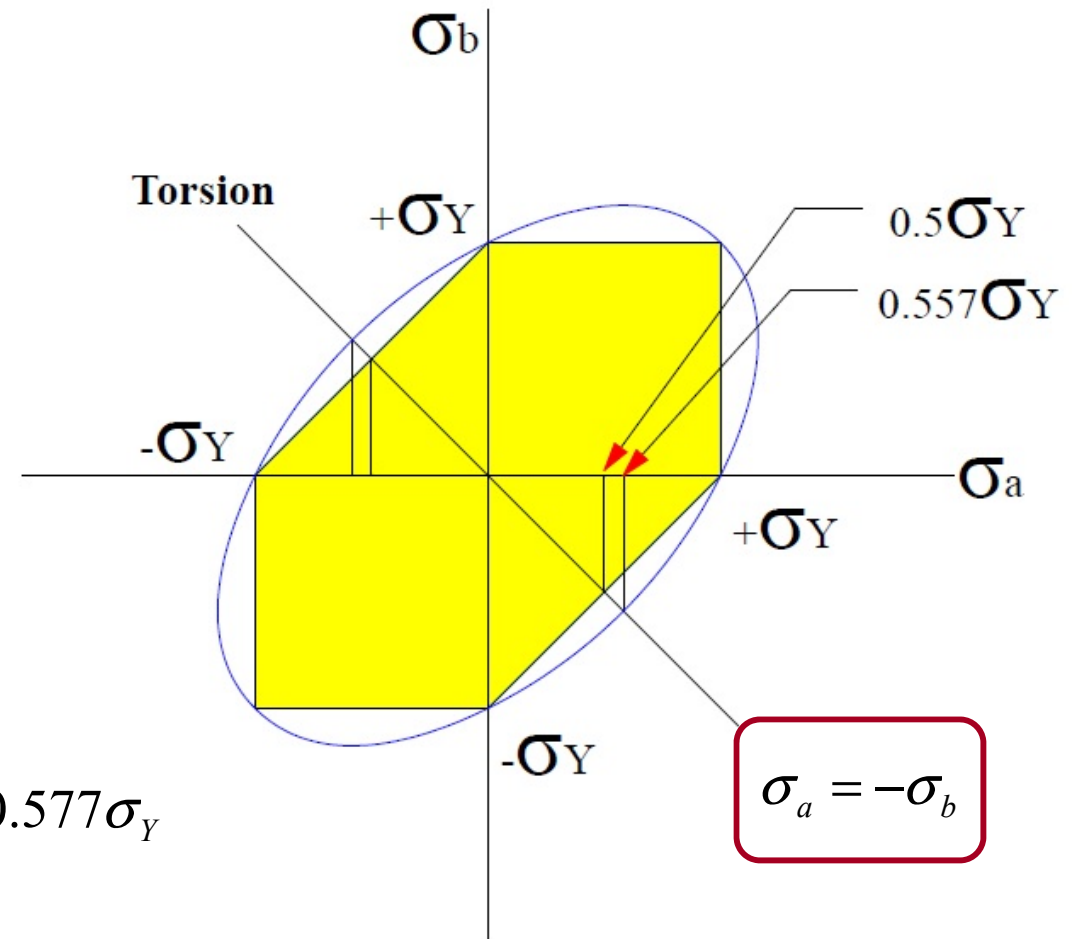
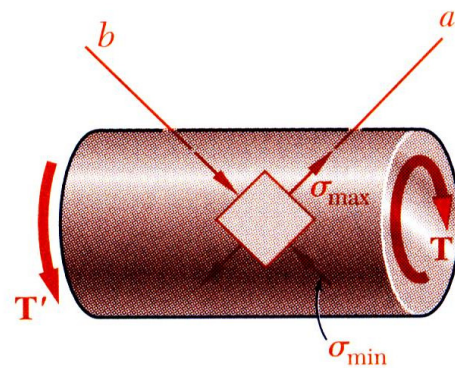
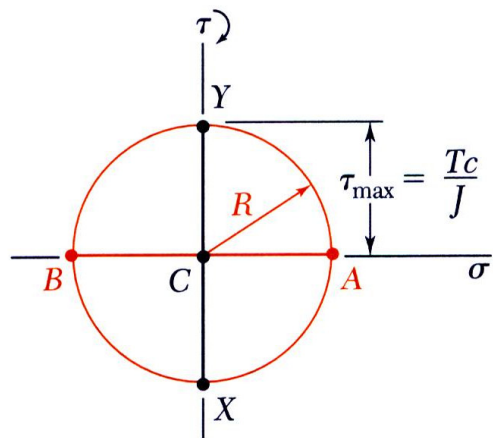
$$(\sigma_x - \sigma_y)^2 + (\sigma_x - \sigma_z)^2 + (\sigma_y - \sigma_z)^2 + 3(\tau_{xy}^2 + \tau_{xz}^2 + \tau_{yz}^2) < 2\sigma_Y^2$$

Transformations of Stress and Strain

□ Yield Criteria for Ductile Materials Under Plane Stress

The Tresca criteria is more **conservative** than the Von Mises criterion

In torsional loading (pure shearing) the Von Mises is more accurate.

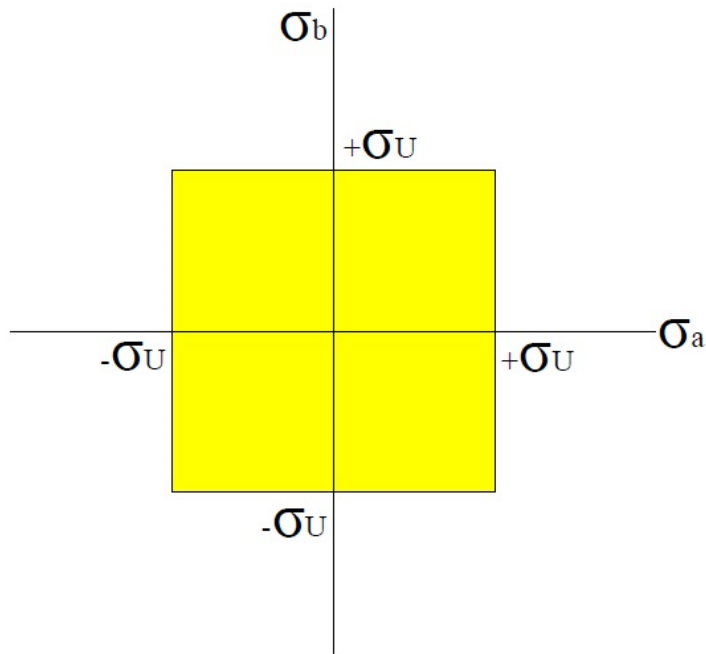


In Practice: $\sigma_a = -\sigma_b = (0.55 \text{ to } 0.60)\sigma_Y \approx 0.577\sigma_Y$

Transformations of Stress and Strain

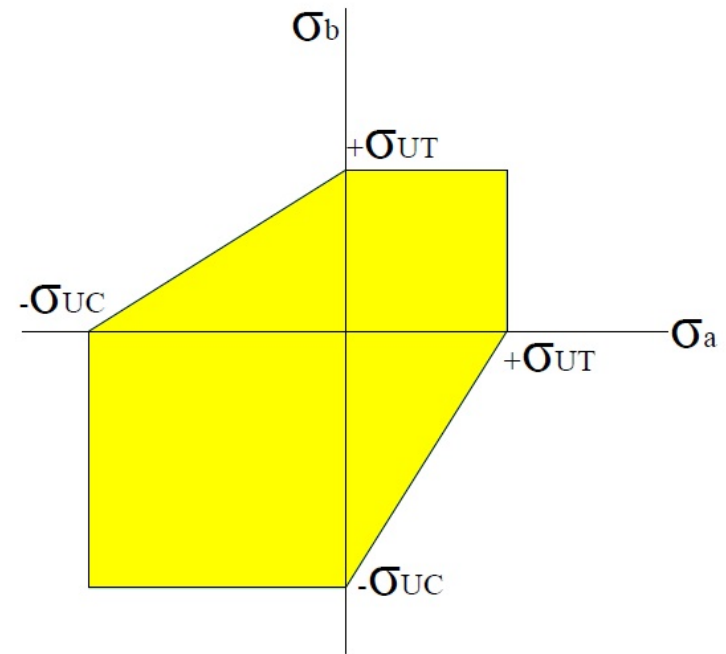
□ Yield Criteria for Brittle Materials Under Plane Stress

Brittle materials fail suddenly through rupture or fracture in a tensile test. The failure condition is characterized by the ultimate strength.



Maximum Normal Stress Criterion
Coulomb's Criterion

σ_U : Ultimate strength in tension and compression



Maximum Normal Stress Criterion
★ *Mohr's Criterion*

σ_{UT} : Ultimate strength in tension

σ_{UC} : Ultimate strength in compression

Transformations of Stress and Strain

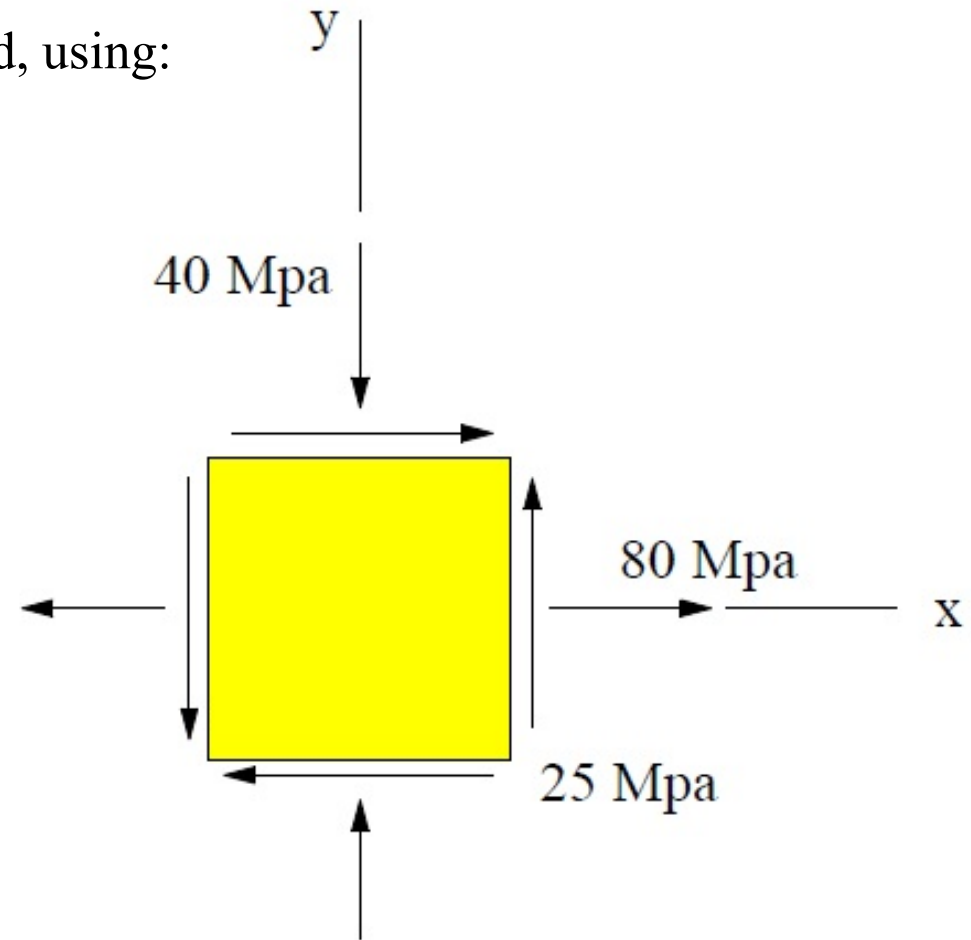
□ Yield Criteria

Example 9

Determine the factor of safety with respect to yield, using:

- (a) The maximum-shearing-stress criterion.
- (b) The maximum-distortion-energy criterion.

$$\sigma_Y = 250 \text{ Mpa}$$

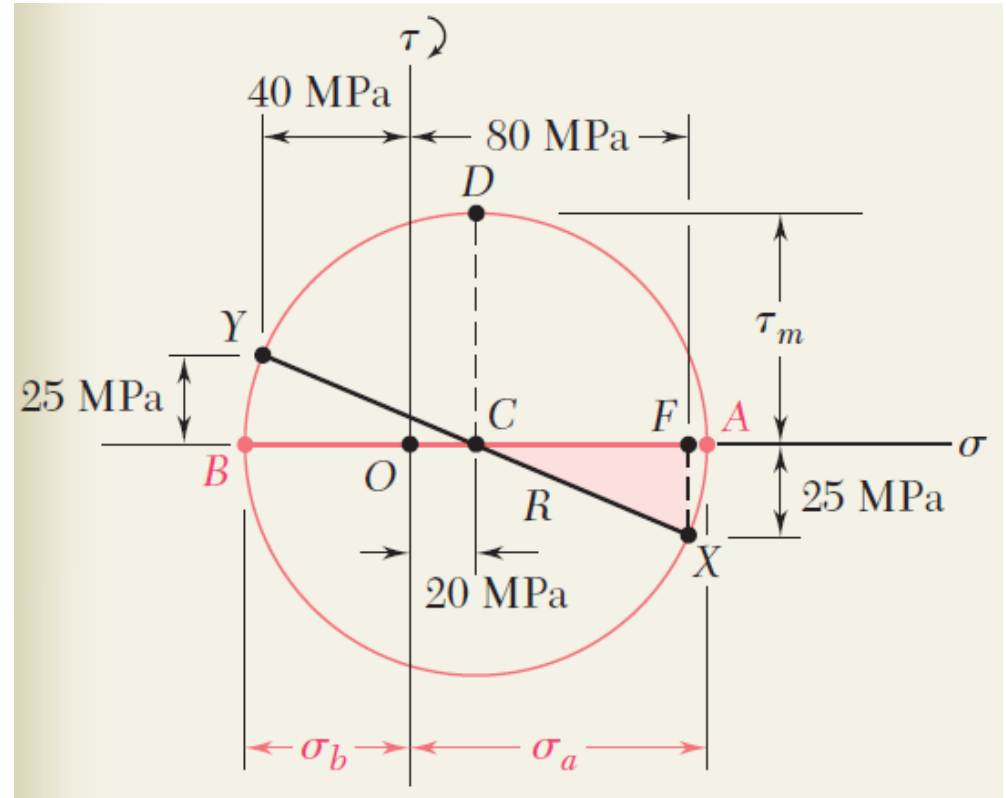


Transformations of Stress and Strain

Example 9

□ Yield Criteria

Construct Mohr Circle



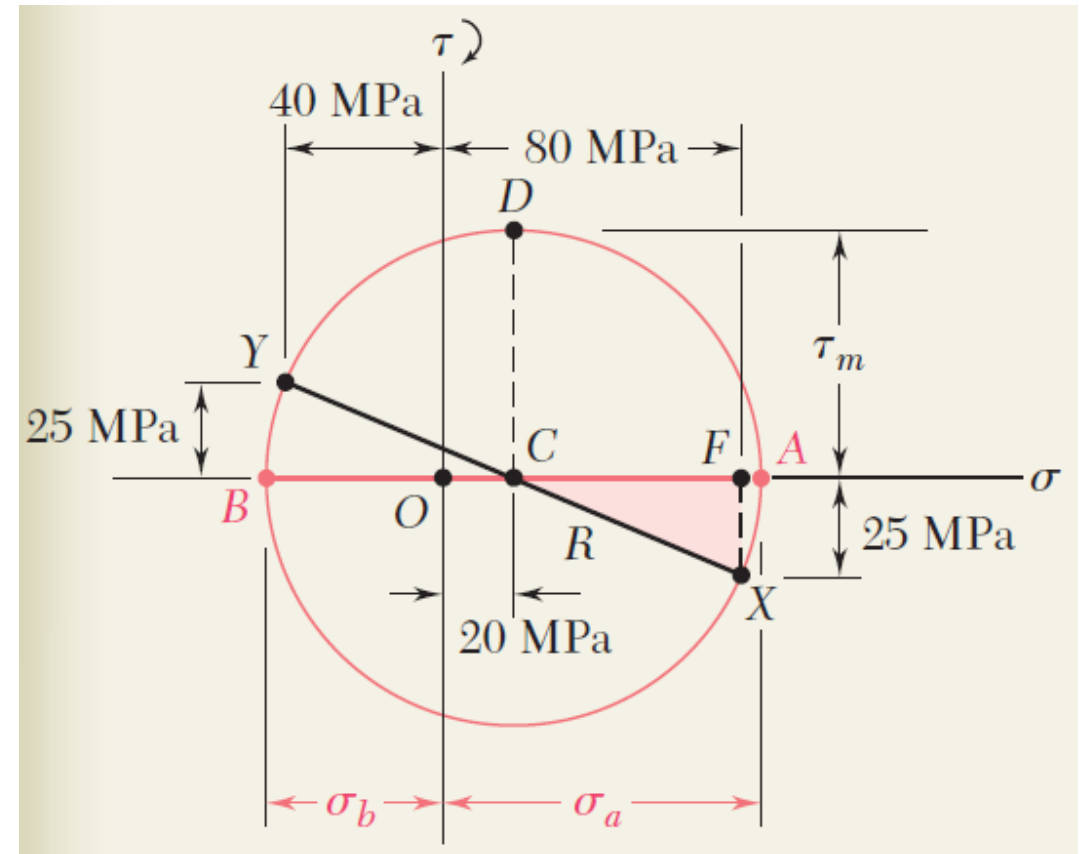
Principle Stress

Transformations of Stress and Strain

□ Yield Criteria

Example 9

(a) The maximum-shearing-stress criterion.

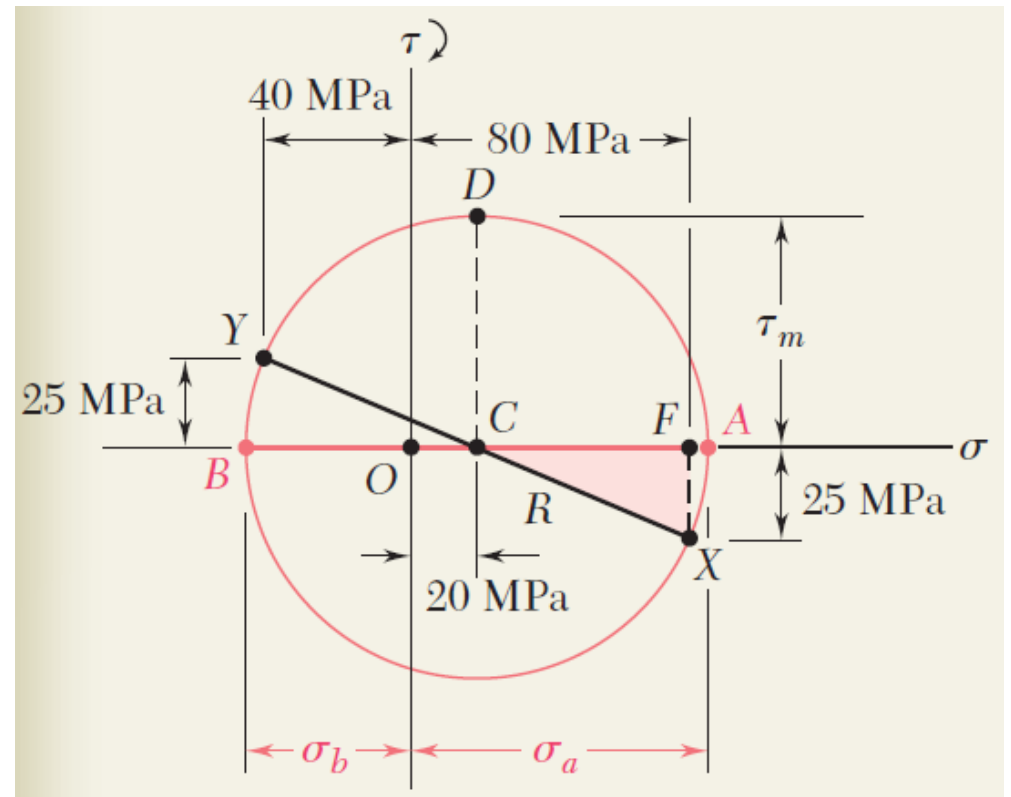


Transformations of Stress and Strain

□ Yield Criteria

Example 9

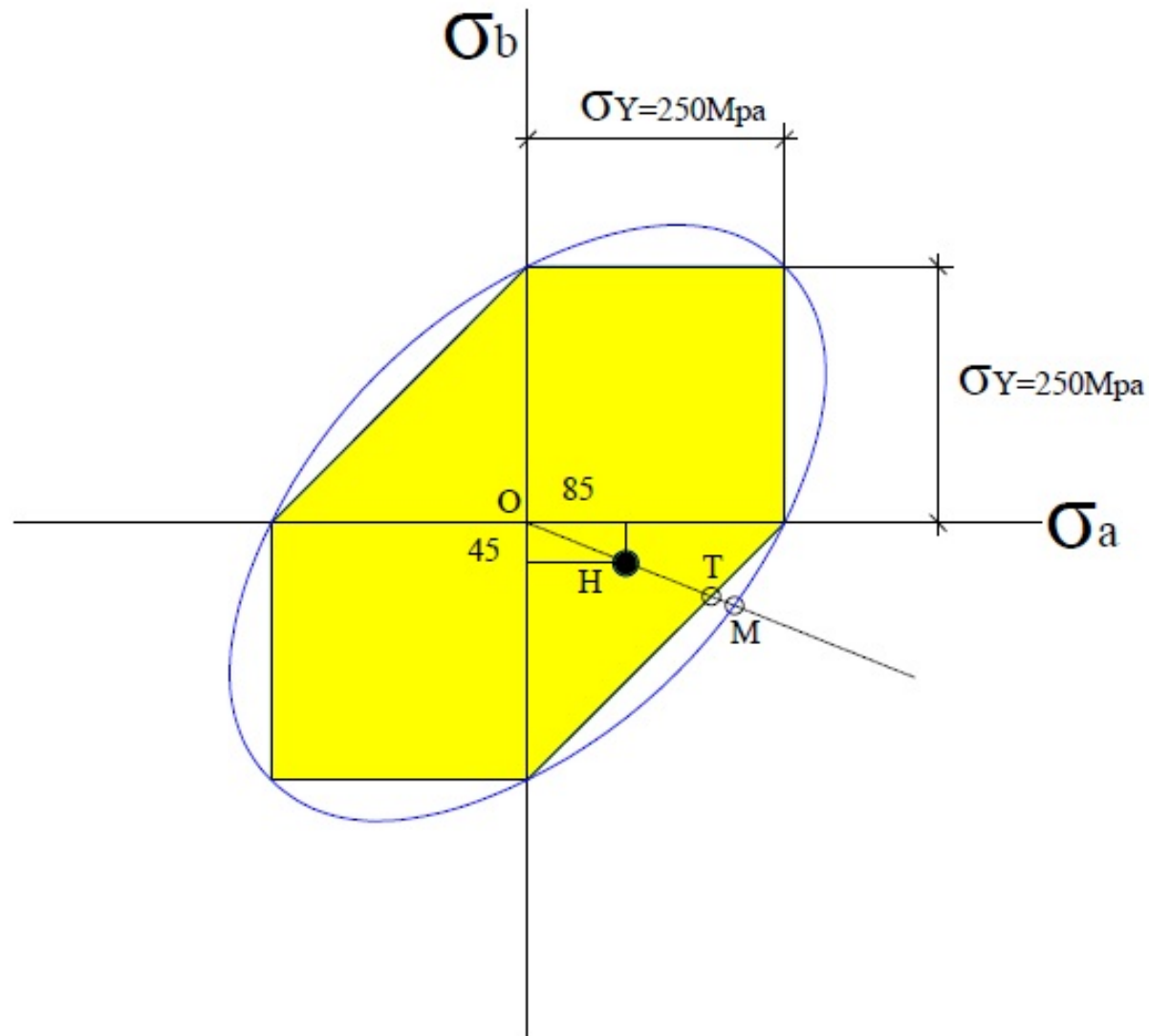
(a) The maximum-distortion-energy criterion.



Transformations of Stress and Strain

□ Yield Criteria

Example 9

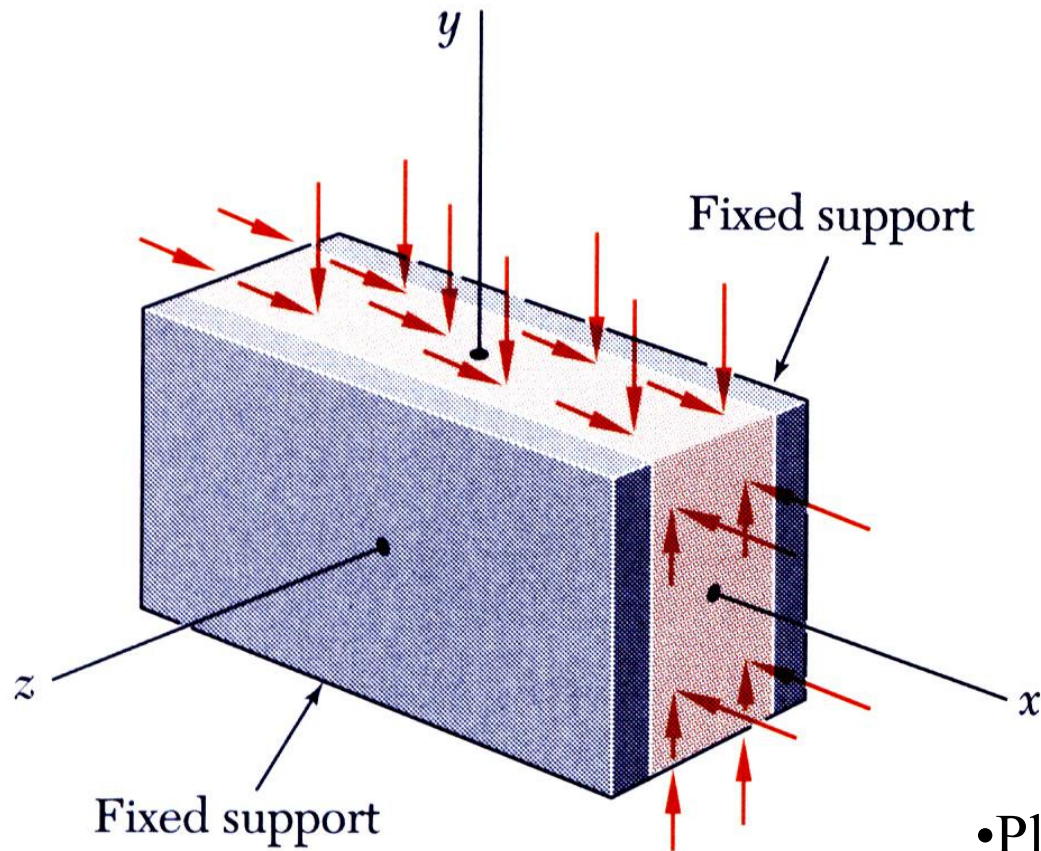


(a):

(b):

Transformations of Stress and Strain

□ Transformation of Plane Strain



Components of Strain

$$\varepsilon_x = \varepsilon_y = \gamma_{xy} \neq 0$$

$$\varepsilon_z = \gamma_{zx} = \gamma_{zy} = 0$$

• *Plane strain* :

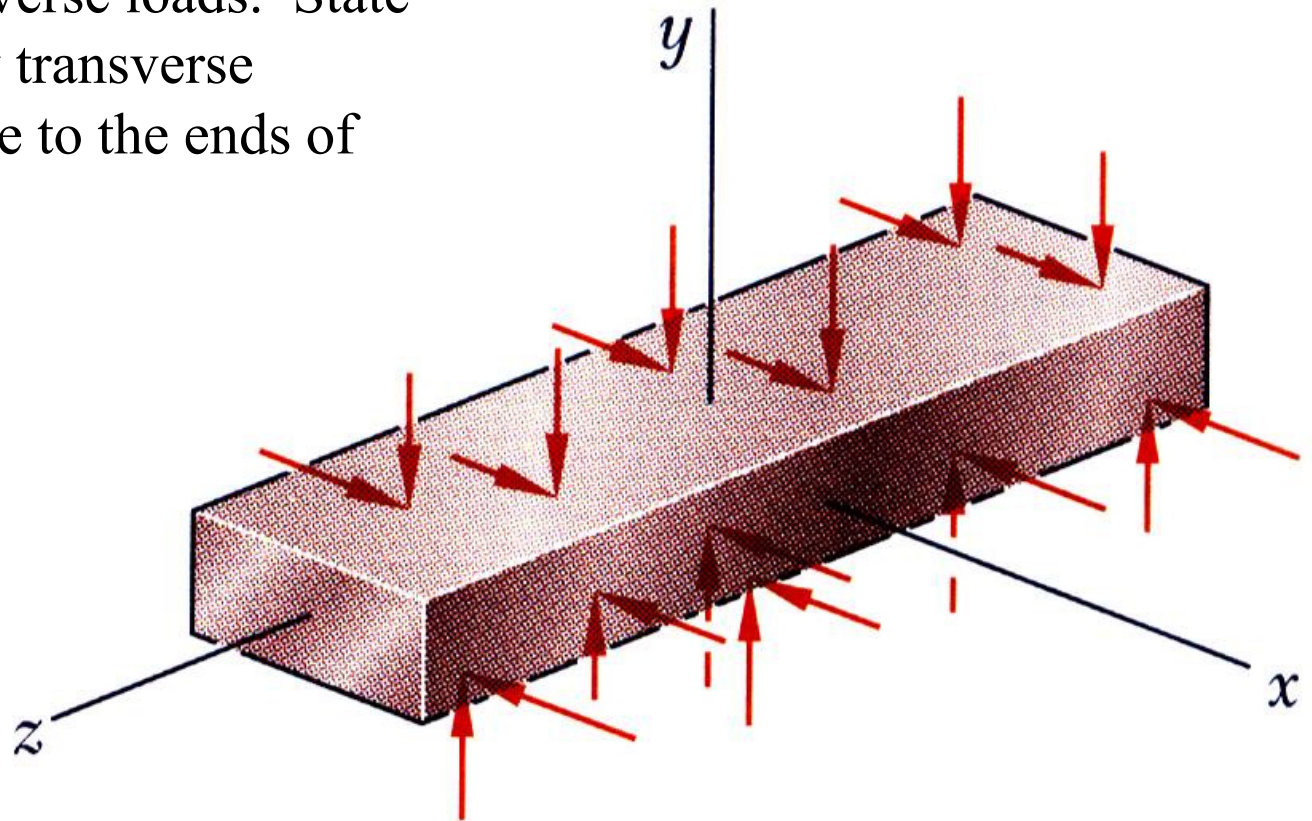
- I. Deformations of the material take place in **parallel planes**.
- II. Deformations of the material are **the same** in each of those planes.

• Plane strain occurs in a plate subjected along its edges to a uniformly distributed load and restrained from expanding or contracting laterally by smooth, rigid and fixed supports

Transformations of Stress and Strain

□ Transformation of Plane Strain

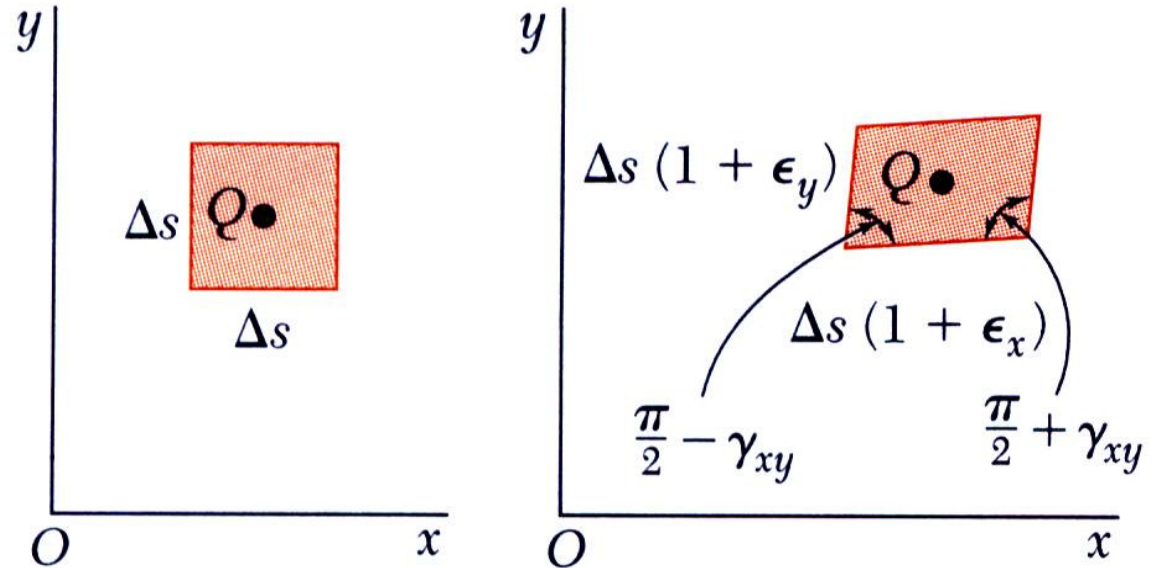
•Example: Consider a long bar subjected to uniformly distributed transverse loads. State of plane stress exists in any transverse section not located too close to the ends of the bar.



Transformations of Stress and Strain

□ Transformation of Plane Strain

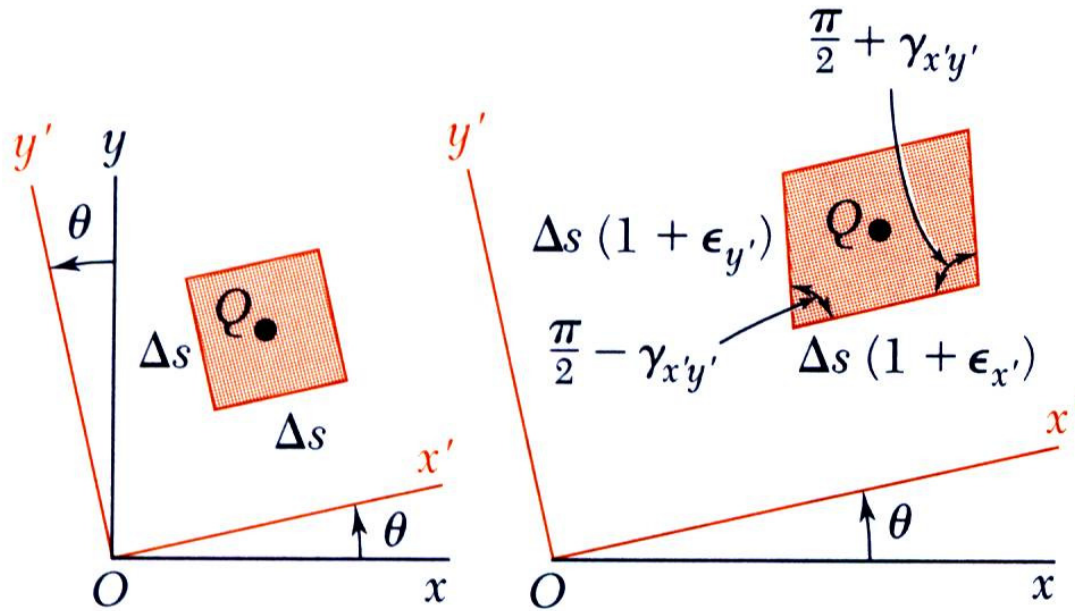
• State of strain at the point Q results in different strain components with respect to the xy reference frames.



$$\epsilon(\theta) = \epsilon_x \cos^2(\theta) + \epsilon_y \sin^2(\theta) + \gamma_{xy} \sin(\theta) \cos(\theta)$$

$$\epsilon_{OB} = \epsilon_{(45)} = \frac{1}{2}(\epsilon_x + \epsilon_y + \gamma_{xy}) \Rightarrow \gamma_{xy} = 2\epsilon_{OB} - (\epsilon_x + \epsilon_y)$$

Transformations of Stress and Strain



□ Transformation of Plane Strain

- Applying the trigonometric relations used for the transformation of stress,

$$\epsilon_{x'} = \frac{\epsilon_x + \epsilon_y}{2} + \frac{\epsilon_x - \epsilon_y}{2} \cos(2\theta) + \frac{\gamma_{xy}}{2} \sin(2\theta)$$

$$\theta \rightarrow \theta + 90 \Rightarrow \epsilon_{y'} = \frac{\epsilon_x + \epsilon_y}{2} - \frac{\epsilon_x - \epsilon_y}{2} \cos(2\theta) - \frac{\gamma_{xy}}{2} \sin(2\theta)$$

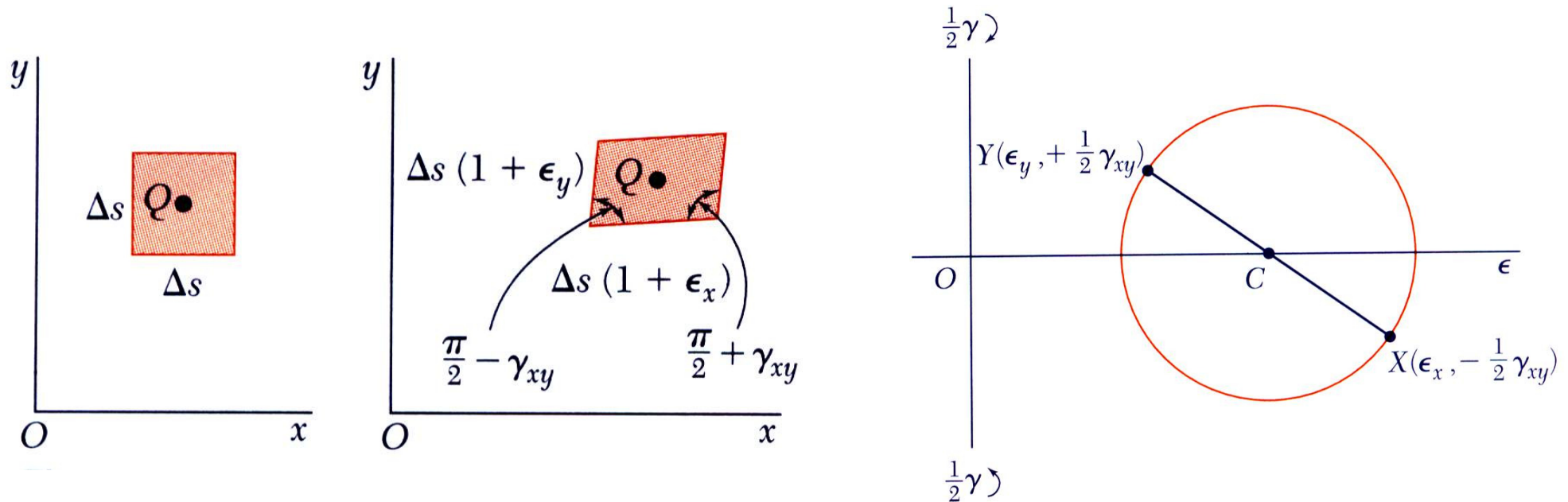
$$\theta \rightarrow \theta + 45 \Rightarrow \epsilon_{OB'} = \frac{\epsilon_x + \epsilon_y}{2} - \frac{\epsilon_x - \epsilon_y}{2} \sin(2\theta) + \frac{\gamma_{xy}}{2} \cos(2\theta)$$

$$\frac{\gamma_{x'y'}}{2} = -\frac{\epsilon_x - \epsilon_y}{2} \sin(2\theta) + \frac{\gamma_{xy}}{2} \cos(2\theta)$$

Transformations of Stress and Strain

□ Mohr's Circle for Plane Strain

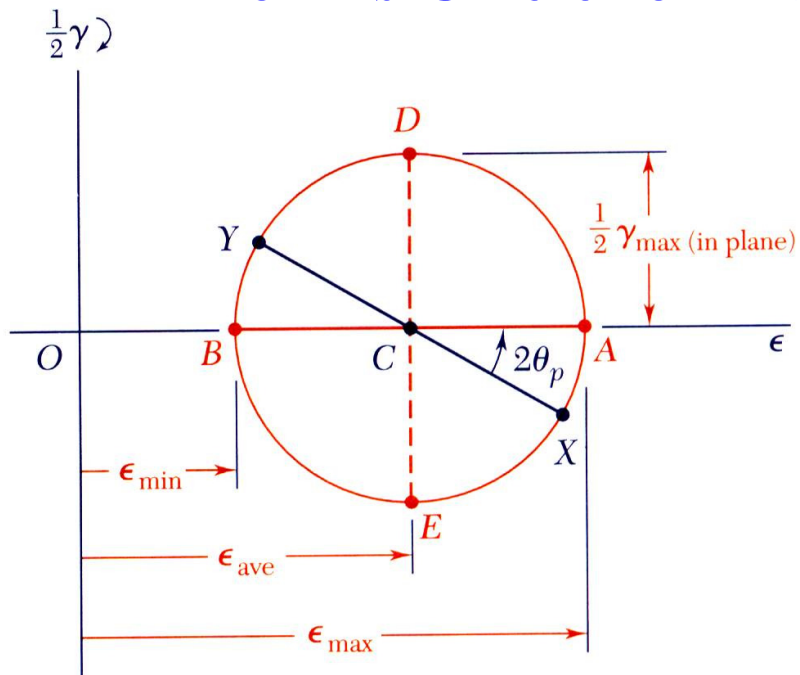
- The equations for the transformation of plane strain are of the same form as the equations for the transformation of plane stress - *Mohr's circle techniques apply*.



If the shear deformation causes a ***given side to rotate clockwise***, the corresponding point on Mohr's circle for plane strain is plotted ***above the horizontal axis***, and if the deformation causes ***the side to rotate counterclockwise***, the corresponding point is plotted ***below the horizontal axis***. We note that this convention matches the convention used to draw Mohr's circle for plane stress.

Transformations of Stress and Strain

□ Mohr's Circle for Plane Strain



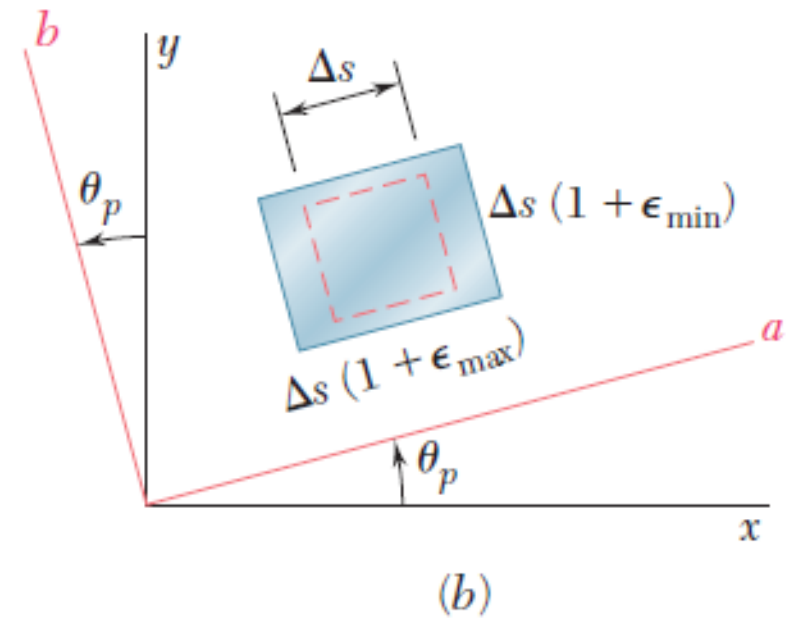
•The center C and radius R ,

$$\epsilon_{ave} = \frac{\epsilon_x + \epsilon_y}{2} \quad R = \sqrt{\left(\frac{\epsilon_x - \epsilon_y}{2}\right)^2 + \left(\frac{\gamma_{xy}}{2}\right)^2}$$

•Principal axes of strain and principal strains,

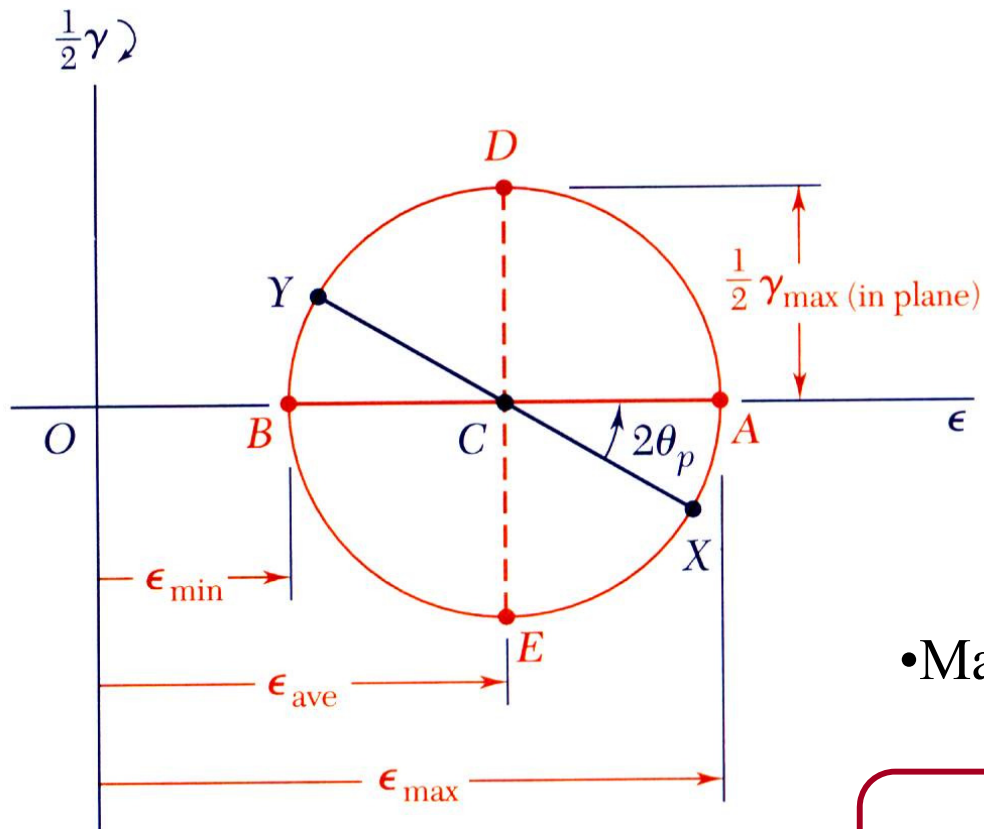
$$\tan 2\theta_p = \frac{\gamma_{xy}}{\epsilon_x - \epsilon_y}$$

$$\epsilon_{max} = \epsilon_{ave} + R \quad \epsilon_{min} = \epsilon_{ave} - R$$



Transformations of Stress and Strain

□ Mohr's Circle for Plane Strain



•The center C and radius R ,

$$\epsilon_{ave} = \frac{\epsilon_x + \epsilon_y}{2} \quad R = \sqrt{\left(\frac{\epsilon_x - \epsilon_y}{2}\right)^2 + \left(\frac{\gamma_{xy}}{2}\right)^2}$$

•Maximum in-plane shearing strain,

$$\gamma_{max} = 2R = \sqrt{(\epsilon_x - \epsilon_y)^2 + \gamma_{xy}^2}$$

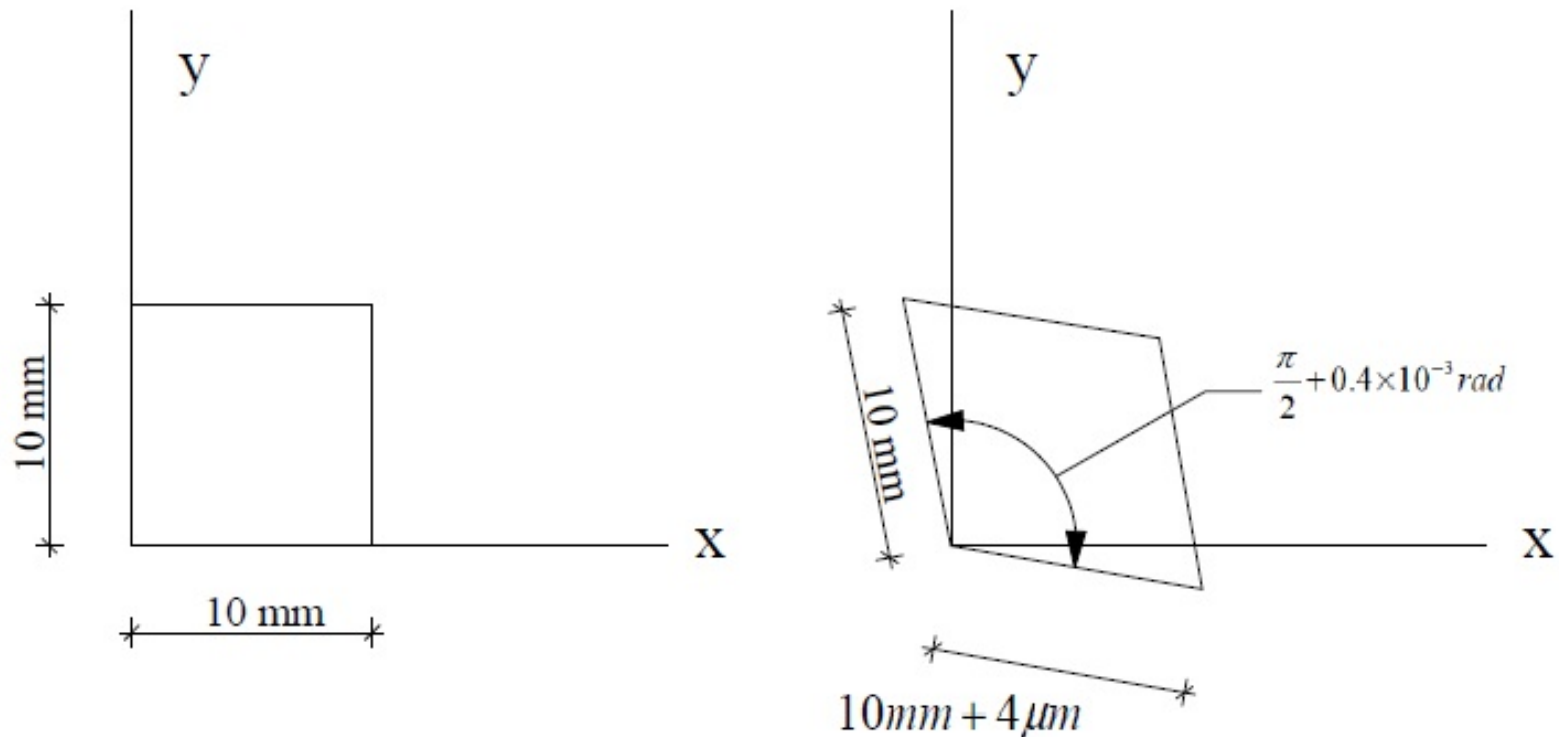
Transformations of Stress and Strain

□ Mohr's Circle for Plane Strain

Example 10

Determine

- (a) The principal axes and principal strains,
- (b) The maximum shearing strain and the corresponding normal strain.



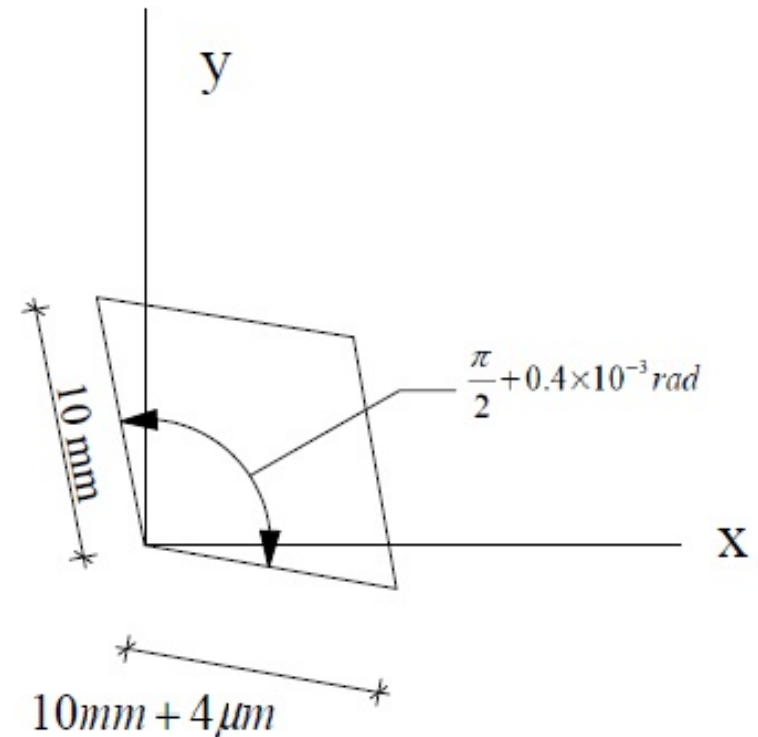
Transformations of Stress and Strain

□ Mohr's Circle for Plane Strain

Example 10

Principal Axes and Principal Strains:

We first determine the coordinates of points X and Y



Since the side of the square associated with ϵ_x rotates clockwise, point X of coordinates ϵ_x and $|\gamma_{xy}/2|$ is plotted above the horizontal axis. Since $\epsilon_y = 0$ and the corresponding side rotates *counterclockwise*, point Y is plotted directly *below* the origin

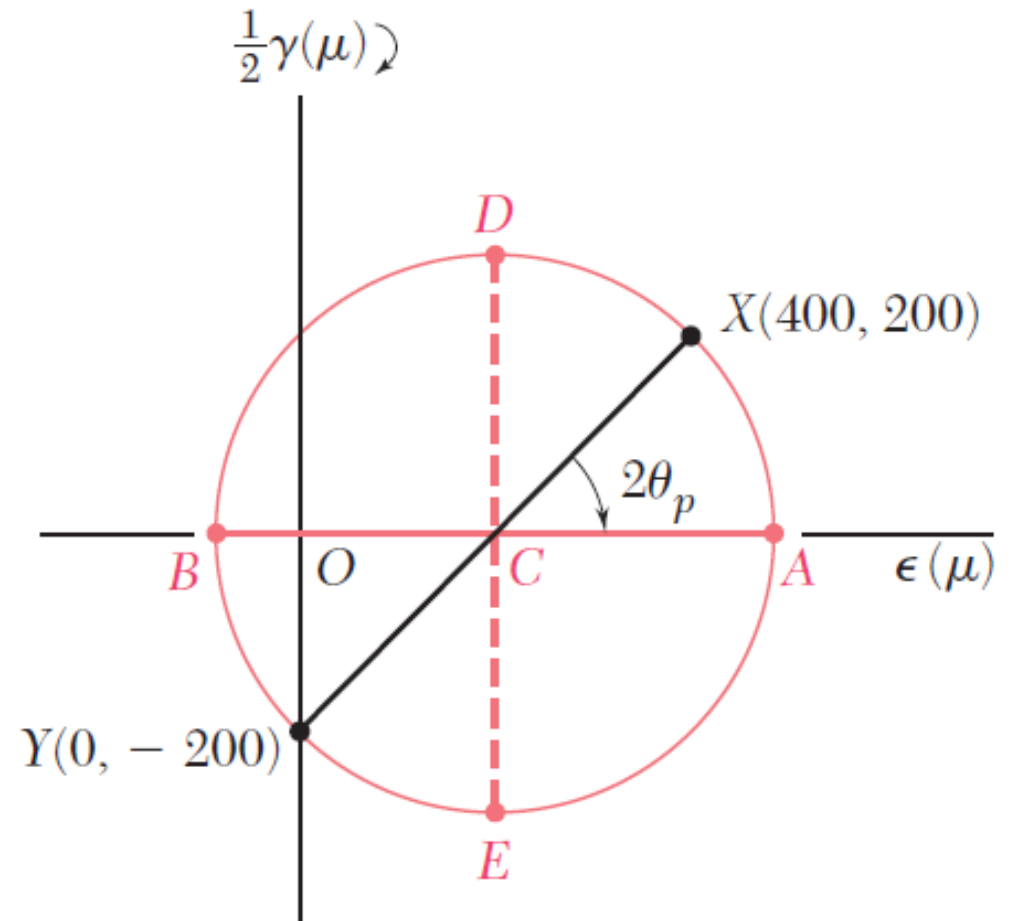
Transformations of Stress and Strain

□ Mohr's Circle for Plane Strain

Example 10

Principal Axes and Principal Strains:

Principle Strain

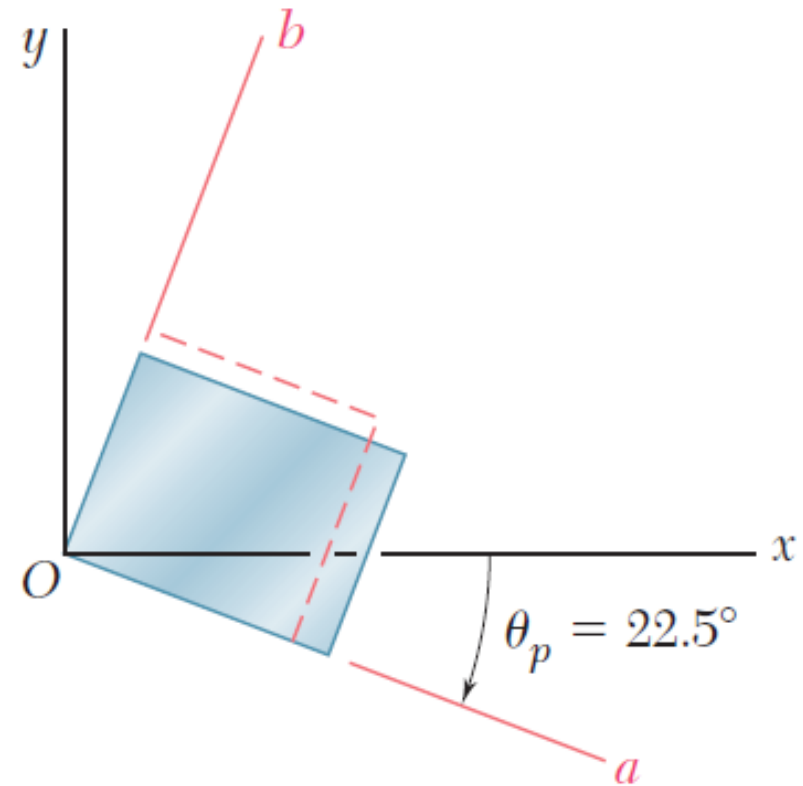
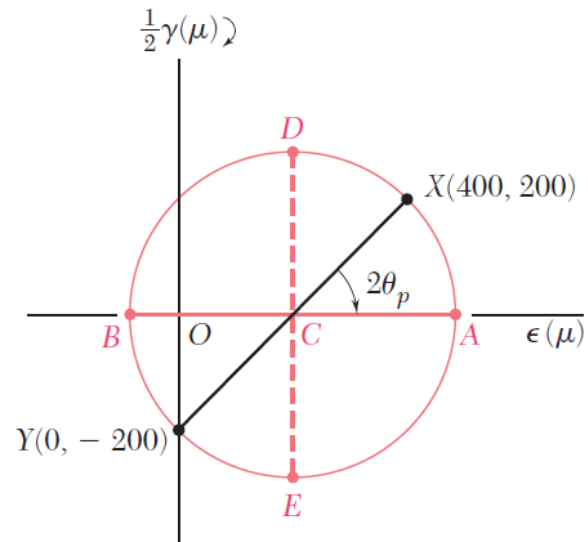


Transformations of Stress and Strain

□ Mohr's Circle for Plane Strain

Example 10

Principal Axes and Principal Strains:



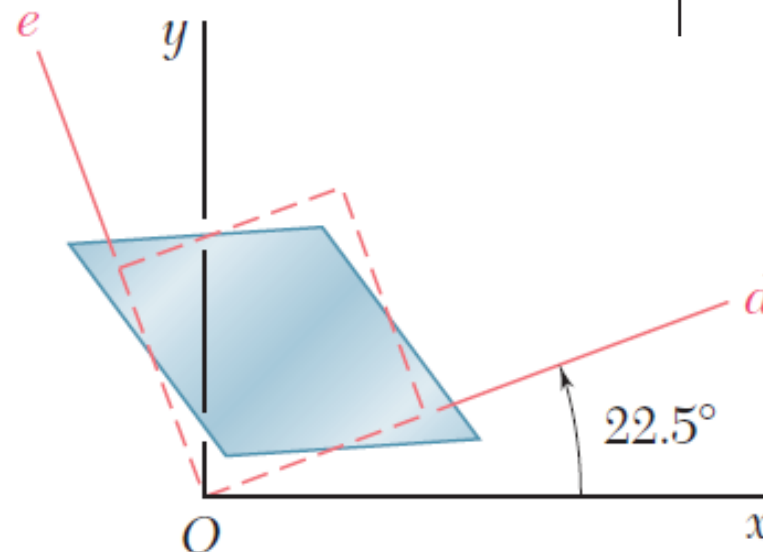
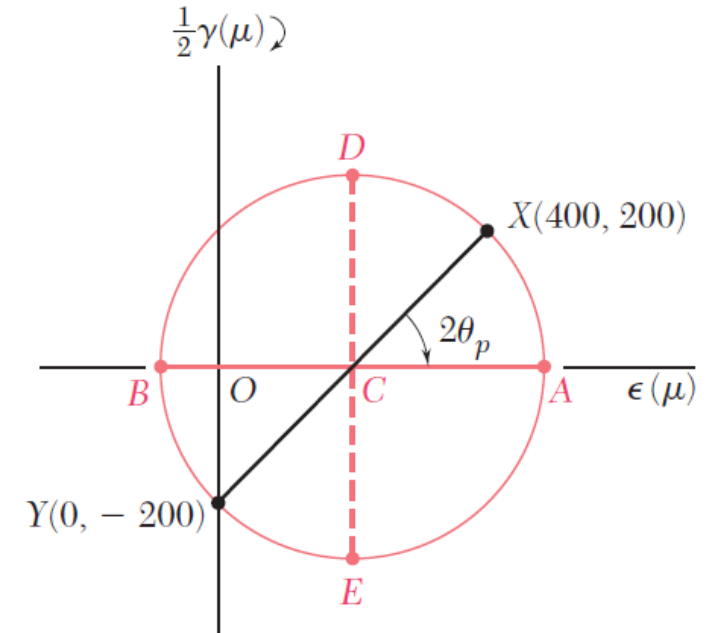
Transformations of Stress and Strain

□ Mohr's Circle for Plane Strain

Example 10

Maximum Shearing Strain

The corresponding normal strains are equal to



Transformations of Stress and Strain

□ Three-Dimensional Analysis of Strain

Generalized Hooke's law

$$E = \frac{\sigma}{\varepsilon}$$

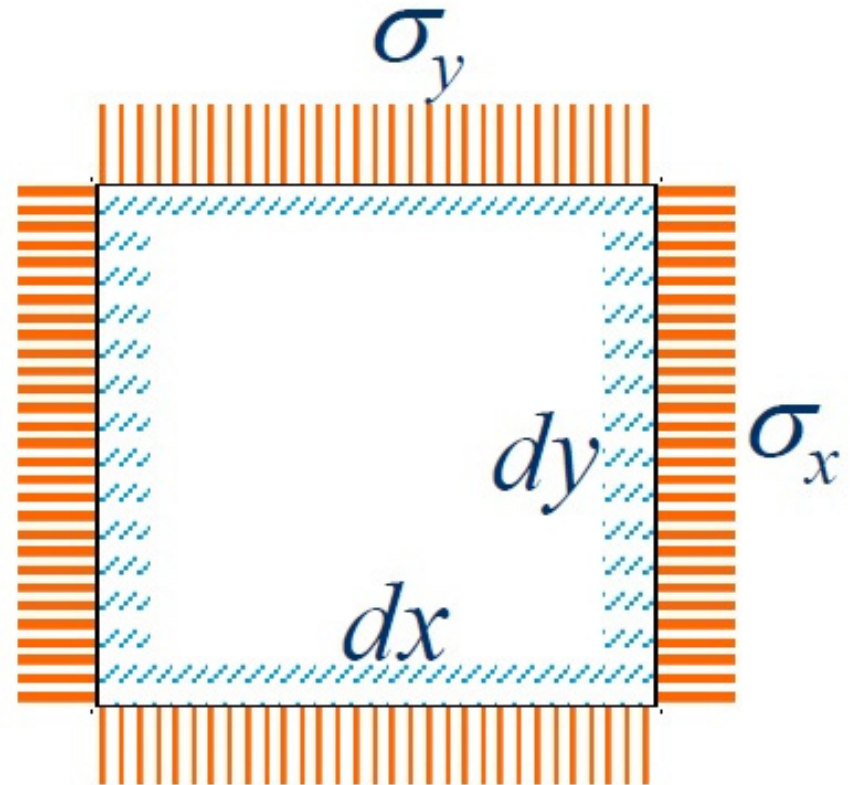
Hooke's law can be extended to include the *biaxial* and *Triaxial* states of stress that often encounter in engineering applications.

Transformations of Stress and Strain

□ Three-Dimensional Analysis of Strain

Generalized Hooke's law

Let's consider the differential element of the material subjected to biaxial state of normal stress

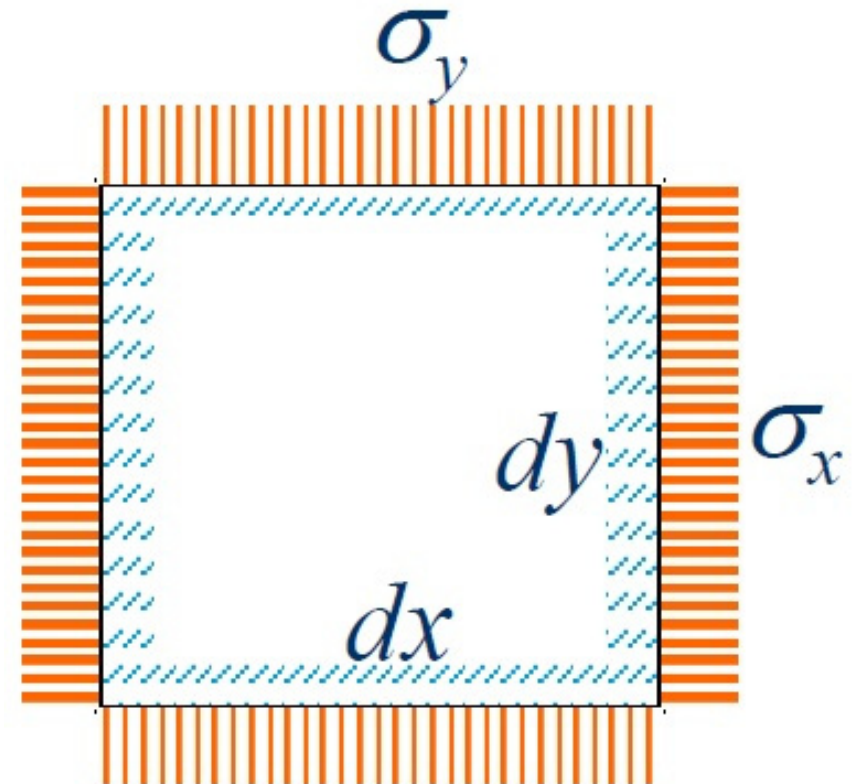


Transformations of Stress and Strain

□ Three-Dimensional Analysis of Strain

Generalized Hooke's law

- Shearing stresses have not been shown in the differential element of because they do not produce changes in the lengths of sides of the element.
- They only produce distortion of the element (angle changes), that can contribute to the angular strain.



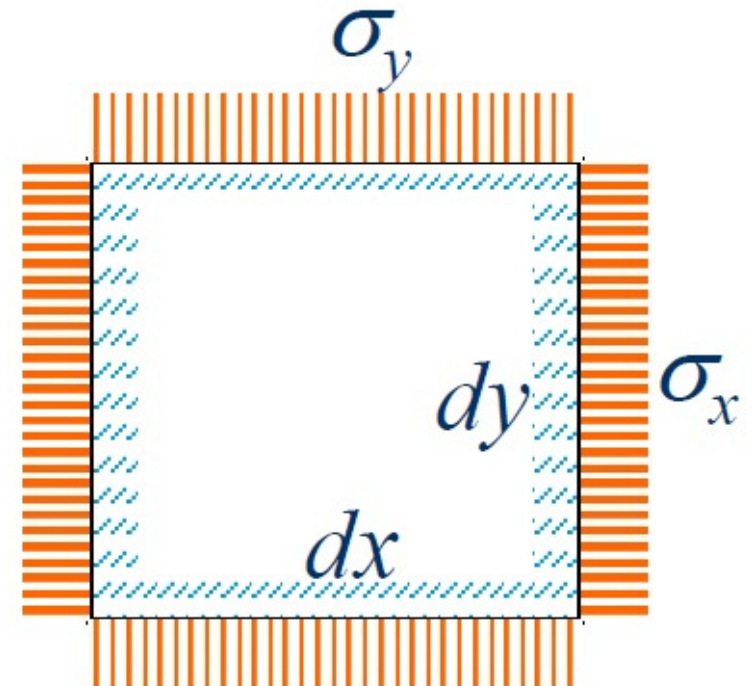
Transformations of Stress and Strain

□ Three-Dimensional Analysis of Strain

Generalized Hooke's law

The principle of superposition.

– The *deformation of that element in the direction* of the normal stresses, for a combined loading, can be determined by computing the deformations resulting from the individual stresses separately and adding the values obtained algebraically.



Transformations of Stress and Strain

□ **Three-Dimensional Analysis of Strain**

Generalized Hooke's law

The principle of superposition.

– When applying the principle of superposition, the following conditions must be satisfied:

- Each effect is *linearly* related to the load that produced it.
- The effect of the first load does not scientifically change the effect of the second load.

Transformations of Stress and Strain

□ Three-Dimensional Analysis of Strain

Generalized Hooke's law

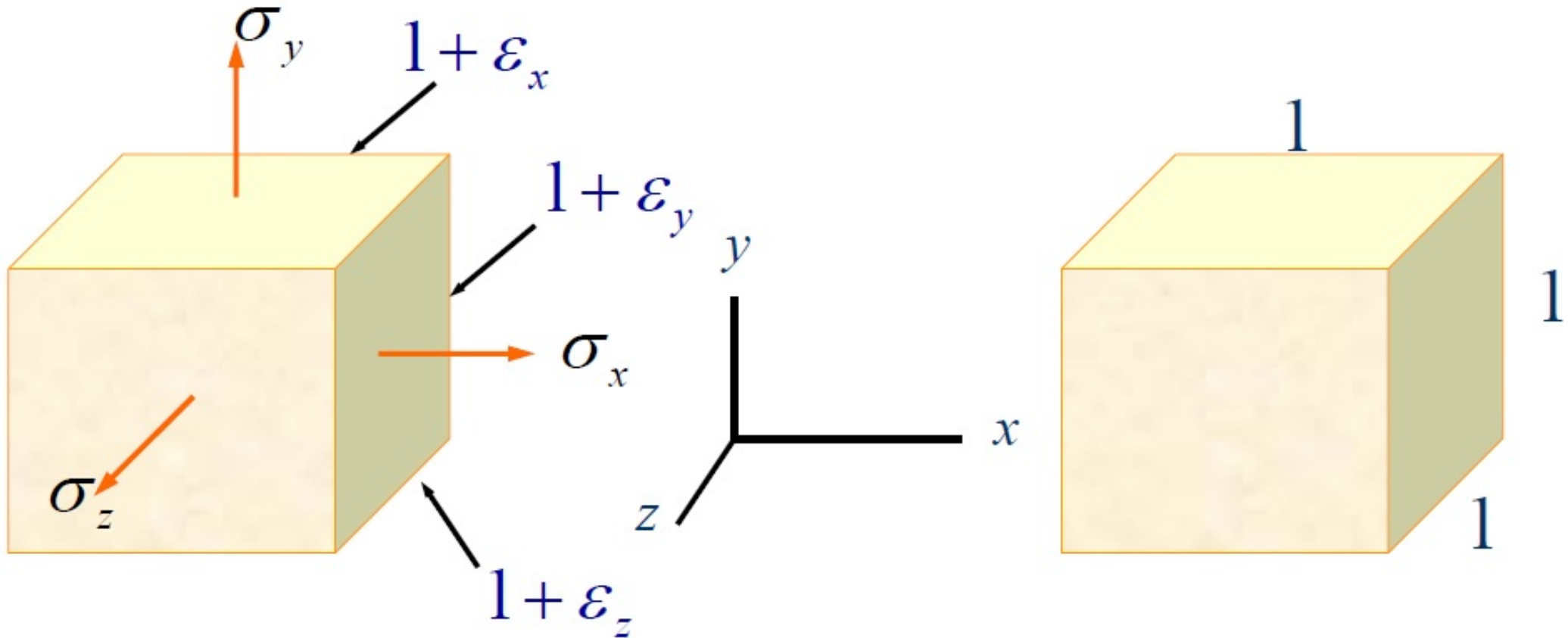
The principle of superposition.

- The first condition is satisfied if the stresses *do not exceed the proportional limit of the material.*
- The second condition is also satisfied if the *deformations small* so that the small changes in the areas of the faces of the element do not produce significant changes in the stresses.

Transformations of Stress and Strain

□ Three-Dimensional Analysis of Strain

Generalized Hooke's law



Transformations of Stress and Strain

□ Three-Dimensional Analysis of Strain

Generalized Hooke's law

Stress	X: Direction	Y: Direction	Z: Direction
σ_x	$\epsilon_x = \frac{\sigma_x}{E}$	$\epsilon_y = -\nu \frac{\sigma_x}{E}$	$\epsilon_z = -\nu \frac{\sigma_x}{E}$
σ_y	$\epsilon_x = -\nu \frac{\sigma_y}{E}$	$\epsilon_y = \frac{\sigma_y}{E}$	$\epsilon_z = -\nu \frac{\sigma_y}{E}$
σ_z	$\epsilon_x = -\nu \frac{\sigma_z}{E}$	$\epsilon_y = -\nu \frac{\sigma_z}{E}$	$\epsilon_z = \frac{\sigma_z}{E}$

Transformations of Stress and Strain

□ Three-Dimensional Analysis of Strain

General State of Strain

$$\varepsilon_x = \frac{1}{E} [\sigma_x - \nu(\sigma_y + \sigma_z)]$$

$$\varepsilon_y = \frac{1}{E} [\sigma_y - \nu(\sigma_x + \sigma_z)]$$

$$\varepsilon_z = \frac{1}{E} [\sigma_z - \nu(\sigma_x + \sigma_y)]$$

Transformations of Stress and Strain

□ Three-Dimensional Analysis of Strain

General State of Stress

$$\sigma_x = \frac{E}{(1+\nu)(1-2\nu)} \left[(1-\nu)\epsilon_x + \nu(\epsilon_y + \epsilon_z) \right]$$

$$\sigma_y = \frac{E}{(1+\nu)(1-2\nu)} \left[(1-\nu)\epsilon_y + \nu(\epsilon_x + \epsilon_z) \right]$$

$$\sigma_z = \frac{E}{(1+\nu)(1-2\nu)} \left[(1-\nu)\epsilon_z + \nu(\epsilon_x + \epsilon_y) \right]$$

Transformations of Stress and Strain

□ Three-Dimensional Analysis of Strain

Plane State of Stress

$$\sigma_z = 0 \Rightarrow \frac{E}{(1+\nu)(1-2\nu)} [(1-\nu)\varepsilon_z + \nu(\varepsilon_x + \varepsilon_z)] = 0 \Rightarrow$$

$$(1-\nu)\varepsilon_z + \nu(\varepsilon_x + \varepsilon_z) = 0 \Rightarrow \varepsilon_z = \frac{-\nu}{1-\nu} (\varepsilon_x + \varepsilon_y) \Rightarrow$$

$$\sigma_x = \frac{E}{1-\nu^2} [\varepsilon_x + \nu\varepsilon_y]$$

$$\sigma_y = \frac{E}{1-\nu^2} [\varepsilon_y + \nu\varepsilon_x]$$

Transformations of Stress and Strain

□ Three-Dimensional Analysis of Strain

Generalized Hooke's Law for Shearing Stress and Strain in Isotropic Materials

$$G = \frac{E}{2(1+\nu)}$$

$$\tau_{xy} = G\gamma_{xy} = \frac{E}{2(1+\nu)}\gamma_{xy}$$

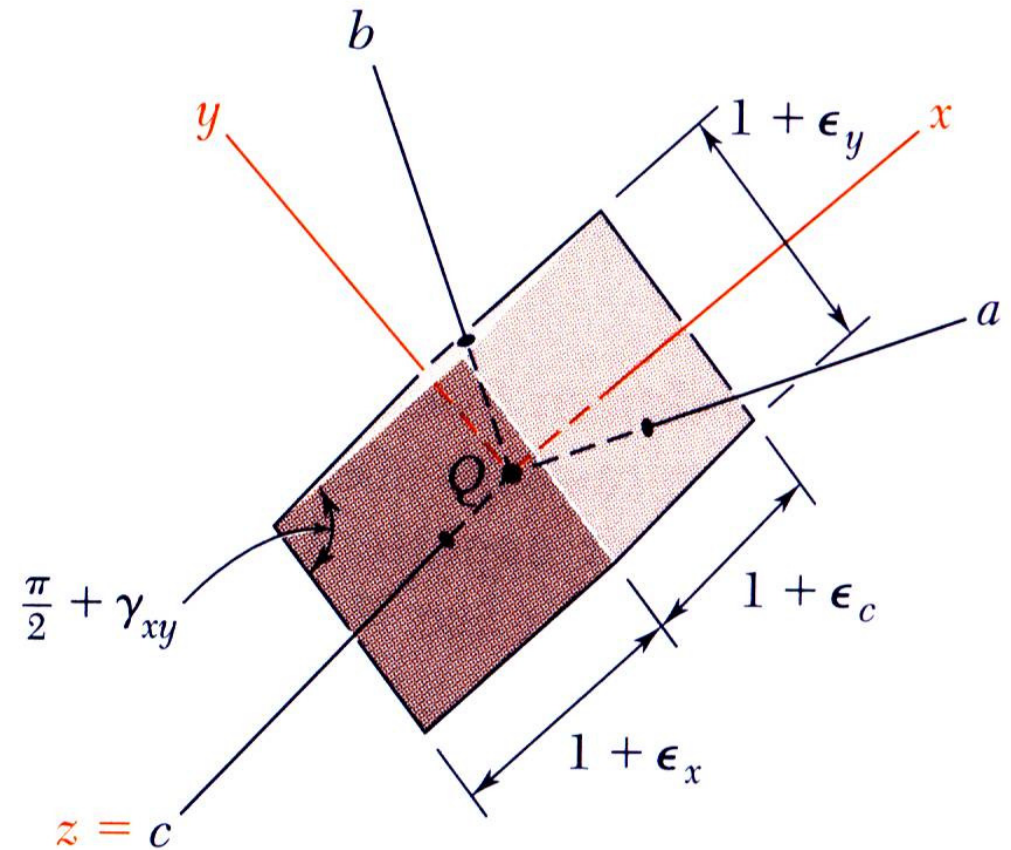
$$\tau_{yz} = G\gamma_{yz} = \frac{E}{2(1+\nu)}\gamma_{yz}$$

$$\tau_{xz} = G\gamma_{xz} = \frac{E}{2(1+\nu)}\gamma_{xz}$$

Transformations of Stress and Strain

□ Three-Dimensional Analysis of Strain

- Three principal axes exist such that the perpendicular element faces are free of shearing stresses.
- By Hooke's Law, it follows that the shearing strains are zero at the principal planes of strain.

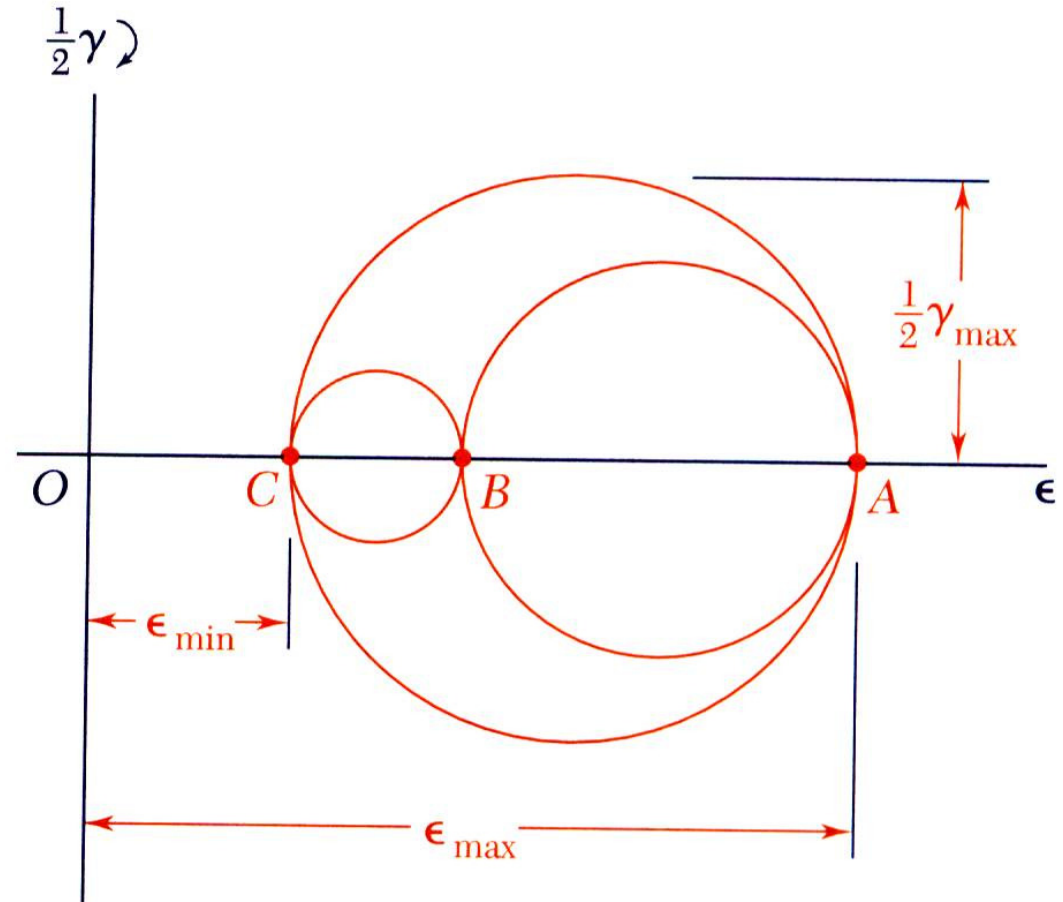


Transformations of Stress and Strain

□ Three-Dimensional Analysis of Strain

Mohr circle

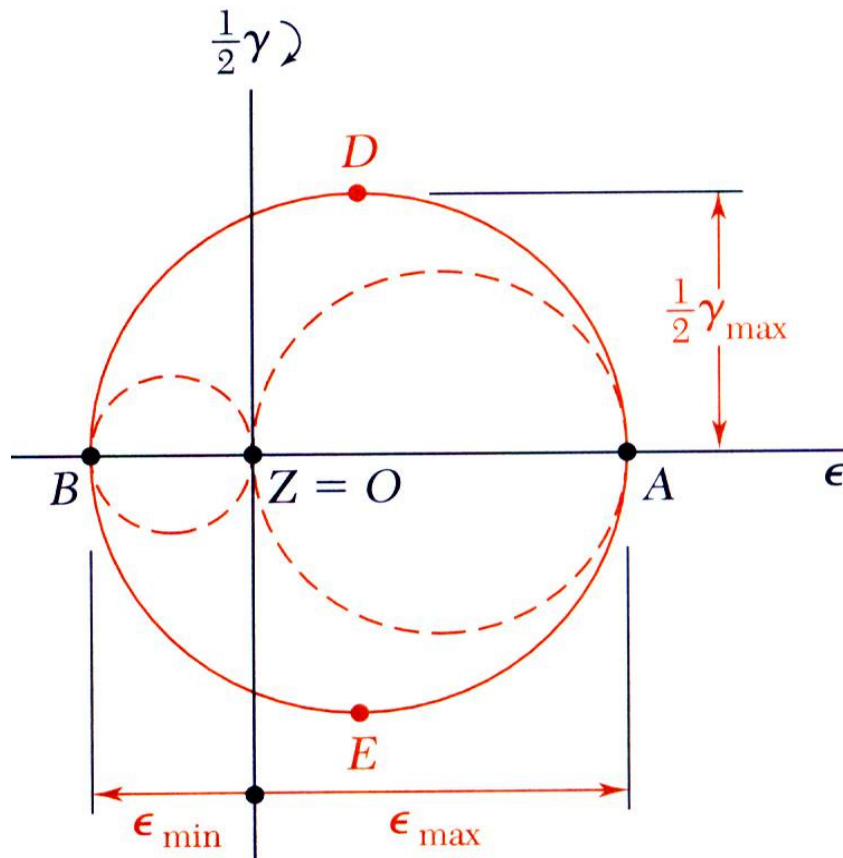
Rotation about the principal axes may be represented by Mohr's circles.



Transformations of Stress and Strain

□ Three-Dimensional Analysis of Strain

Mohr circle

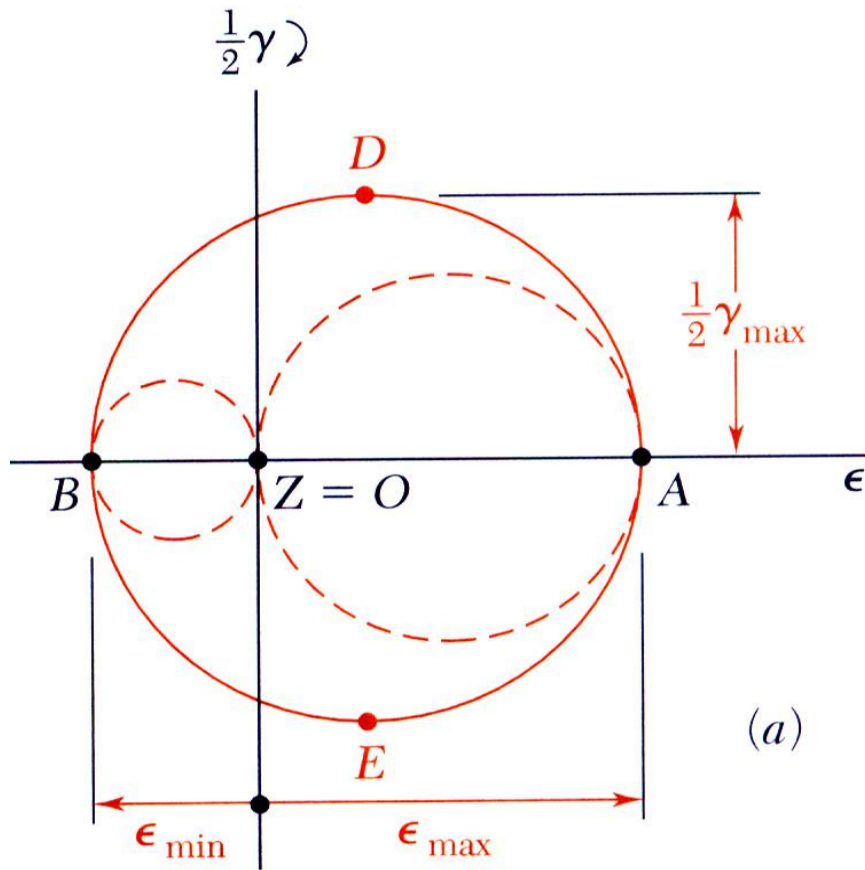


- For the case of plane strain where the x and y axes are in the plane of strain,
 - The z axis is also a principal axis
 - The corresponding principal normal strain is represented by the point $Z = 0$ or the origin.

Transformations of Stress and Strain

□ Three-Dimensional Analysis of Strain

Mohr circle

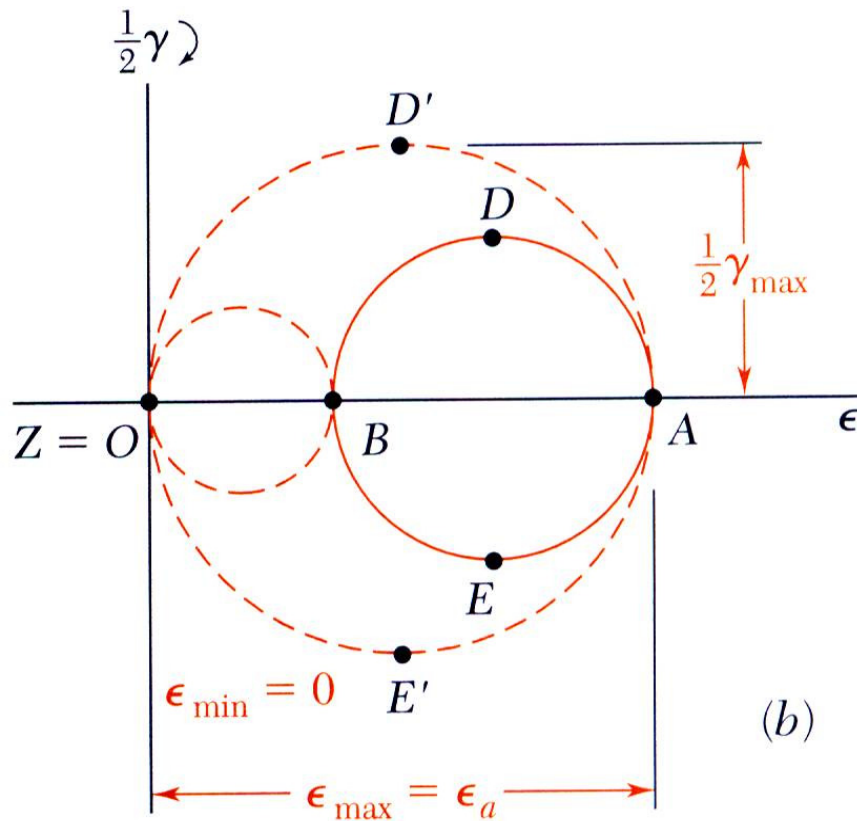


- If the points A and B lie on opposite sides of the origin, the maximum shearing strain is the maximum *in-plane shearing strain*, D and E .

Transformations of Stress and Strain

□ Three-Dimensional Analysis of Strain

Mohr circle



•If the points A and B lie on the same side of the origin, the maximum shearing strain is ***out of the plane of strain*** and is represented by the points D' and E' .

Transformations of Stress and Strain

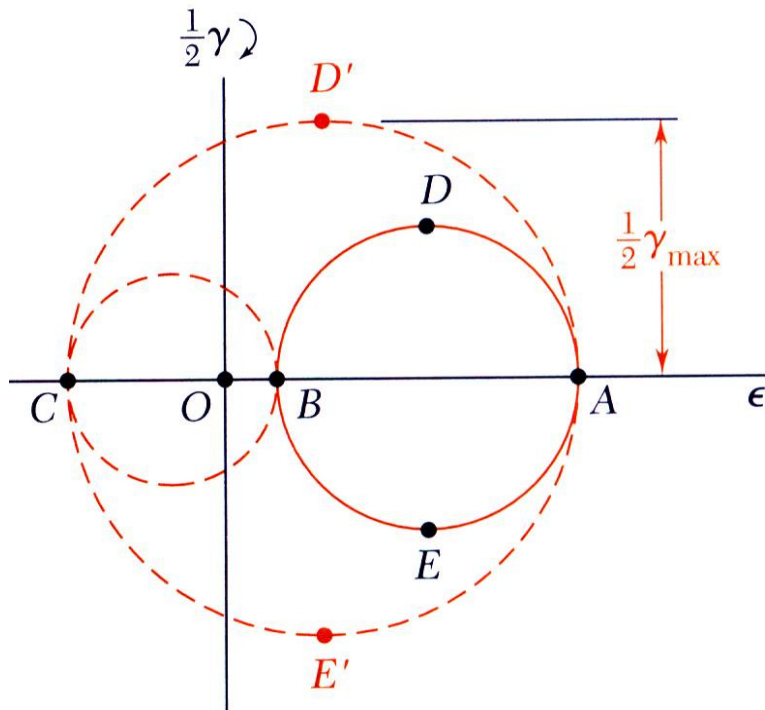
□ Three-Dimensional Analysis of Strain

Mohr circle

- Consider the case of plane stress,

$$\sigma_x = \sigma_a \quad \sigma_y = \sigma_b \quad \sigma_z = 0$$

- Corresponding normal strains,



- Strain perpendicular to the plane of stress is not zero.

$$\varepsilon_a = \frac{\sigma_a}{E} - \frac{\nu\sigma_b}{E}$$

$$\varepsilon_b = -\frac{\nu\sigma_a}{E} + \frac{\sigma_b}{E}$$

$$\varepsilon_c = -\frac{\nu}{E}(\sigma_a + \sigma_b) = -\frac{\nu}{1-\nu}(\varepsilon_a + \varepsilon_b)$$

Transformations of Stress and Strain

□ Three-Dimensional Analysis of Strain

Example 11

At a point on the surface of a structural steel machine part subjected to a biaxial state of stress, the measured strains are as follows:

$$\varepsilon_x = +750 \mu m / m$$

$$\varepsilon_y = +350 \mu m / m$$

$$\gamma_{xy} = -560 \mu rad$$

$$E = 200 Gpa$$

$$G = 76 Gpa$$

Determine the Normal and shear stresses at the point.

Transformations of Stress and Strain

□ Three-Dimensional Analysis of Strain

Example 11

Transformations of Stress and Strain

□ Three-Dimensional Analysis of Strain

Example 12

Determine the state of strain that corresponds to the following state of stress at a point in a steel machine part.

$$\sigma_x = 15,000 \text{ psi} \quad \tau_{xy} = 5500 \text{ psi}$$

$$\sigma_y = 5000 \text{ psi} \quad \tau_{yz} = 4750 \text{ psi}$$

$$\sigma_z = 7500 \text{ psi} \quad \tau_{zx} = 3200 \text{ psi}$$

$$E = 30,000 \text{ ksi}$$

$$\nu = 0.30$$

Transformations of Stress and Strain

□ Three-Dimensional Analysis of Strain

Example 12

Transformations of Stress and Strain

□ Three-Dimensional Analysis of Strain

Example 12

Transformations of Stress and Strain

□ Three-Dimensional Analysis of Strain

Example 13

The principal strains on the free surface are

$$\varepsilon_a = 400 \times 10^{-6}$$

$$\varepsilon_b = -50 \times 10^{-6}$$

$$\nu = 0.30$$

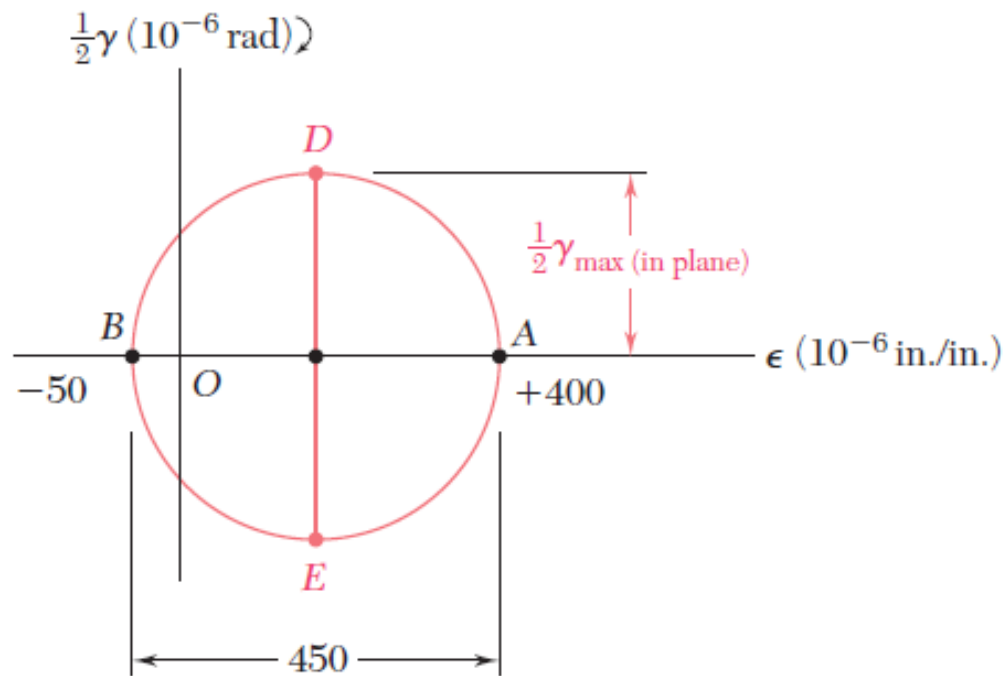
Determine:

- (a) the maximum in-plane shearing strain,
- (b) the true value of the maximum shearing strain near the surface of the component.

Transformations of Stress and Strain

□ Three-Dimensional Analysis of Strain

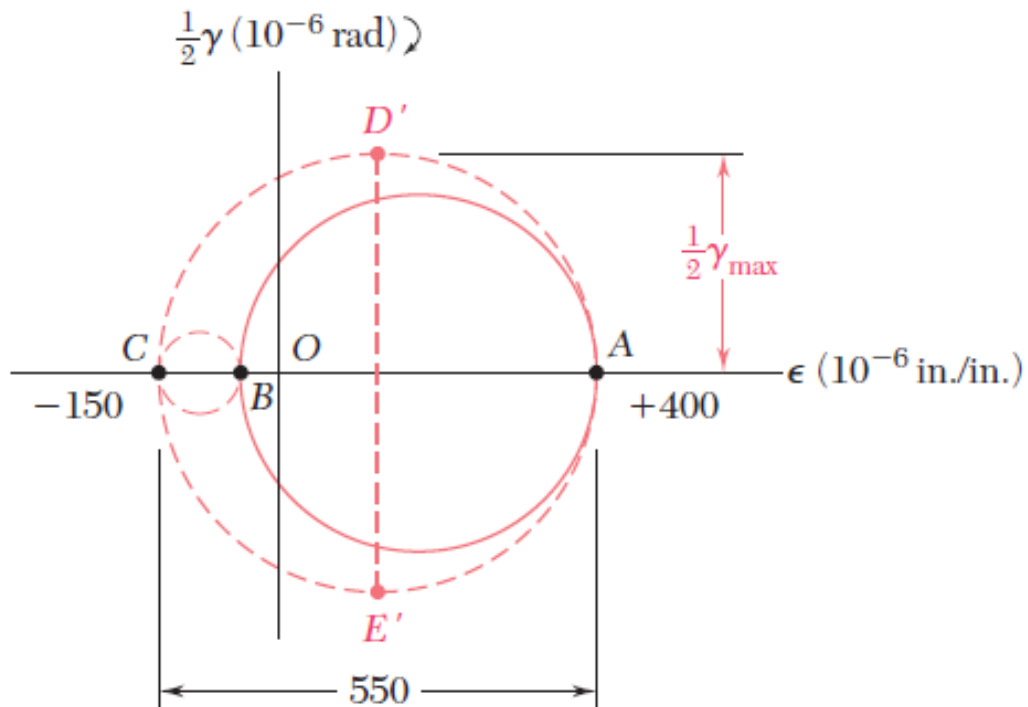
Example 13



Transformations of Stress and Strain

□ Three-Dimensional Analysis of Strain

Example 13

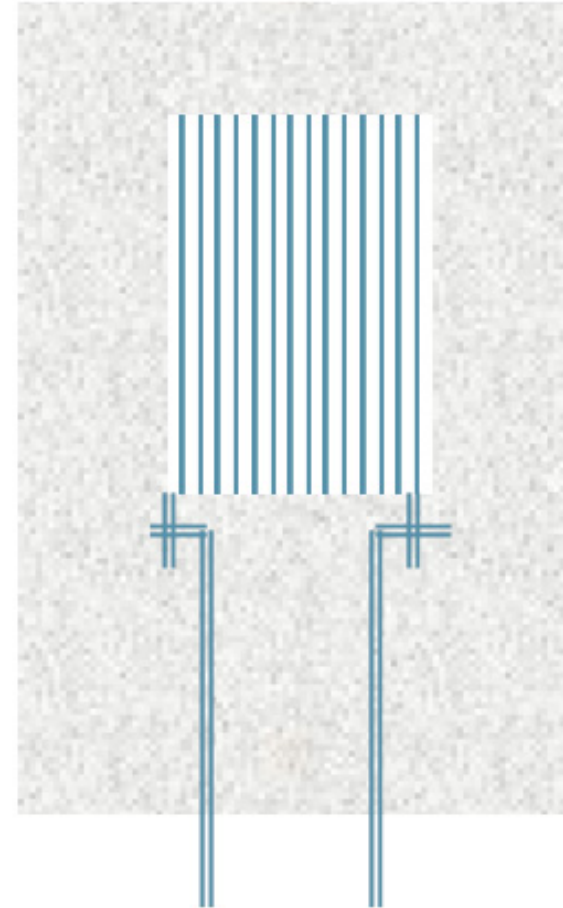


Transformations of Stress and Strain

□ Three-Dimensional Analysis of Strain

Strain Measurement and Rosette Analysis

- Electrical resistance strain gages provide accurate measurements of normal strain.
- The gage may consist of a length of 0.001 in-diameter wire arranged and cemented between two pieces of paper.



Transformations of Stress and Strain

□ **Three-Dimensional Analysis of Strain**

Strain Measurement and Rosette Analysis

- The wire or foil gage is centered to the material for which the strain is to be determine.
- As the material is strained, the wires are lengthened or shortened.
- This lengthening and shortening will cause changes in the electrical resistance.

Transformations of Stress and Strain

□ **Three-Dimensional Analysis of Strain**

Strain Measurement and Rosette Analysis

- The change in resistance can be measured and calibrated to provide normal strain
- Shearing strains are often obtained by measuring normal strains in two or three different directions.
- The shearing strains can be computed from normal strain data.

Transformations of Stress and Strain

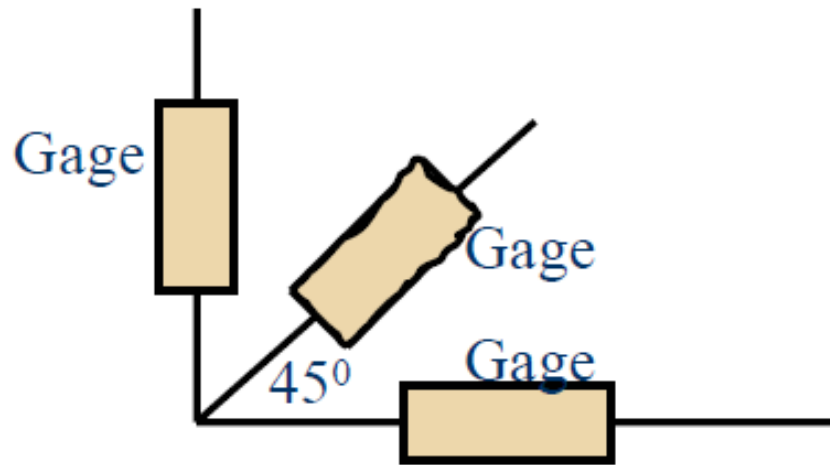
□ Three-Dimensional Analysis of Strain

Strain Measurement and Rosette Analysis

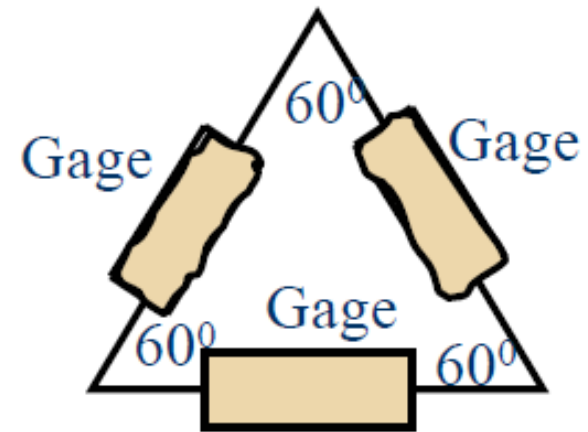
Rosette

Types

-



(a) 45° Rosette



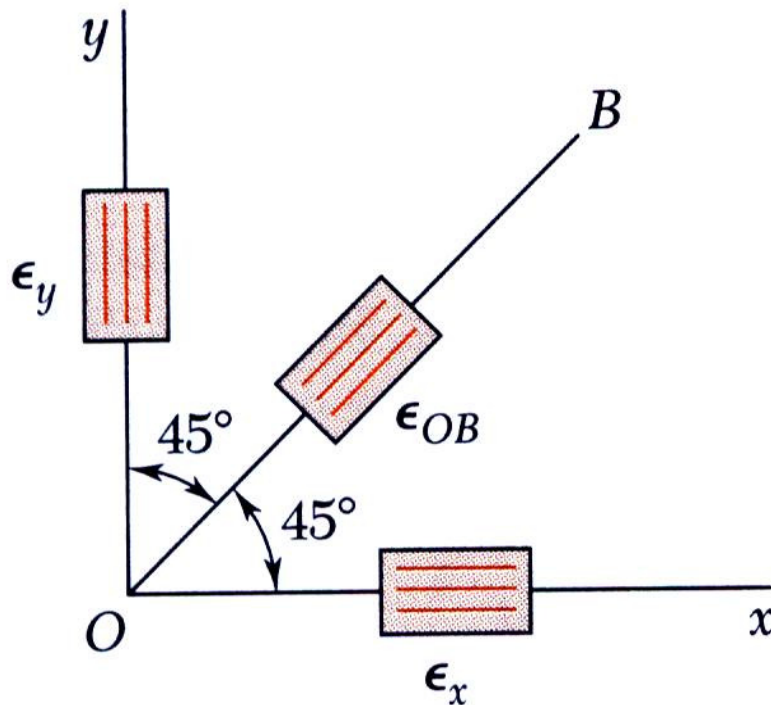
(a) Delta Rosette

Transformations of Stress and Strain

□ Three-Dimensional Analysis of Strain

Strain Measurement and Rosette Analysis

- With a 45° rosette, ϵ_x and ϵ_y are measured directly. γ_{xy} is obtained indirectly with,



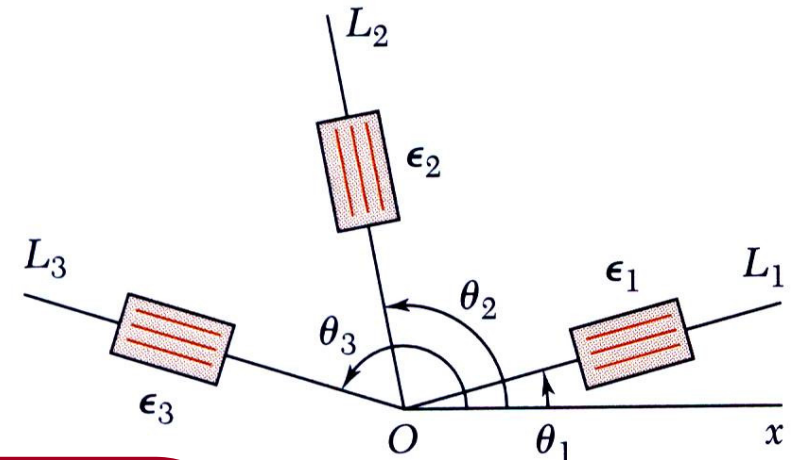
$$\gamma_{xy} = 2\epsilon_{OB} - (\epsilon_x + \epsilon_y)$$

Transformations of Stress and Strain

□ Three-Dimensional Analysis of Strain

Strain Measurement and Rosette Analysis

- Normal and shearing strains may be obtained from normal strains in any three directions,



$$\epsilon_1 = \epsilon_x \cos^2 \theta_1 + \epsilon_y \sin^2 \theta_1 + \gamma_{xy} \sin \theta_1 \cos \theta_1$$

$$\epsilon_2 = \epsilon_x \cos^2 \theta_2 + \epsilon_y \sin^2 \theta_2 + \gamma_{xy} \sin \theta_2 \cos \theta_2$$

$$\epsilon_3 = \epsilon_x \cos^2 \theta_3 + \epsilon_y \sin^2 \theta_3 + \gamma_{xy} \sin \theta_3 \cos \theta_3$$

Transformations of Stress and Strain

□ Three-Dimensional Analysis of Strain

Example 14

At a point on the free surface of an aluminum alloy machine part, the strain rosette shown in following was used to obtain this normal strain data:

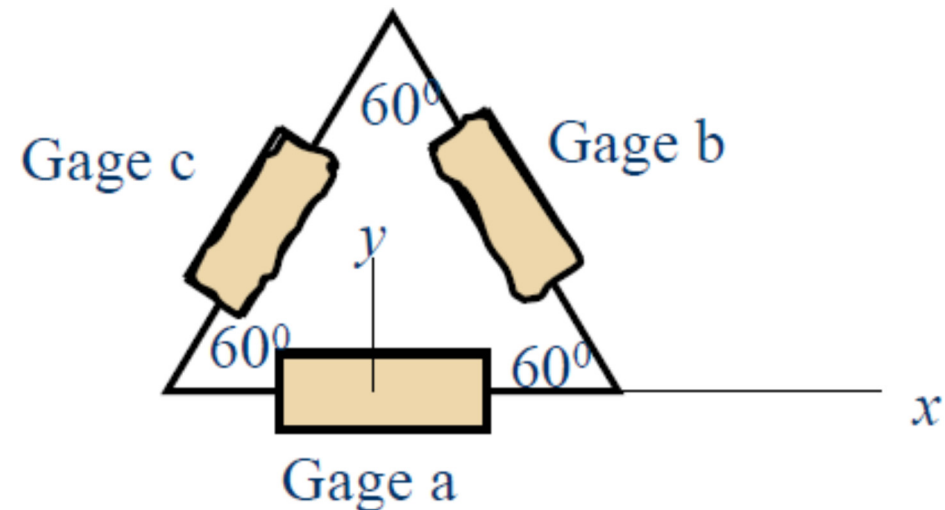
$$\varepsilon_a = +780\mu$$

$$\varepsilon_b = +345\mu$$

$$\varepsilon_c = -332\mu$$

$$E = 73 \text{ Gpa}$$

$$\nu = 0.33$$



Determine:

(a) the strain components.

(b) the principal strains and maximum shearing strain.

Transformations of Stress and Strain

□ Three-Dimensional Analysis of Strain

Example 14

Transformations of Stress and Strain

□ **Three-Dimensional Analysis of Strain**

Example 14

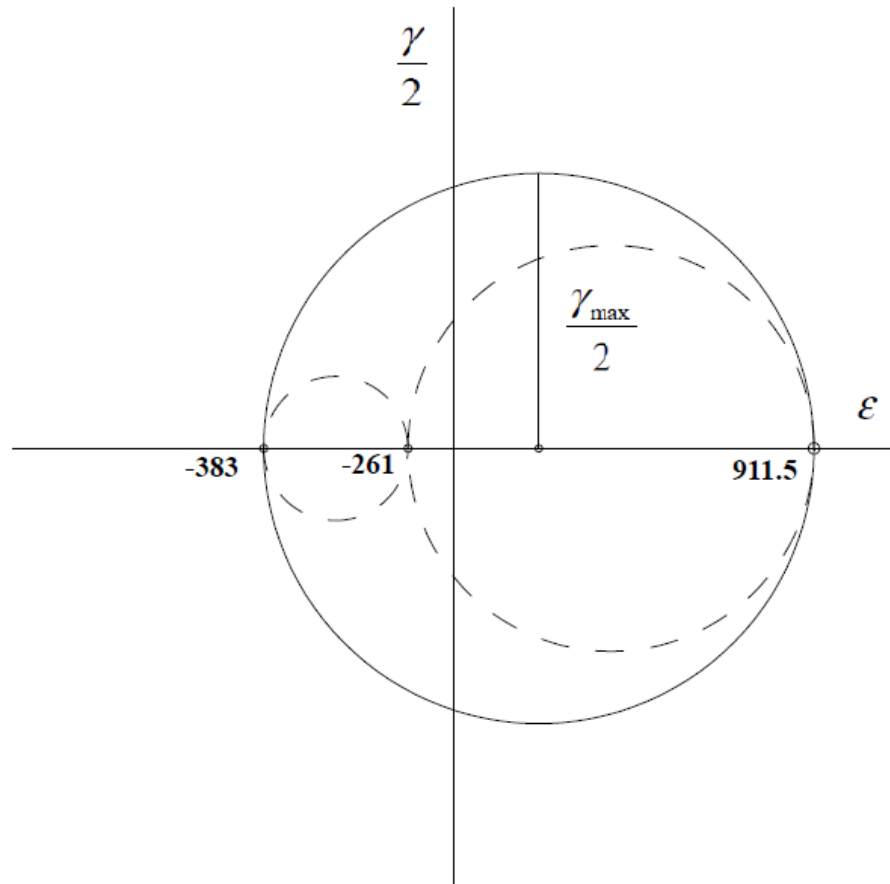
Solving these equations yields

Principle Strains

Transformations of Stress and Strain

□ Three-Dimensional Analysis of Strain

Example 14



Transformations of Stress and Strain

□ Three-Dimensional Analysis of Strain

Example 15

The strain rosette was used to obtain normal strain data at a point on the free surface of aluminum alloy structural component. rosette was used to obtain this normal strain data:

$$\varepsilon_a = +525\mu$$

$$E = 73 \text{ Gpa}$$

$$\varepsilon_b = +450\mu$$

$$G = 28 \text{ Gpa}$$

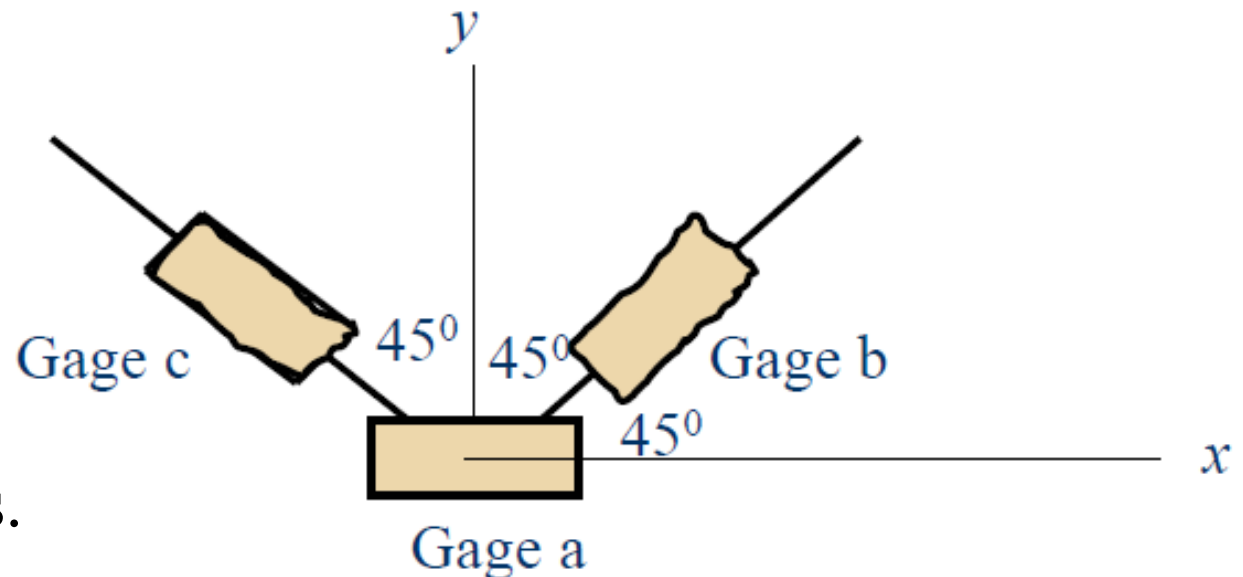
$$\varepsilon_c = +1425\mu$$

Determine:

(a) The strain components.

(b) The stress components.

(c) The principal stresses and maximum shearing stress at the point



Transformations of Stress and Strain

□ Three-Dimensional Analysis of Strain

Example 15

Transformations of Stress and Strain

□ Three-Dimensional Analysis of Strain

Example 15

Solving these equations yields

Principle Strains

Transformations of Stress and Strain

□ Three-Dimensional Analysis of Strain

Example 15

Transformations of Stress and Strain

□ Three-Dimensional Analysis of Strain

Example 15



Transformations of Stress and Strain

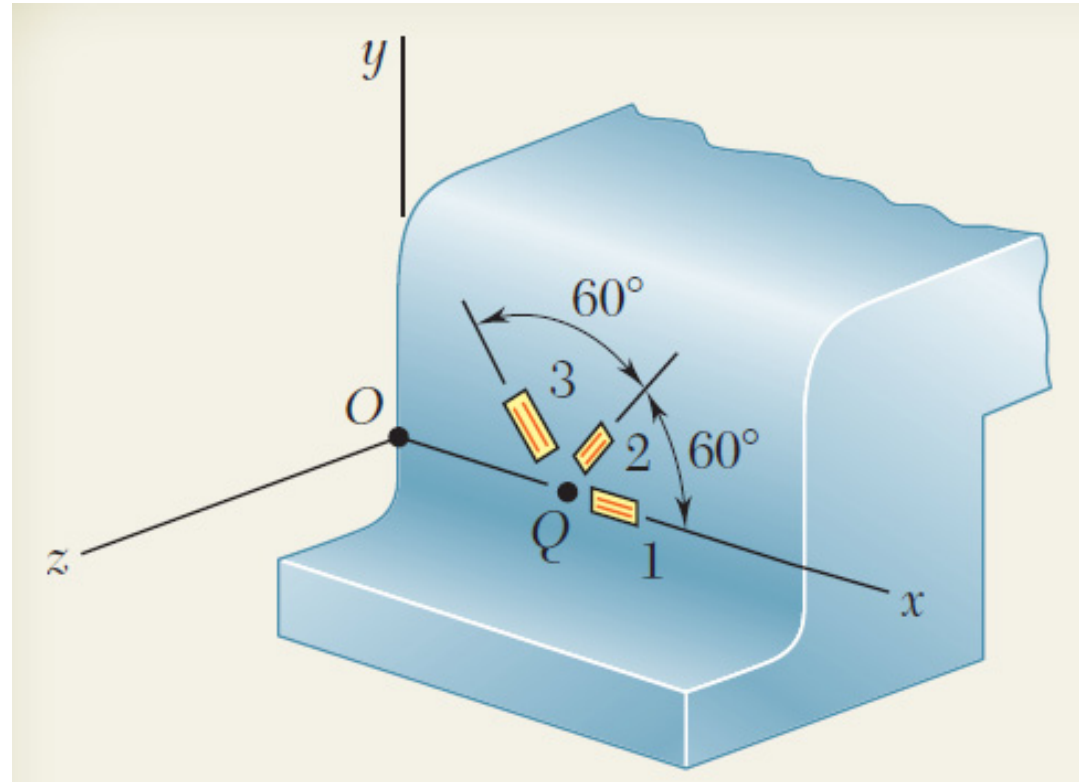
□ Three-Dimensional Analysis of Strain

Example 16

$$\varepsilon_1 = 40\mu$$

$$\varepsilon_2 = 980\mu$$

$$\varepsilon_3 = 330\mu$$



Determine:

- The strain components.
- The principle strains.
- Maximum shearing strain.

Transformations of Stress and Strain

□ **Three-Dimensional Analysis of Strain**

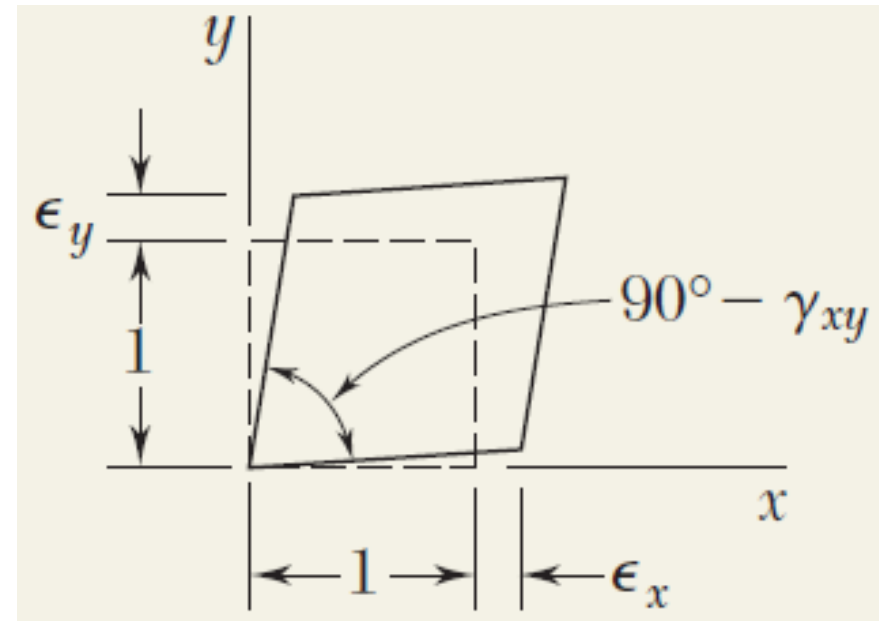
Example 16

Transformations of Stress and Strain

□ Three-Dimensional Analysis of Strain

Example 16

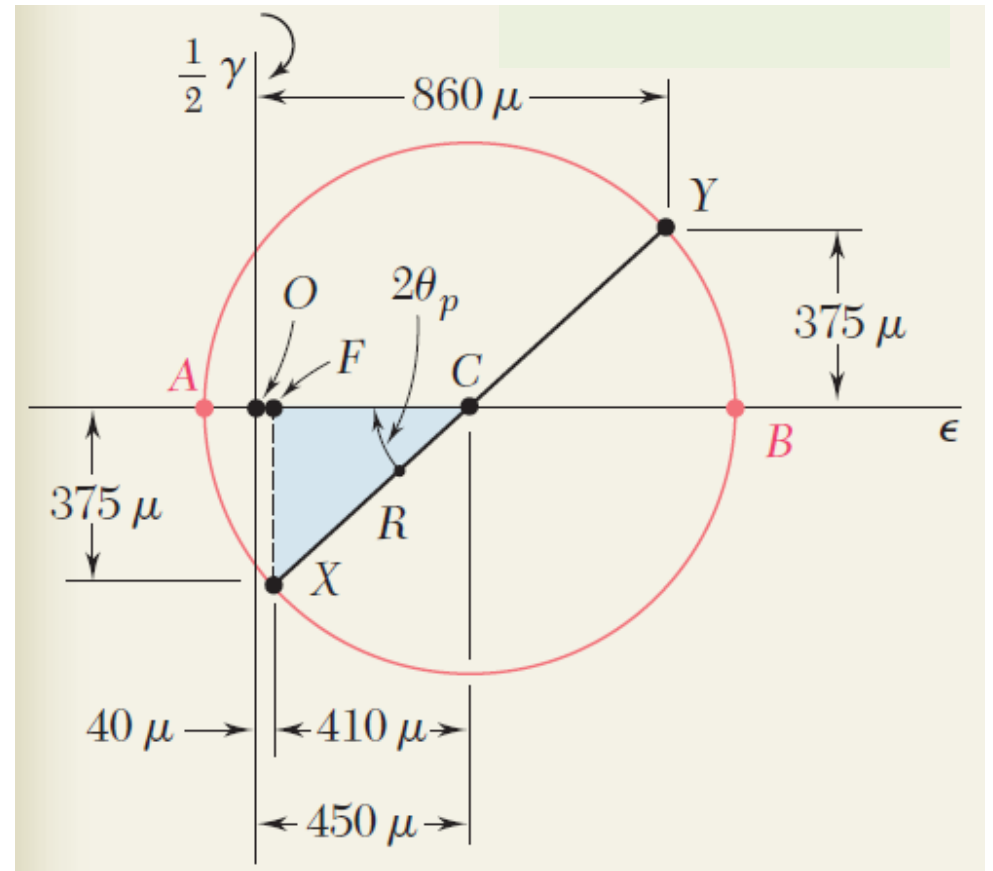
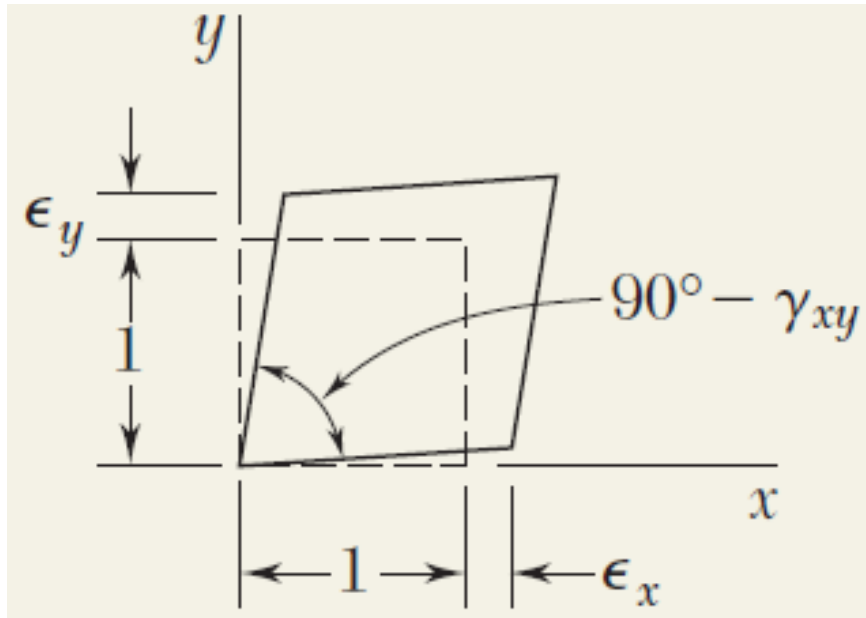
Solving these equations yields



Transformations of Stress and Strain

□ Three-Dimensional Analysis of Strain

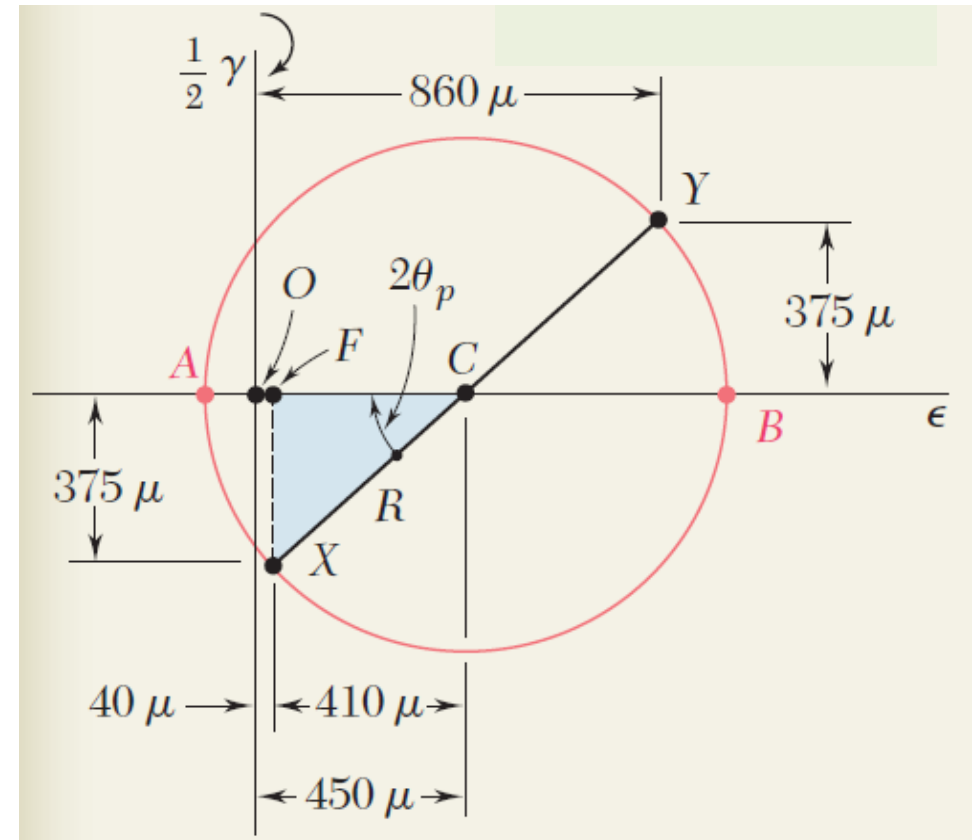
Example 16



Transformations of Stress and Strain

□ Three-Dimensional Analysis of Strain

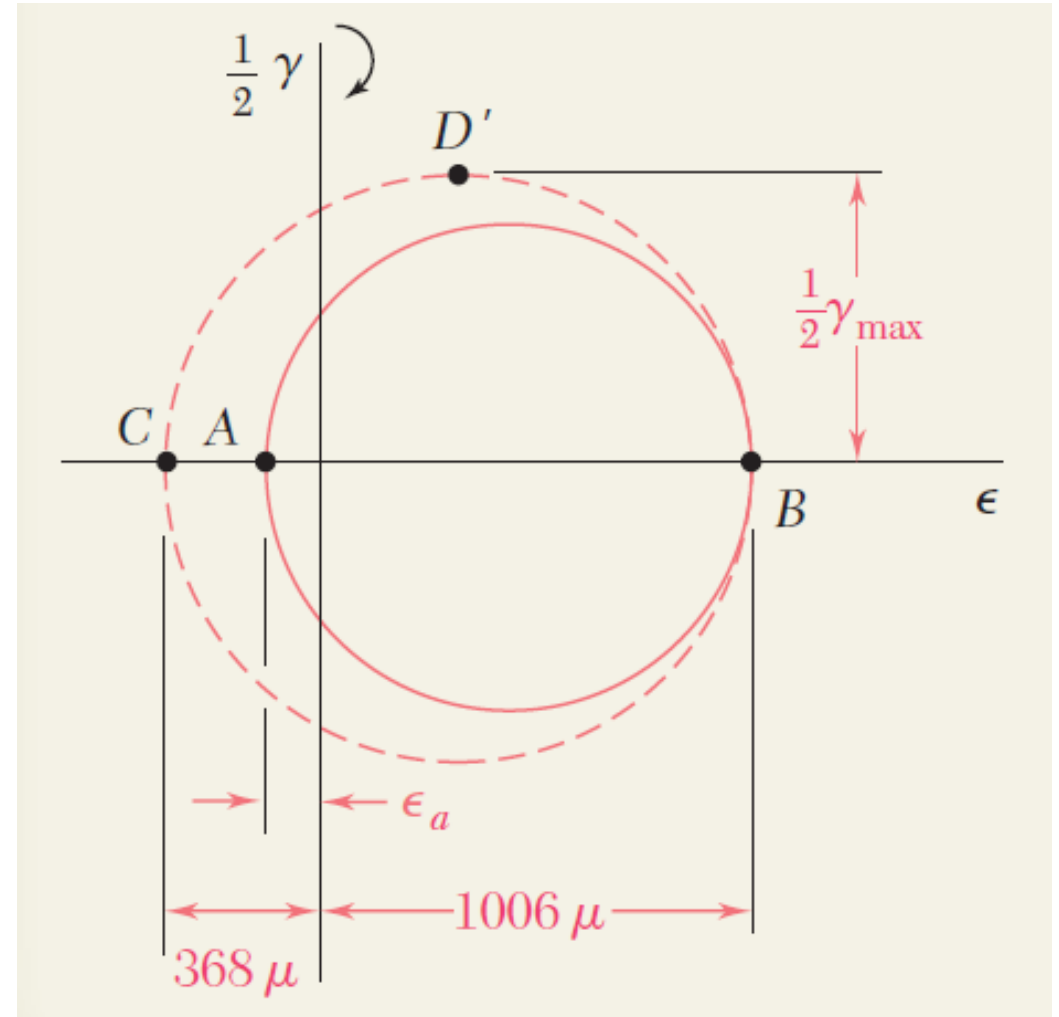
Example 16



Transformations of Stress and Strain

□ Three-Dimensional Analysis of Strain

Example 16



UNITS CONVERSION TABLES

Table 1: Multiples and Submultiples of SI units

Prefix	Symbol	Multiplying Factor	
exa	E	10^{18}	1 000 000 000 000 000 000
peta	P	10^{15}	1 000 000 000 000 000
tera	T	10^{12}	1 000 000 000 000
giga	G	10^9	1 000 000 000
mega	M	10^6	1 000 000
kilo	k	10^3	1 000
hecto*	h	10^2	100
deca*	da	10	10
deci*	d	10^{-1}	0.1
centi	c	10^{-2}	0.01
milli	m	10^{-3}	0.001
micro	u	10^{-6}	0.000 001
nano	n	10^{-9}	0.000 000 001
pico	p	10^{-12}	0.000 000 000 001
femto	f	10^{-15}	0.000 000 000 000 001
atto	a	10^{-18}	0.000 000 000 000 000 001

* these prefixes are not normally used

UNITS CONVERSION TABLES

Table 2: Length Units

Millimeters	Centimeters	Meters	Kilometers	Inches	Feet	Yards	Miles
mm	cm	m	km	in	ft	yd	mi
1	0.1	0.001	0.000001	0.03937	0.003281	0.001094	6.21e-07
10	1	0.01	0.00001	0.393701	0.032808	0.010936	0.000006
1000	100	1	0.001	39.37008	3.28084	1.093613	0.000621
1000000	100000	1000	1	39370.08	3280.84	1093.613	0.621371
25.4	2.54	0.0254	0.000025	1	0.083333	0.027778	0.000016
304.8	30.48	0.3048	0.000305	12	1	0.333333	0.000189
914.4	91.44	0.9144	0.000914	36	3	1	0.000568
1609344	160934.4	1609.344	1.609344	63360	5280	1760	1

Table 3: Area Units

Millimeter square	Centimeter square	Meter square	Inch square	Foot square	Yard square
mm ²	cm ²	m ²	in ²	ft ²	yd ²
1	0.01	0.000001	0.00155	0.000011	0.000001
100	1	0.0001	0.155	0.001076	0.00012
1000000	10000	1	1550.003	10.76391	1.19599
645.16	6.4516	0.000645	1	0.006944	0.000772
92903	929.0304	0.092903	144	1	0.111111
836127	8361.274	0.836127	1296	9	1

UNITS CONVERSION TABLES

Table 4: Volume Units

Centimeter cube	Meter cube	Liter	Inch cube	Foot cube	US gallons	Imperial gallons	US barrel (oil)
cm ³	m ³	ltr	in ³	ft ³	US gal	Imp. gal	US brl
1	0.000001	0.001	0.061024	0.000035	0.000264	0.00022	0.000006
1000000	1	1000	61024	35	264	220	6.29
1000	0.001	1	61	0.035	0.264201	0.22	0.00629
16.4	0.000016	0.016387	1	0.000579	0.004329	0.003605	0.000103
28317	0.028317	28.31685	1728	1	7.481333	6.229712	0.178127
3785	0.003785	3.79	231	0.13	1	0.832701	0.02381
4545	0.004545	4.55	277	0.16	1.20	1	0.028593
158970	0.15897	159	9701	6	42	35	1

Table 5: Mass Units

Grams	Kilograms	Metric tonnes	Short ton	Long ton	Pounds	Ounces
g	kg	tonne	shton	Lton	lb	oz
1	0.001	0.000001	0.000001	9.84e-07	0.002205	0.035273
1000	1	0.001	0.001102	0.000984	2.204586	35.27337
1000000	1000	1	1.102293	0.984252	2204.586	35273.37
907200	907.2	0.9072	1	0.892913	2000	32000
1016000	1016	1.016	1.119929	1	2239.859	35837.74
453.6	0.4536	0.000454	0.0005	0.000446	1	16
28	0.02835	0.000028	0.000031	0.000028	0.0625	1

UNITS CONVERSION TABLES

Table 10: High Pressure Units

Bar	Pound/square inch	Kilopascal	Megapascal	Kilogram force/centimeter square	Millimeter of mercury	Atmospheres
bar	psi	kPa	MPa	kgf/cm ²	mm Hg	atm
1	14.50326	100	0.1	1.01968	750.0188	0.987167
0.06895	1	6.895	0.006895	0.070307	51.71379	0.068065
0.01	0.1450	1	0.001	0.01020	7.5002	0.00987
10	145.03	1000	1	10.197	7500.2	9.8717
0.9807	14.22335	98.07	0.09807	1	735.5434	0.968115
0.001333	0.019337	0.13333	0.000133	0.00136	1	0.001316
1.013	14.69181	101.3	0.1013	1.032936	759.769	1

Table 16: Temperature Conversion Formulas

Degree Celsius (°C)	$(^{\circ}\text{F} - 32) \times 5/9$
	$(\text{K} - 273.15)$
Degree Fahrenheit (°F)	$(^{\circ}\text{C} \times 9/5) + 32$
	$(1.8 \times \text{K}) - 459.67$
Kelvin (K)	$(^{\circ}\text{C} + 273.15)$
	$(^{\circ}\text{F} + 459.67) \div 1.8$