

Mechanics of Materials



دانشگاه کردستان
University of Kurdistan
زانکۆی کوردستان

Ferdinand P.Beer, E.Russel Johnston, Jr., John T.Dewolf

Other Reference:

J.Wat Oler “Lectures notes on Mechanics od Materials”

Ibrahim A.Assakkaf “Lectures notes on Mechanics od Materials”

Homework-05

By: Kaveh Karami

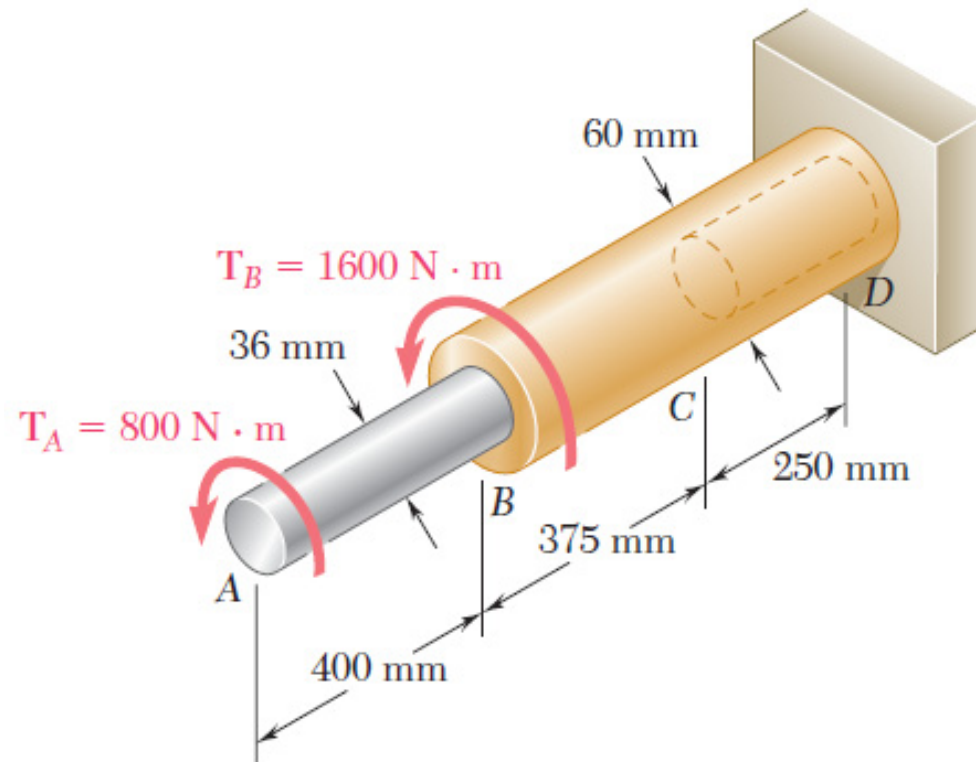
Associate Prof. of Structural Engineering

<https://prof.uok.ac.ir/Ka.Karami>

Homework-05

□ Problem 01

The aluminum rod AB ($G = 27 \text{ GPa}$) is bonded to the brass rod BD ($G = 39 \text{ GPa}$). Knowing that portion CD of the brass rod is hollow and has an inner diameter of 40 mm, determine the angle of twist at A.

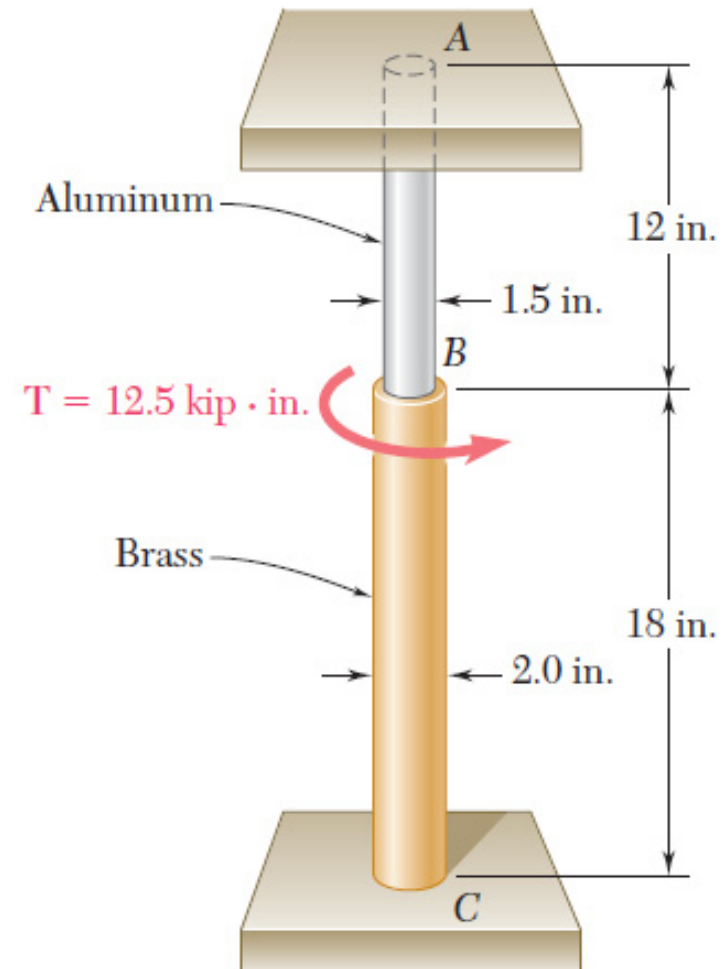


Key Answer: 6.02°

Homework-05

□ Problem 02

The solid cylinders AB and BC are bonded together at B and are attached to fixed supports at A and C. Knowing that the modulus of rigidity is 3.7×10^6 psi for aluminum and 5.6×10^6 psi for brass, determine the maximum shearing stress (a) in cylinder AB, (b) in cylinder BC.

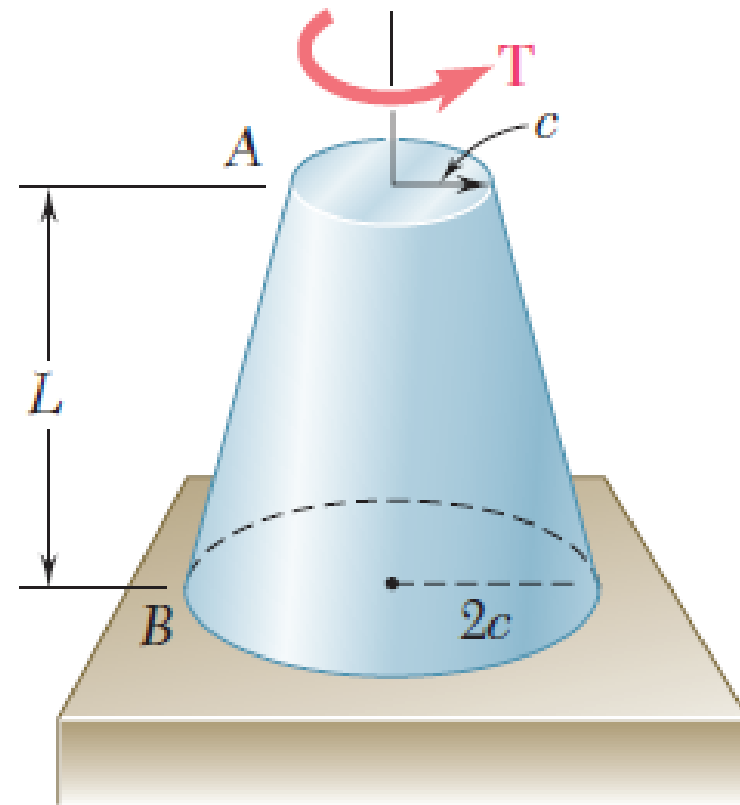


Homework-05

□ Problem 03

A torque T is applied as shown to a solid tapered shaft AB. Show by integration that the angle of twist at A is

$$\phi = \frac{7TL}{12\pi Gc^4}$$

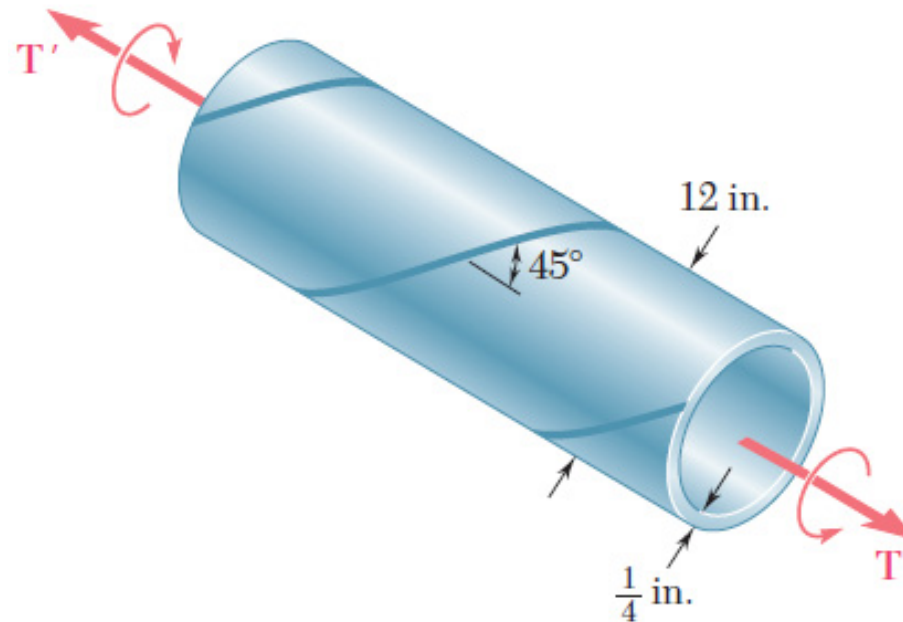


Key Answer: 6.02°

Homework-05

□ Problem 04

A steel pipe of 12-in. outer diameter is fabricated from $\frac{1}{4}$ -in.-thick plate by welding along a helix that forms an angle of 45° with a plane perpendicular to the axis of the pipe. Knowing that the maximum allowable tensile stress in the weld is 12 ksi, determine the largest torque that can be applied to the pipe.



Key Answer: 6.37 kip - in.